

**MBS INTERNATIONAL SCHOOL**

**SESSION - 2019-20**

**CLASS - II**

**SUBJECT – MATHEMATICS**

**WORKSHEET**

**Name:**

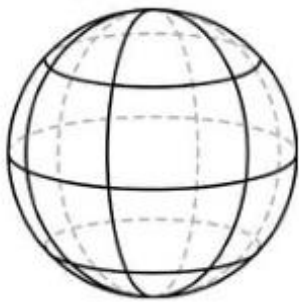
**Section:**

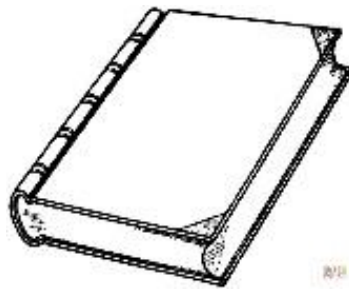
**Roll No.-**

**Date:**

1.

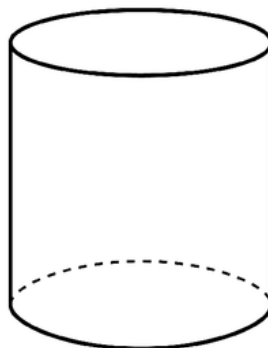
Look at these objects. Name the shape each looks like..















**Fill in the blanks with correct words.**

- a) A circle has \_\_\_\_\_ curved sides, \_\_\_\_\_ straight lines and \_\_\_\_\_ corners.
- b) A cube has \_\_\_\_\_ curved faces .
- c) The two shapes which have no corners are \_\_\_\_\_ and \_\_\_\_\_.
- d) \_\_\_\_\_ has four equal sides and four corners.
- e) My opposite sides are equal . I am a \_\_\_\_\_.
- f) I have one vertex . I am a \_\_\_\_\_ .

4.

**Complete the pattern by filling the missing shapes**

1.



2.



3.



4.

