

**St. Mary's School, Dwarka**  
**Practice Worksheet (December)**  
**Class: I**  
**Subject: English**

**Topic: L-11, The Story Game**

**Name:** \_\_\_\_\_ **Sec:** \_\_\_\_\_ **Date:** \_\_\_\_\_ **Roll No:** \_\_\_\_\_

**1. Read the passage carefully and answer the questions that follow.**

Renee is very happy today. Her father is taking her to a water park. Renee's friend Rony is also going with her. Renee packs her bag. She keeps some food, juice and a ball in her bag. Mother keeps some fruits in the basket. Papa calls Renee. Renee runs down the stairs and slips hard. She is hurt, but she smiles and happily sits in the car.

a) Where is Renee's father taking her today?

\_\_\_\_\_

b) Who is going with Renee?

\_\_\_\_\_

c) Find the rhyming words of the given words from the passage.

i) dark - \_\_\_\_\_ ii) town - \_\_\_\_\_

d) Find any two action words from the passage.

i) \_\_\_\_\_ ii) \_\_\_\_\_

e) Make sentences of your own using the given words.

i) basket – \_\_\_\_\_

**2. Answer the following questions.**

a) Who lives in the banyan tree?

\_\_\_\_\_

b) Where does Mrs. Owl makes her house?


\_\_\_\_\_

**3. Complete the word chain.**

a) lovely \_\_\_\_\_

b) branch \_\_\_\_\_

**4. Look at the picture carefully. Fill in the blanks with the correct word from the box.**




in  
behind  
under  
on  
between  
in front of

- a) The dog is \_\_\_\_\_ the bed.
- b) The lamp is \_\_\_\_\_ the study table.
- c) The bed is \_\_\_\_\_ study table and drawer.
- d) The books are \_\_\_\_\_ the box.
- e) The cat is \_\_\_\_\_ the computer.
- f) The boxes are \_\_\_\_\_ the bed.

**5. Look at the picture and complete the sentences using the given hints.**

learners , beautiful , vegetables , green , grain , red



- a) \_\_\_\_\_
- b) \_\_\_\_\_
- c) \_\_\_\_\_
- d) \_\_\_\_\_

**St. Mary's School, Dwarka**  
**Practice Worksheet (December)**  
**Class: I**  
**Subject: Hindi**

**विषय : अँ की मात्रा**  
**पाठ-माँ**

**Name:** \_\_\_\_\_ **Sec:** \_\_\_\_\_ **Date:** \_\_\_\_\_ **Roll No:** \_\_\_\_\_

**1. नीचे दिए गए गद्यांश को पढ़कर प्रश्नों के उत्तर दीजिए-**

गिलहरी का जन्मदिन था। उसने अपने सभी मित्रों को बुलाया। खरगोश ने दावत की तैयारियाँ शुरू कर दी। सब अपनी मनपसंद की चीजें लाए। बंदर मीठे-मीठे फल लाया। गिलहरी मूँगफली और खरगोश लाल-लाल गाजर लाया। तोता अमरूद और हरी मिर्च लाया। तिल्ली फूलों का मीठा रस लाई। चूहा दुकान से केक का टुकड़ा लाया और कौआ पकौड़े लाया। सबने गिलहरी को जन्मदिन की बधाई दी और दावत का आनंद लिया।

क) किसका जन्मदिन था?

\_\_\_\_\_

ख) दावत की तैयारियाँ किसने शुरू की?

\_\_\_\_\_

ग) चूहा क्या लाया?

\_\_\_\_\_

घ) गद्यांश में से किन्हीं दो (ँ और ँ) की मात्रा के शब्द ढूँढ़कर लिखिए-

i)

\_\_\_\_\_

ii)

\_\_\_\_\_

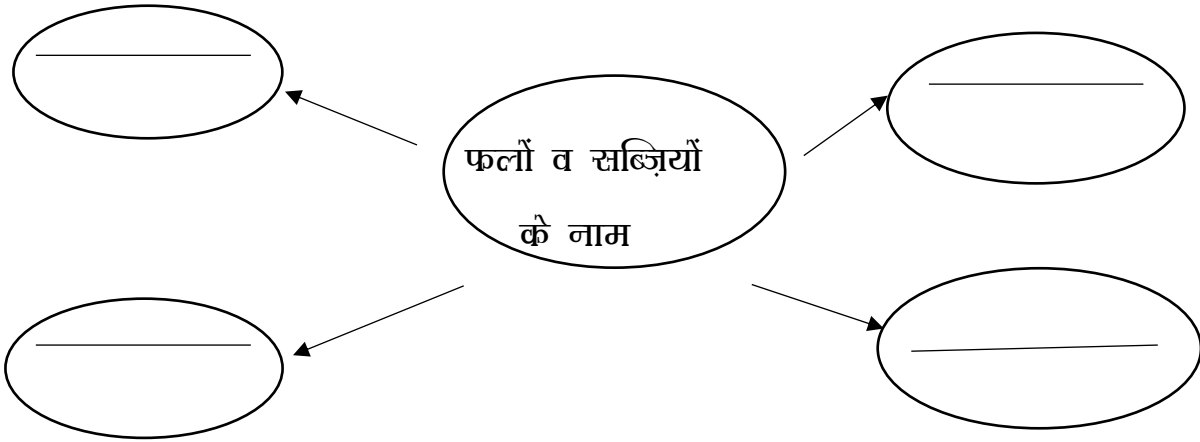
iii)

\_\_\_\_\_

iv)

\_\_\_\_\_

2. नीचे दिए गए जी.ओ को पूरा करते हुए किन्हीं दो फलों और दो सब्जियों के नाम लिखिए-



3. नीचे दिए गए प्रश्नों के उत्तर दीजिए-

क) कल माँ कहाँ जाएंगी?

\_\_\_\_\_

ख) वहाँ पर सब बाँसुरी कहाँ बजाएंगे?

\_\_\_\_\_

4. दिए गए शब्दों से वाक्य बनाइए-

क) चाँद-

\_\_\_\_\_

ख) बाँसुरी-

\_\_\_\_\_

5. नीचे दिए गए व्यंजनों से दो-दो शब्द बनाकर लिखिए-

क) क् + क-

\_\_\_\_\_

ख) त् + त-

\_\_\_\_\_

ग) ल् + ल-

\_\_\_\_\_

घ) ब् + ब-


\_\_\_\_\_

**St. Mary's School, Dwarka**  
**Practice Worksheet (December)**  
**Class: I**  
**Subject: Mathematics**

**Topic: Ch - 12, Graphs**  
**Ch - 13, Numbers up to 100**

**Name :** \_\_\_\_\_ **Sec:** \_\_\_\_\_ **Date:** \_\_\_\_\_ **Roll No.** \_\_\_\_\_

**1. Look at the picture and complete the tally table.**



Thing	Tally	Total
fish		
star fish		
seahorse		
dolphin		
octopus		

**2. Write the number names of the following numerals.**

- a) 25 – \_\_\_\_\_ b) 36 – \_\_\_\_\_
- c) 58 – \_\_\_\_\_ d) 63 – \_\_\_\_\_
- e) 74 – \_\_\_\_\_ f) 89 – \_\_\_\_\_
- g) 91 – \_\_\_\_\_ h) 100 – \_\_\_\_\_
- i) 11 – \_\_\_\_\_ j) 19 – \_\_\_\_\_

#### 4. Fill in the missing numbers.

a) 23    \_\_\_\_\_    26    \_\_\_\_\_

b) 78    79    \_\_\_\_\_    81    \_\_\_\_\_

c) 45    \_\_\_\_\_    \_\_\_\_\_    \_\_\_\_\_    \_\_\_\_\_

d) \_\_\_\_\_ 82    \_\_\_\_\_    84    \_\_\_\_\_

#### 4. Write the numbers in tens and ones in the correct column.

number	tens	Ones
24		
57		
43		
72		
85		
90		

#### 5. Add

a)  $50 + 5 =$  \_\_\_\_\_

b)  $30 + 3 =$  \_\_\_\_\_

c)  $60 + 7 =$  \_\_\_\_\_

d)  $90 + 9 =$  \_\_\_\_\_

#### 6. Circle the smallest number.

a)    45                  67                  34

b)    12                  5                  21

c)    34                  27                  47

#### 7. Answer the following.

a) What is 10 more than 53?                  \_\_\_\_\_

b) What is 1 less than 55?                  \_\_\_\_\_

c) What is 10 less than 78                  \_\_\_\_\_

d) What is 1 more than 80                  \_\_\_\_\_

**St. Mary's School Dwarka**  
**Practice worksheet (December)**  
**Class: I**  
**Subject: Computer Science**

**Topic: Revision**

**Name:**\_\_\_\_\_ **Section:** \_\_\_\_\_ **Roll No:** \_\_\_\_\_ **Date:**\_\_\_\_\_

**1. Fill in the blanks with the correct word from the brackets.**

- a. A mouse is used to draw and \_\_\_\_\_. (paint/type)
- b. A mouse pointer is in the shape of a small \_\_\_\_\_. (square/arrow)
- c. Pressing the mouse button is called \_\_\_\_\_.(clicking/entering)
- d. Keep your index finger on the \_\_\_\_\_button.(left/center)

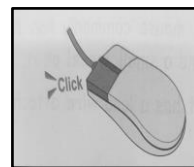
**2. Write T for true and F for false statements.**

- a. You can drag images using a mouse. [      ]
- b. Pressing the left mouse button once is called double click. [      ]
- c. To move the scroll wheel of the mouse, we use the thumb. [      ]
- d. We should keep our mouse on the mouse pad. [      ]

**3. Match the following**

a. Right click

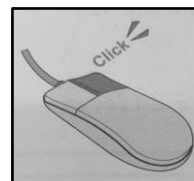
i



\_\_\_\_\_

b. Double Click

ii



\_\_\_\_\_

c. Single click

iii



\_\_\_\_\_

#### 4. Solve the following crossword puzzle.

##### Across

1 Brain of computer


4 Has two buttons and a wheel

5 Have 101-105 buttons on it

##### Down

2 Used to print

3 Television screen



#### 5. Practical Work

Create the scenery given below using tux paint and mail it to your respective teacher with your name, class and section on it.






**St. Mary's School, Dwarka**  
**Practice Worksheet (December)**  
**Class: I**  
**Subject: Language Practice**

**Name:** \_\_\_\_\_ **Sec:** \_\_\_\_\_ **Date:** \_\_\_\_\_ **Roll No:** \_\_\_\_\_

**1. Identify the names of the following festivals.**



a) \_\_\_\_\_



b) \_\_\_\_\_



c) \_\_\_\_\_



d) \_\_\_\_\_

**2. Name the following.**

a) Festival of colours- \_\_\_\_\_

b) The festival that celebrates good over evil- \_\_\_\_\_

c) Father of the nation- \_\_\_\_\_

d) National festival celebrated on 15<sup>th</sup> August- \_\_\_\_\_

e) Festival of lights- \_\_\_\_\_

f) A festival in which eggs are decorated- \_\_\_\_\_

**3. Write 'T' for true and 'F' for false.**

a) Republic Day is celebrated on 15<sup>th</sup> August. \_\_\_\_\_

b) Holi is the festival of lights. \_\_\_\_\_

c) People pray and sing carols in church on Christmas. \_\_\_\_\_

d) Gandhi Jayanti is celebrated on 2<sup>nd</sup> October. \_\_\_\_\_

e) Teachers Day is celebrated on 7<sup>th</sup> September. \_\_\_\_\_

f) Durga Puja is a famous festival celebrated in West Bengal. \_\_\_\_\_

**4. Match the following.**

a) Christmas i) festival of brother-sister bond. \_\_\_\_

b) Janmashtami ii) harvest festival \_\_\_\_

c) Raksha Bandhan iii) Chacha Nehru's birthday \_\_\_\_

d) Id iv) birth of Jesus Christ \_\_\_\_

e) Lohri v) sewaiyan \_\_\_\_

f) Children's Day vi) lord Krishna's birthday \_\_\_\_

**5. Draw a picture of your favourite festival.**

