

St. Mary's School, Dwarka
Holiday Homework
Class: XII
Subject: Geography

The Holiday homework has been divided into 3 sections

- 1. Project**
- 2. Practical File**
- 3. Assignment (Total 3 assignment)**

***You are required to submit your project and assignment holiday homework online.**

1. Project

“Virtual vacation during this Pandemic”

Students to use computer skills to research a vacation location analysing the climatic conditions, soil type, flora and fauna, resources, lifestyle based on climate,, figuring their coordinates and calculating the time zone from IST, the type of economy, it's world position in the HDI, population growth and density. Include natural and cultural factors to prepare a 5-minute journey to this place of your choice.

*Each student to prepare a video about their desired vacation location including all the points mentioned above. Include maps, pictures in your presentation. Presentation not to be more than 5minutes.

2. Practical file

Complete the portion covered for the practical as instructed during the online class.

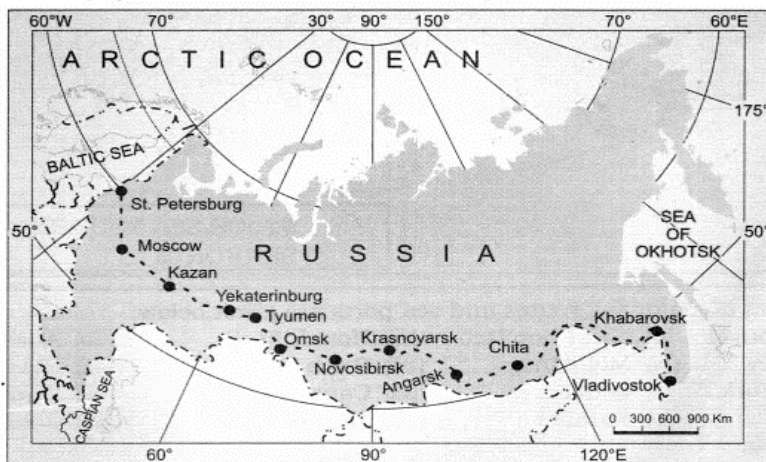
3. Assignment

All together 4 assignments for 1 mark, 3 marks, 5 marks and map skill questions

Worksheet 1 (Map Skill)

Q1. Study the map carefully and answer the questions that follows: -

(5)

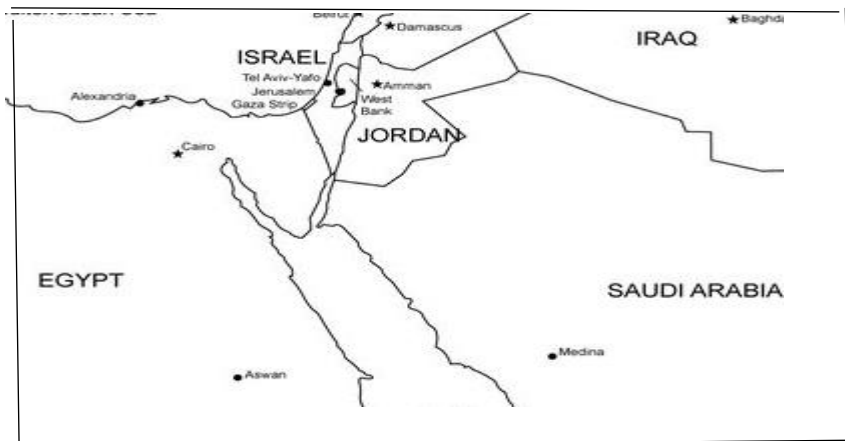


- (i) Name the railway line shown in the map.
- (ii) Name two ocean coasts which are being connected by this line.
- (iii) Write any three significance of this railway line.

Q2. Study the map carefully and answer the questions that follows-

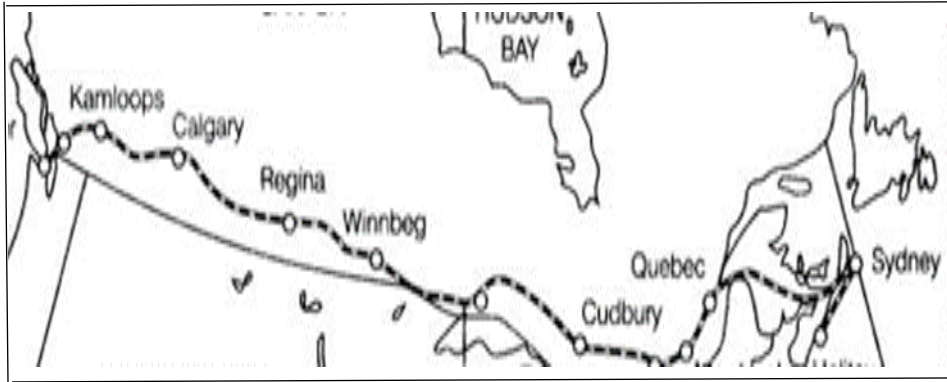
(5)

1. Identify the type of waterway
2. Name the seas connected through this waterway
3. Name the end ports of this waterway



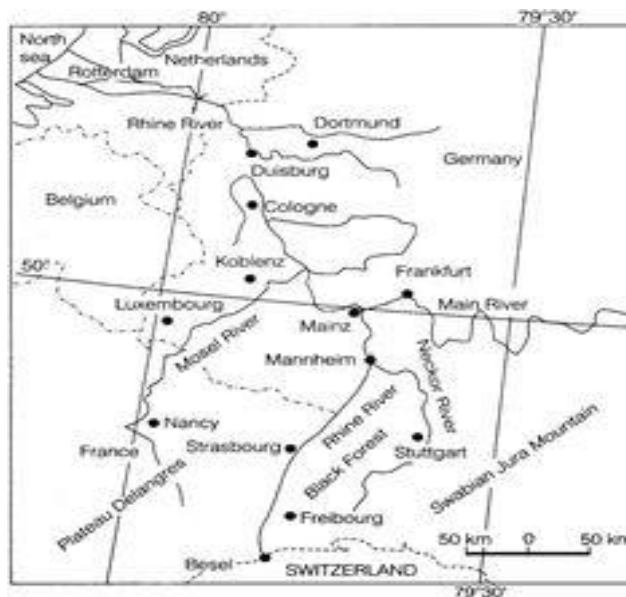
Q3. Study the given map carefully and answer the questions that follows: - (5)

1. Identify the railway line in the given map.
2. Name the terminal station to east and the west coast
3. Mark the oceans lying to the east and west of the terminal stations.



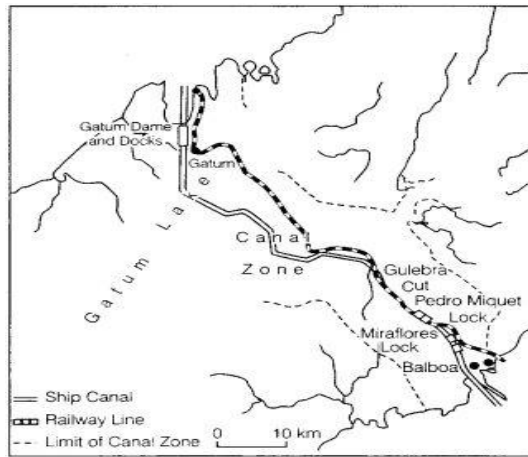
Q4. Study the given map and answer the questions: - (5)

1. Name the type of waterway and name the countries served by this waterway.
2. Why it is considered important for Europe.



Q5. Study the map carefully and answer the questions: - (5)

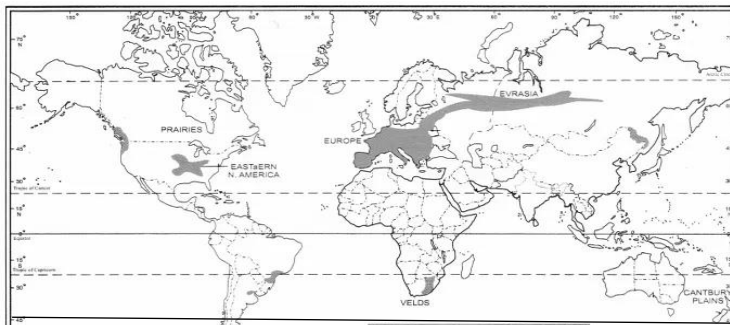
1. Identify the canal Zone and write its importance.
2. Name the terminal points of this canal zone and the connecting seas.
3. Explain is the lock system of this canal.



Q6. Study the given map and answer the questions that follows-

(5)

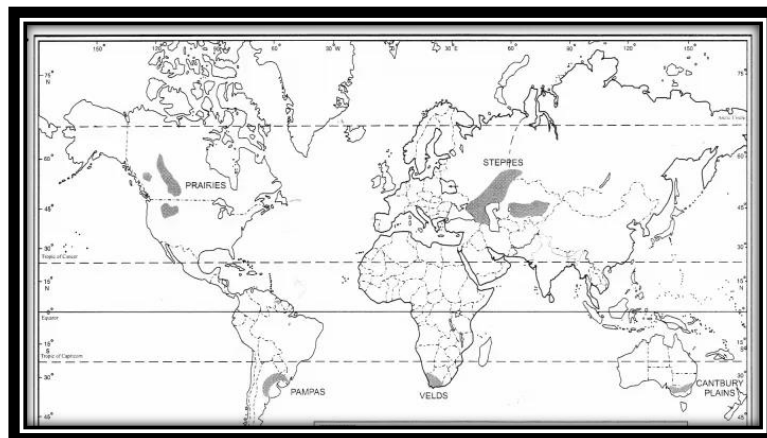
1. Identify the type of agriculture practiced in the shaded areas
2. Write 5 characteristics associated with this type of practice



Q7. Study the given map carefully and answer the questions that follows-

(5)

1. Identify the type of cultivation
2. Name the major crops cultivated in these areas.
3. 'Low yield per acre but high yield per person' justify the statement.



Worksheet 2 (Map Skill)

Q1. In political outline map of world mark the following features- (10)

1. Major Sea Ports: -
2. Europe: North Cape, London, Hamburg
3. North America: Vancouver, San Francisco, New Orleans
4. South America: Rio De Janeiro, Colon, Valparaiso
5. Africa: Suez, Durban, and Cape Town
6. Asia: Yokohama, Shanghai, Hong Kong, Aden, Karachi, Kolkata
7. Australia: Perth, Sydney, Melbourne

Q2. In a political map of world mark the major airports of the world- (10)

1. Asia: Tokyo, Beijing, Mumbai, Jedda, Aden
2. Africa: Johannesburg & Nairobi
3. Europe: Moscow, London, Paris, Berlin, and Rome
4. North America: Chicago, New Orleans, Mexico City
5. South America: Buenos Aires, Santiago
6. Australia: Darwin and Wellington

Q3. In the world political map mark the following features (10)

1. Country with the highest and the lowest HDI in the world
2. Industrial regions of the world -Ruhr region, Silicon Valley, Appalachian region, Great lakes region
3. Largest and smallest area of all the continents of the world.

Worksheet 3

1 Mark questions

- | | |
|--|---|
| Q1. What do you understand by the term trade? | 1 |
| Q2. Why does international trade exist? | 1 |
| Q3. Name the countries where the slave trade was abolished. | 1 |
| Q4. State any two functions of the World Trade organisation. | 1 |
| Q5. How is barter system practiced among various tribal communities in the world? | 1 |
| Q6. Assess the positive aspect of trade liberalisation. | 1 |
| Q7. How is favourable balance of trade and indicator of economic development of country? | 1 |
| Q8. What are naval ports? Give an example of a navel port. | 1 |
| Q9. Name the regional trade blocs of which India is a member. | 1 |

- Q10. Which city is the headquarters of the organisation of petroleum exporting countries? 1
- Q11. Mention the categories of international trade. 1
- Q12. Name the international organisation dealing with global rules of trade between Nations. 1

3 Marks Questions

- Q1. Explain with an example of how stage of economic development and foreign investment become the basis of international trade. 3
- Q2. What is free trade? Give two advantages of free trade. 3
- Q3. Why are ports called gateway of international trade? Explain any three reasons. 3
- Q4. Classify ports of the world into two types based on the location? Explain any two features of each type of ports. 3

5 marks Questions

- Q1 Name the vital man- made shipping canal which connects the Atlantic- ocean to the Pacific- ocean. State any four characteristics of this canal. 5
- Q2 Discuss in detail the factors influencing the distribution and density of population in the world. 5
- Q3 What is WTO? Why it has been criticized and opposed? Explain any four reasons. 5
- Q4 What are trading centers? Classify the trading centers and the characteristics of each. 5
- Q5 Explain the factors responsible for location of rural settlement. 5
- Q6 What are highways? Explain the significance of highways citing examples from different countries. 1+4=5
- Q7 “International trade can be beneficial and can also prove to be detrimental to nations”. Elaborate. 5
- Q8 Describe the basic goal of human development. Explain with examples the four pillars of human development. 5