



Venkateshwar International School

Dwarka Sector 18, New Delhi-78

Summer Vacation Holiday Homework (2019-2020)

Class – VII

Happy Holidays!

Dear Parents

Holidays are about experiences and people,

And tuning into what you feel like doing at that moment.

It's time to Relax, Reflect and Recharge!

Summer Vacation is a welcome break. A break from studies and explanations. It is about learning new things and engaging children in various scholastics and co-scholastic areas. Keeping this in mind, our teachers have designed and framed interesting project work / assignments to be completed during Summer Vacations to encourage in depth learning, clearing concepts and preparing ground for improved academic output. As parents, kindly motivate and lend support to your children and ensure that they complete the given work well-in-time and to the best of their ability. Your encouragement can actually make a huge difference to the ultimate learning outcome of their projects.

Please note the following:

- Make your child read Hindi and English story books and Science magazines.
- Encourage them to practice the same.
- To make them aware of their surroundings, tell them to watch various informative T.V. channels like Discovery, National Geographic, History and Animal Planet.
- Wake up early and wish elders / brother/ sister and parents.
- Go cycling & play games that involve running.
- Allow them to help you in cooking and other daily chores.
- Have at least two meals together with your children.
- Please try and keep them away from electronic gadgets like T.V. and Mobile.
- Last but not the least make them practice English and Hindi writing to improve their handwriting.

General instruction for homework:

- Holiday Homework submission as per the instructions of the subject teacher after the school reopens.
- Submit your work in file/folder with a cover page.
- Each subject to be submitted in a separate file / folder.
- Use ruled or perforated sheets.
- Present your work neatly and as creatively as possible.
- The work should be hand written.
- Summer break for students of Classes VI - VIII is going to begin from May 18, 2019 and the school reopens on July 01, 2019.
- Holiday homework of all subjects are uploaded on school website.

Please remind your ward to revise English Grammar, Mathematics and Science syllabus of previous class and present class till Mid-Term in advance for Inter- School SAT to be held on Friday, August 02, 2019.

We at Sri VIS also wish you a Very Happy Father's Day, to be celebrated on June 16, 2019. We hope this Father's Day is your very best by far.

WISH YOU VERY ENJOYABLE HOLIDAYS!

ENGLISH

Q1. “I do believe something very magical can happen when you read a good book.”

- J.K. Rowling

Read any one of the books:

1. Growing Up in Pandupur by Aditi and Chatura Rao
2. Painters Peters Cooks and Kings by Subhadra Sen Gupta

With reference to any one of these books mentioned, enrich your creative juices and develop a comic strip discussing different encounters and conversations between different characters and make it picturesque. (Use A3-sized coloured sheet)

Q2. “Poetry is when an emotion has found its thought and the thought has found words.”

– Robert Frost

Read poems on any nature poet like William Wordsworth, Robert Frost, John Keats, Percy Byron Shelley, etc. Taking inspiration, write your own short poem giving ode to nature. Do not forget to use poetic devices like personification, simile, metaphor, alliteration, imagery, etc. Make it picturesque by illustrating your work. (Use A3-sized coloured sheet)

'You have tangible wealth untold,
Caskets of jewels and coffers of gold,
Richer than I, you can never be
I have a mother who reads to me

-Strickland Gillian

We, at SVIS, take this opportunity to acknowledge the efforts of all wonderful mothers who take time to sit and teach their children to become avid readers. They not only make them understand the text but also teach them for fun. It is a truly glorious gift, which makes us grateful. These golden memories of bedtime stories will be cherished as some of the happiest memories of childhood. Here is a suggested reading list for parent.

S. No.	Title
1	Scholastic Classics: The Adventures Of The Sherlock Holmes
2	Scholastic Classics: Jane Eyre
3	Scholastic Classics: Wuthering Heights
4	Scholastic Classics: The Secret Garden
5	The Best Of O Henry : O. Henry (William Sydney Porter)
6	The Best Of Saki : Saki
7	Once Upon a Story : Divaswapna and the Gijubhai

हिंदी

- दिए गए संकेत बिंदुओं के आधार पर अपने शब्दों में कहानी लिखिए—
कौआ, कोयल, मधुर, कर्कश, घोंसला, पेड़, कुल्हाड़ी, घर, बगीचा, आँगन, पानी, शहर, मित्र।
गृहकार्य **A4** साइज़ शीट पर सुंदर लेख में कीजिए।

MATHEMATICS

1. Do the given practice worksheet and paste it in the HW register.
2. Do research on 'Scientific solutions for challenges in life' and make a mathematical model (preferably working).
(Model is not to be submitted on July 01, 2019. The date of submission would be intimated to the students after the school reopens).

SCIENCE

- Do the worksheets given in 'Thinking Classroom' for Chapter-9 Soil & Chapter-16 Water: A Precious Resource
- Make a project / model on any of the topics given below:
 1. Health and Nutrition.
 2. Disaster Management.
 3. Managing Natural Resources.
 4. Waste Management and Water Body Conservation.
 5. Electrical Circuits and Electromagnetism.
 - Use the scientific method of exploring and issue related to the topic.
 - What made you choose the project?
 - How did you research on it?
 - What hypothesis you drew or formulated?
 - What was your experimental / theoretical design to test your hypothesis?
 - What was your finding?
 - Did you re-verify your finding?
 - Any readymade model brought from the market will not be accepted. It has to be your own work.
 - It could be very simple as we are looking for researching and recording skills in you.
 - Your project should use waste material preferably.

SOCIAL SCIENCE

Chapter: (History) Monumental Architecture

A large number of monuments were built during the medieval period. Visit any of these monuments. Research, observe and study the architecture of the place and record the following details. Creatively present on an A4 size sheet.

1. Name of the monument
2. Picture of the monument (You can click your photograph with the monument and paste it)
3. Any effect of pollution you see in the monument (peeling, plaster falling off, marble turning black or green etc.)
4. Any environmental degradation around the area, such as garbage accommodation, human effects on the heritage area.
5. Suggestions you want to make to protect these monuments, improve their condition.

संस्कृतम्

- ए-4 शीट पर 'पर्यावरण बचाओ' से संबंधित दो स्लोगन चित्रात्मक रूप में प्रस्तुत करें।

FRENCH

- Create a picture dictionary entering one word everyday and depict the same through a self-explanatory picture. The dictionary must contain at-least 25 words in it.

GERMAN

- On an A4 size sheet make a poster on "Rette Baume- Rette die Welt" (save trees, save environment). Use only German words or slogans.

SPANISH

- Make a word picture on any one of the following topics:
1. Culture of Spain 2. Healthy food, healthy living. 3. Professions
(Use only Spanish vocabulary to make the word picture).

Examples of word picture:



CHINESE

- Write all Chinese characters of Lesson – 16, 17 on an A4 size sheet.

JAPANESE

- Write all HIRAGANA characters.
A I U E O to YA YU YO on an A4 size sheet.



Venkateshwar International School

Dwarka Sector 18, New Delhi-78

HOMEWORK WORKSHEET (2019-20)

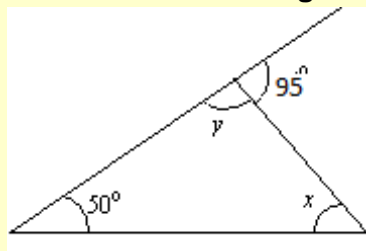
Mathematics – VII

Name: _____

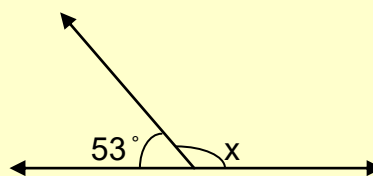
Sec. _____

Q1) Choose the correct alternative from the following:-

- a) How much less than -3 is -5 ?
(i) -2 (ii) 2 (iii) -8 (iv) none of these.
- b) If angles of a linear pair are equal, then the measure of each angle is:
(i) 30° (ii) 45° (iii) 60° (iv) 90°
- c) A line which intersects two or more lines at distinct points is called a/an _____.
(i) parallel line (ii) intersecting line (iii) transversal (iv) none of these.
- d) will be the value of x in the given figure



- (i) 45° (ii) 35° (iii) 55° (iv) none of these.
- e) The value of x in the given figure is _____.



- (i) 123° (ii) 127° (iii) 90° (iv) none of these.
- f) will be the sign of the product if we multiply 71 negative integers and 13 positive integers?
(i) Positive (ii) Negative (iii) cannot be determined (iv) None of these.
- g) Two poles of height 6 m and 11 m stand upright on a plane ground. If the distance between their feet is 12 m, will be the distance between their tops.
(i) 24 m (ii) 34 m (iii) 20 m (iv) none of these.

h) The two legs of a right triangle are equal and the square of the hypotenuse is 32. Find the length of each leg

- (i) 2 m (ii) 4 m (iii) 6 m (iv) none of these.

i) If you begin with a one digit integer, multiply by 3, add 8, divide by 2 and subtract 6, you will get the integer back. Find the number.

- (i) 4 (ii) 2 (iii) 3 (iv) 10

j) An angle is greater than 50° . Its complementary angle is _____.

- (i) greater than 40° (ii) less than 40°
(iii) equal to 40° (iv) less than or equal to 40° .

k) Which of the following is true?

- (i) $(-2) > 3$ (ii) $9 < (-9)$ (iii) $(-6) < (-8)$ (iv) $(-7) > (-12)$

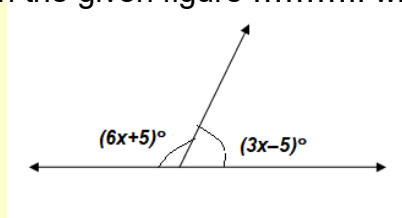
l) If $P = 45 - [5 + \{60 - (39 - 8)\}]$ and $Q = -12 + [25 - 2 \{16 - 9\}]$ then $|P| + |Q|$ is equal to _____.

- (i) 10 (ii) -10 (iii) 12 (iv) none of these.

m) Rajat thinks of an integer between -30 and -20. He subtracts another integer from this and gets a positive integer as the answer. Which of these could be the integer he subtracted?

- (i) -34 (ii) -17
(iii) 37 (iv) He cannot get a positive integer on subtraction.

n) In the given figure will be the value of x.



- (i) 4 (ii) 6 (iii) 8 (iv) none of these

o) A tree is broken by a wind but does not separate. If the point from where it breaks is 14 m above the ground and its top touches the ground at a distance of 49 m from its foot, will be the total height of the tree before it broke.

- (i) 54 m (ii) 16 m (iii) 33 m (iv) None of these

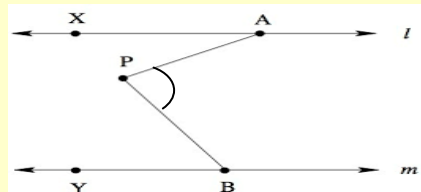
p) If exterior angle of an isosceles triangle is 110° and its interior opposite angles are equal then each angle is equal to _____.

- (i) 65° (ii) 55° (iii) 60° (iv) 50°

q) In a quiz, positive marks are given for correct answer and negative marks are given for incorrect answer. If Jatin's score in five successive rounds were 25, -5, -10, 15 and 10 what was his total at the end?

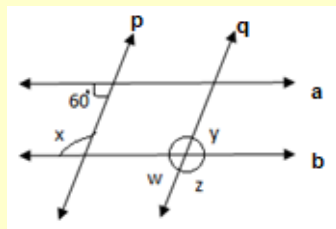
- (i) 0 (ii) 35 (iii) 20 (iv) 25

r) In the given figure, it is given that $l \parallel m$, $\angle XAP = 35^\circ$ and $\angle YBP = 75^\circ$. Find the measure of $\angle APB$.



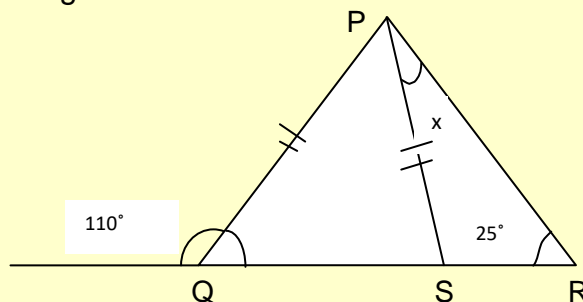
- (i) 105° (ii) 135° (iii) 100° (iv) none of these

s) If $a \parallel b$ and $p \parallel q$. Find x , y , z and w .



- (i) $x=60^\circ, y=120^\circ, z=60^\circ, w=120^\circ$ (ii) $x=120^\circ, y=60^\circ, z=60^\circ, w=120^\circ$
 (iii) $x=120^\circ, y=120^\circ, z=60^\circ, w=120^\circ$ (iv) none of these

t) In the given figure $PQ = PS$. Find the value of x



- (i) 45° (ii) 50° (iii) 110° (iv) none of these



Venkateshwar International School

Dwarka Sector 18, New Delhi-78

HOMEWORK WORKSHEET (2019-20)

Social Science – VII

History

Chapter 1 - Medieval Period Worksheet

Name: _____

Sec. _____

I. Unscramble the letters in the box and fill in the blanks:

pirtviarjosarh	unmismtaics	efudailsm
Aarbc and		
Presina		

1. With the arrival of Muslim rulers new languages _____ and _____ developed in India.
2. The study of coins is called _____.
3. Chandbardai was the author of _____.
4. The Middle ages in Europe was marked by _____.

II. Give one word answer for the following:

1. The religious movements that spread the message of devotion to god and kindness towards all human beings.
2. Any two powerful ruling dynasties of the early medieval period.
3. The two earliest names by which India was known.
4. The founder of the Mughal Empire.
5. The religion that spread in India during the medieval period.
6. A book on coins written during the reign of Ala-ud-din Khalji.
7. A book by Zia-ud-din Barani that describes the history of Delhi Sultan.
8. One archaeology source that tell us about the customs, food habits, dress and jewellery of the medieval period.

III. Correct the following statements:

1. Inscription from north India record proclamations by kings and gifts to temple.
2. Akbarnama by Kalhana is a history of the king of Kashmir.
3. There is a scarcity of sources for the study of medieval period.
4. The Medieval Period spans from 5th to 20th Century AD.
5. The skill of cartography, or map-making was known in ancient India.

IV. Fill in the blanks:

1. The book 'Rihala' was written by _____.
2. A biography written by Gulbadan Begum is _____.
3. Most writings of the medieval period is available to us on _____.
4. The medieval period was characterized by the growth of a/an _____ culture.
5. The history of the early medieval period is centred on power struggles among _____ kingdom of South and North.
6. Medieval maps and the writings of Medieval authors provide valuable _____ about the _____ features.



Venkateshwar International School

Dwarka Sector 18, New Delhi-78

HOMEWORK WORKSHEET (2019-20)

Social Science – VII

Civics

Chapter - 1 Democracy

Name: _____

Sec. _____

- I. Point out three characteristics of different types of government as given below:

Types of Government		
Democracy	Monarchy	Dictatorship

- II. Name the following:

1. The rule by an unelected, all powerful dictator
2. The law making body of India
3. The type of democracy prevalent in India.
4. The country, which in ancient times did not grant voting rights to women
5. Democratic institutions at the local level
6. Law that means all are equal before the law.
7. Two principles on which democracy is based
8. Democracy that means all should get equal opportunities of job and absence of exploitation.

- III. Fill in the blanks:

1. In a democracy the supreme power lies with the _____.
2. The first nation to grant equal voting rights to all its citizens in 1893 was _____.
3. The _____ makes the laws for the state.
4. In the words of _____, democracy is the government of the people, for the people and by the people.
5. If the government is elected and run directly by the people, it is called _____.
6. In a democracy, an important means for people to exercise their political power are _____.
7. A democratic society should be able to remove all _____ differences.
8. Democracy is the form of Government in which people _____ themselves.
9. The form of Government in our country is _____ democracy, in which the people govern themselves through _____.