

FINAL TERM EXAMINATION
2019-2020
SUBJECT – COMPUTER
CLASS – FIVE

Name: _____ Section: _____ Grade

Q 1. Answer the following questions.

a) What is the use of Delay option?

Ans. _____

b) When is 'With Previous' option selected?

Ans. _____

c) Why should you avoid typing an email in all caps?

Ans. _____

d) What is a browser?

Ans. _____

e) Explain change case feature of MS – Word.

Ans. _____

Q 2. Fill in the blanks:

- a) _____ option aligns the text to the left and right margin.
- b) Internet is a network of connected _____.
- c) You can move from one website to another by clicking on a _____.
- d) The Department of Defence of _____ had set up the ARPANET.
- e) _____ is a harmful computer program.

Q 3. Write the full forms of the following.

- a) INTERNET _____
- b) ARPANET _____
- c) WWW _____
- d) URL _____
- e) VIRUS _____

Q 4. Identify the following Icons using given clues.

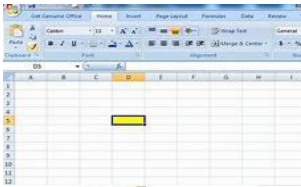
Shapes, WordArt, Excel, Presentation, Underline

- a)  _____

- b)  _____

- c)  _____

d)



e)



Q 5. State True or False

- a) A worksheet has 16,384 columns. _____
- b) A file in MS- Excel is called a Workbook. _____
- c) Indentation increases space between the margin and the starting point of a paragraph. _____
- d) The Shape option allows you to add only line. _____
- e) We use WordArt feature to make the text appear attractive and eye-catching. _____

Q 6. Match the following.

Features	Description
1. Emphasis	a. Practice presenting
2. Motion Path	b. Animation starts with previously sequenced object
3. With Previous	c. Effect for appearance of object after entrance
4. Action Button	d. Move in a specific pattern
5. Rehearse Timings	e. Play a sound

Q 7. Give one word.

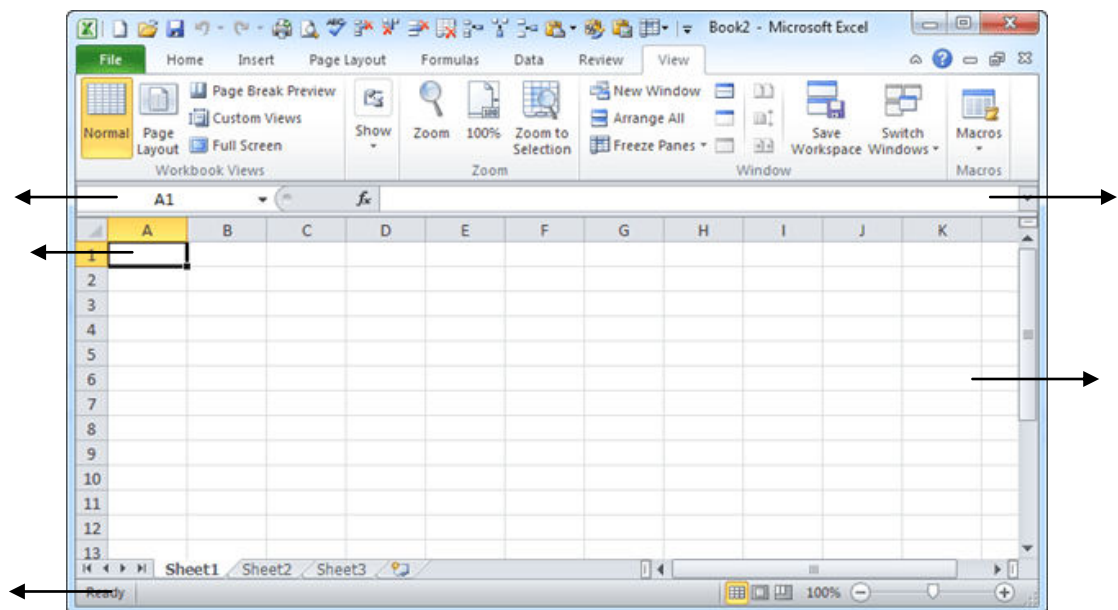
- a) An area below the title bar. _____
- b) The intersection of row and column. _____

- c) Tab to add special effects. _____
- d) Symbol of subtraction in MS – Excel. _____
- e) Displays the name of the spreadsheet _____

Q 8. Multiple Choice Questions. Tick the correct option.

- a) The keyboard shortcut _____ is used to save a document.
 - 1. Ctrl+A
 - 2. Ctrl+S
 - 3. Alt+F4
- b) The intersection of a row and column is called a _____.
 - 1. Cell
 - 2. File
 - 3. Line
- c) _____ effects is for hoe the text or object leaves the slideshow.
 - 1. Favorite button
 - 2. Refresh button
 - 3. Exit
- d) The option will change all the letters in the selected text to small _____.
 - 1. Upper case
 - 2. Lower case
 - 3. Sentence case
- e) _____ option aligns the text to the left and right margin.
 - 1. View
 - 2. Notes page
 - 3. Justify

Q 9. Name the components of MS – Excel Window



FINAL TERM EXAMINATION
2019-2020
CLASS -FIVE
ENGLISH (LANGUAGE)

NAME _____ SECTION _____ GRADE _____

SECTION - A (READING)

1. Read the following passage carefully and answer the questions that follow:

To improve your stamina and to stay physically fit, you require regular physical exercise in addition to sufficient rest, recreation and a balanced diet. To stay fit, you need not be an athlete or a sportsperson-all that you have to do is to ensure your heart and lungs remain strong with the aerobic exercises. Walking is the easiest of these exercises whose primary goal is to improve cardio-vascular and respiratory functions.

But mere walking is not enough. Your pace has got to be brisk. Because brisk walking, though a mild exercise is a good aerobics workout. It accelerates your pulse rate. Other simple but effective aerobic are cycling, swimming, skipping and climbing stairs. An obvious advantage of exercise is that it helps to control and lose body weight which it achieves by burning excess calories. Exercise is both a preventive and a curative medicine. Go ahead for it.

(i) The four basic things to stay physically fit are

- a. diet, sleep, exercise and tonics
- b. balanced diet, physical exercise, rest and recreation.
- c. sleep, music, exercise and running.

(ii) The aerobic exercises keep our

- a. mind and body fit
- b. blood pressure exact
- c. heart in control

(iii) How does exercise help our body lose weight?

(iv) What is the obvious advantage of exercise?

(v) Write synonym of word 'increases'.

SECTION B – WRITING

Q2. You watched a dance reality show. Some of the participants showed a mastery of art. Write a Diary Entry on it.

OR

Your elder brother is selected for the Cricket match. Your family is quite excited to hear this news. Write a Diary entry expressing your feelings.

Q3. These days children have lost the value of discipline. Write an article on the value of Discipline.

OR

The Principal of your school has asked you to write an article for the school magazine on the importance of Historical Buildings. You can take the help of the clue points given below:

- Historical buildings are our rich treasure
- They increase our knowledge
- Some people are careless
- Some people damage these historical buildings.
- Suggestions to save them

SECTION C- GRAMMAR

Q4 Underline the adverbs and write their type

(i) He rang me yesterday .- _____

(ii) Children were listening to his story eagerly.- _____

(iii) There is little coffee in the cup. - _____

(iv) He is a very good listener. - _____

(v) The boy is sitting downstairs. - _____

Q5 Use suitable degree of comparison in the following sentences

(i) Vineet is the _____ (clever) among these students.

(ii) This flat is _____ (big) than that building.

(iii) Vijay is a _____ (tall) boy.

(iv) Mumbai is the _____ (big) city in India.

(v) Tamil is a _____ (difficult) subject.

Q6 Use suitable conjunction to join the following sentences

(i) The man is poor. He is honest.

(ii) I couldn't see the tree. My spectacles were missing.

(iii) Vijay went to Patna. Vineet went to Ranchi.

(iv) Ashok is thrilled. He has passed the test.

(v) You must tell the truth. You will be punished.

Q7 Use suitable preposition in the following sentences.

(i) He stood _____ me and my brother.

(ii) This book was kept _____ the chair.

(iii) She went _____ the inner chamber.

(iv) Ravindra kept the bag _____ the table.

(v) A naughty boy entered an orchard _____ jumping.

Q8 Use suitable modals in the following sentences

(i) Henry _____ not be allowed to get his own way. (will/should)

(ii) _____ they always be happy. (May/might)

(iii) He _____ not have disobeyed his parents. (shall/should)

(iv) Neha _____ sing and dance effortlessly. (can/could)

(v) My Mother _____ dance when she was young (would/used to)

Q9 Write the type of the underlined pronoun

(i) These children are well-behaved. _____

(ii) What book are you reading. _____

(iii) These are ours, and those are theirs. _____

(iv) Can you pour yourself a glass of juice. _____

Q10 Write the contraction of the underlined words in each sentence

(i) It is time to go to school. - _____

(ii) There is no sugar in the tea. - _____

(iii) She will go to school tomorrow. - _____

(iv) They do not want the balloons. - _____

Q11 Rewrite the following sentences using correct punctuation

(i) The baby is awake, isn't it

(ii) What a beautiful sunset

FINAL TERM EXAMINATION
2019-2020
CLASS -FIVE
ENGLISH (LITERATURE)

NAME _____ SECTION _____ GRADE _____

SECTION -D LITERATURE

Q1) Read the following extract and answer the questions

Come on and start recycling. Start today.

By saving old newspapers,not throwing them away.

Don't just take them and dump them on the tip,

Tie them in a bundle and put them in the skip.

- a. Write the name of poem and the poet.
- b. What all things should be recycled?
- c. Write a pair of rhyming words.
- d. Which word stands for "a large container for putting rubbish in"?

or

But the train is packed . I've looked in all the other coaches. There's no place anywhere . Just let me sit in a corner. I won't disturb you.

- a. Name the speaker of the above lines.
- b. Where did he want to sit?
- c. To whom is he requesting for a place to sit?
- d. Write one word for 'Full of people' from the above lines.

Q2. Complete the following sentences

- (i) Sudha was doing postgraduation in _____
- (ii) The life-changing event in the writer's life was when _____
- (iii) Ani's didn't want to go to school because _____
- (iv) Sarah's full name was _____
- (v) J.R.D Tata was the topper of _____

Q3. Answer the following questions in short(any 3)

- (i) List the words used to describe J.R.D Tata. What does this reveal about the writer's feeling?
- (ii) What was special about the animal in the sack? Name at least two features.
- (iii) What were the two major changes that took place when the boy began to read? (From the Box to Books)
- (iv) What are the things mentioned in the poem that can be recycled?
- (v) Who were the real rats?
- (vi) Which other creatures, according to the poet, are also facing extinction?

Q4. Answer the following in detail (any 5)

- (i) What made the boys want the old man to be their teacher?
- (ii) Our mother was much brighter and smarter than anyone we knew at the time` Which action of hers tells us that she was really so?
- (iii) How did the writer get Sarah to stay in the cage?
- (iv) Is the speaker afraid of what the father might do? Why?(Turn off the T.V)
- (v) Where should these things be taken?
 - a. old newspapers _____
 - b. old glass bottles _____
- (vi) Who is the real hero of the story? Give reason for your answer.(From the Box to Books)
- (vii) What made the boys want the old man to be their teacher? What did they Promise him?

Q5. Write one word for the following :

- (i) pastime things done when people are not working- _____
- (ii) something which is not allowed anymore- _____
- (iii) way of thinking- _____
- (iv) shock and fear- _____

Q6. Make sentences from the following words:

(i) rap-

(ii) treat-

(iii) horror-

(iv) buddy-

Q7. Complete the following lines of poem

My father gets quite mad at me;

a) _____

When they catch me watching

b) _____

,

9

(iv) How do the parents feel about this kind of behavior? (turn off the TV)

(iii) Why are Sumatran tigers facing extinction?

(iv)

Q9 Write the type of the underlined pronoun

- (i) These children are well-behaved .
- (ii) What book are you reading.
- (iii) These are ours, and those are theirs.
- (iv) Can you pour yourself a glass of juice. **B**

FINAL TERM EXAMINATION

2019-2020

SUBJECT: GERMAN

CLASS: V

NAME: _____ **SECTION:** _____ **GRADE** _____

TIME: 1Hr

Max Punkte: 40

Q.1 Schreib die Farben auf Englisch. (write the colours names in English).

(4 Marks)

- 1.rot =
- 2.orange =
3. grün =
- 4.blau =
- 5.gelb =
- 6.schwarz =
- 7.braun =
- 8.weiss =

Q.2 Wortschatz (vocabulary) write the following words in English.

(3 Marks)

- | | |
|---------------|------------|
| 1.Schwester - | 4.Onkel - |
| 2.Bruder - | 5.Mutter - |
| 3.Tante - | 6.Vater - |

Q.3 Schreib die Number auf Deutsch. (Write the numbers in words)

(6Marks)

- | | |
|------------|------------|
| 11 = _____ | 7 = _____ |
| 0 = _____ | 2 = _____ |
| 20 = _____ | 10 = _____ |

Q.4 Was fehlt? Ergänze: richtig wort.

(5 Marks)

- | | |
|--------------------------|--------------------|
| 1. _____ heisst du? | (Wie / Was) |
| 2. _____ alt bist du? | (Was / Wie) |
| 3. _____ du Geschwister? | (hast / haben) |
| 4. _____ du Einzelkind? | (haben / hast) |
| 5. _____ du Thomas? | (heissen / heisst) |

Q.5 Ergänze: mir, dir, Ihnen?

(4 Marks)

- 1.Hans, wie geht's _____?
 - _____ geht's gut.
- 2.Herr Hoffmann, wie geht's _____?
 - _____ geht's schlecht.

Q.6 Schreib diese Wörter auf Englisch. (Write the following words in English).

(6 Marks)

- I. gut -
- II. schlecht -
- III. toll -
- IV. prima -
- V. sehr gut -
- VI. nicht so gut -

Q.7 Was passt zusammen?

(3 Marks)

- 1. Grüß
- 2. Auf
- 3. Guten

- a. wiedersehen!
- b. Tag!
- c. dich!

Q.8 Zahlen: Ergänze EI oder IE . (Fill in the blanks)

(5 Marks)

1. __ _ NS

4. V __ _ R

2. DR _

5. S __ _ BEN

3. Zw __ _

Q.9 Schreib die Nummer. (Tick (✓) the correct option)

(4 Marks)

1. 22

a. zweiundzwanzig

b. einundzwanzig

c. zweiundsiebzog

d. neunundzwanzig

2. 08

a. sieben

b. neun

c. acht

d. zehn

3. 20

a. zwanzig

b. dreißig

c. vierzig

d. siebzog

4. 33

a. dreiunddreißig

b. zweiunddreißig

c. siebenundvierzig

d. achtundsiebzog

ALLES GUTE!!!😊

FINAL TERM EXAMINATION

2019-2020

MATHEMATICS

CLASS – FIVE

Name- _____ Roll No: _____ Section: _____

SECTION – A

Q.1 Answer the following:

- a) Write the number name of 2, 27, 13, 428 in the International system of numeration.
- b) The largest 7- digit number that can be formed using the digits 9, 6, 0, 1, 2, 5, 7, 8 .
- c) Write 56.098 in the expanded form.
- d) Consider $300+80+3+\frac{4}{10} + \frac{5}{100} + \frac{7}{1000}$ write its short form.

Q.2 Find the perimeter of rectangle/square

- a) Length=3cm, breadth=5cm
- b) side=8cm
- c) Side= 5.5
- d) length=3.1 cm, breadth= 2.8

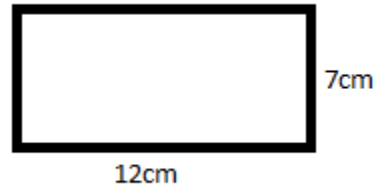
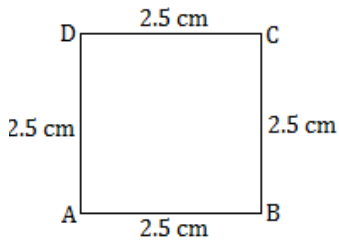
Q.3 Find Profit/loss for the following:-

- a) CP= Rs.124, SP= Rs.153
- b) CP= Rs.2456, SP= Rs.1675

Q.4 Solve the following:-

- a) $5.45 + 3.02 + 8.009$
- b) $\frac{14}{32} + \frac{1}{32} + \frac{9}{32}$
- c) 2, 54, 27, 192+ 32, 51, 678+58,41,902
- d) 78, 15, 929 + 25, 28, 591 - 59, 72 , 891
- e) 52, 14,120-23, 19, 857
- f) from the sum of 127.78 and 38.57, subtract 57.932
- g) $99.99-77.777$
- h) $\frac{9}{11} - \frac{7}{11}$
- i) Find the product of 18.7 and 5.3
- j) Divide and verify your answer- $10427 \div 28$

Q.5 Find the area of the given figure



Q.6 Identify and make the given angles with protractor.

a) 90°

b) 60°

Q.7 observes the given figure and answers the following:-

- a) Name the lines which pass through the point B
- b) Name any three acute angles.
- c) Name any two obtuse angles in the figure.
- d) Name any two pairs of parallel and perpendicular lines.

SECTION – B

Q 8. The cost of Rashmi's birthday dress is Rs. 1000.75. If the shopkeeper gave her a discount of Rs. 157.95, how much money did Rashmi have to pay for the dress?

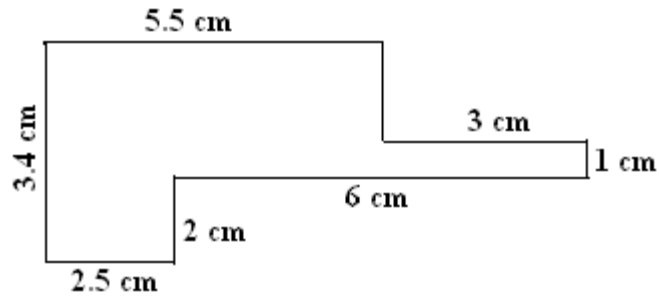
Q 9. The cost of 15 eggs is Rs. 5640. What is the cost of 12 eggs?

Q10. Find the profit if selling price of Smart TV is Rs. 67540 and cost price is Rs.55000.

Q 11. Rahul has bought 6 L 475 mL of orange juice and 17 L 750 mL of mango juice for the party. Find the total quantity of juice that he bought.

Q 12. Find the area of the square with side 120.4 cm.

Q 13. Find the perimeter of the given figure:









Q 14. A box has equal length, breadth and height of 25 cm each. Find the volume of the box.

Q 15. A toy company manufactured 15, 67, 543 toy cars in April and 6, 78, 986 in May. Find the total number of cars produces in both the months.

Q 16. Find the cost of 18 pens, if cost of 50 pens is Rs.800.

Q17. Following pictograph shows the number of girls in five classes. Answer the below questions.

Class	Number of Girls in classes  = 5 girls
5 th	
6 th	
7 th	
8 th	
9 th	

- Which class has the minimum number of girls?
- Which class has the maximum number of girls?
- How many girls are there in Class 6?

Mental Ability Skill

- a. Reciprocal of $\frac{7}{5}$ is _____
- b. How many hours are there in 7 days? _____
- c. Arrange in descending order 15.3,16.5,15.8,16.7 _____
- d. Find the product of 121.237×1000 _____
- e. Rahul cycles 8.28km in 4.5 hrs. What is his speed per hr? = _____
- f. Half of one thousand is _____
- g. write 2.08 as a fraction _____
- h. Reduce $\frac{25}{125}$ into lowest form.
- i. $2\frac{1}{2} \times 3\frac{1}{3} =$ _____
- j. LX + CL = _____

FINAL TERM EXAMINATION

2019-2020

SUBJECT: GENERAL SCIENCE

CLASS: FIVE

TIME: 2:30 Hours

NAME _____ **SECTION** _____ **GRADE:**

Q1. Choose the correct option.

i. A disease caused due to water pollution:

- a. Deafness b. Mental ill health c. Cholera d. Asthma

ii. A pipe like outlet through which magma flows out:

- a. Lava b. Crater c. Vent d. Magma chamber

iii. The topmost layer of the Earth:

- a. Core b. Corona c. Mantle d. Crust

iv. Machines that have moving parts can wear out due to:

- a. Electrostatic force b. Lubrication c. Friction d. Gravity

v. Changing of ice back to water on heating is a:

- a. Physical change b. Chemical change c. Condensation d. Evaporation

vi. The opening at the centre of the iris:

- a. Cornea b. Pupil c. Tilling d. Retina

Q2. Fill in the blanks:

- i. _____ volcanoes are those that may erupt any time or are already erupting .
- ii. The inner core is _____.
- iii. Burning of garbage and wood _____ air pollution.

- iv. _____ helps to reduce friction.
- v. _____ is the form of energy that helps to see objects.
- vi. Water that is _____ for drinking is called potable water.

Q3. Describe the following statements in one word:

- i. The harmful substances that get added to the environment _____.
- ii. An instrument that measures earthquakes _____.
- iii. The layer of the sun where hydrogen gets converted into helium _____.
- iv. The stored energy that an object has due to its position _____.

Q4. Define: (Do any 2)

- i. Physical change

- ii. Waxing crescent

- iii. Electrostatic force

Q5. Match the column :

- | | |
|-----------------------|--|
| i. Noise pollution | a. Causes a decrease in size |
| ii. Epicentre | b. Removed by boiling |
| iii. Full moon | c. Two poles |
| iv. Magnets | d. The entire moon is visible |
| v. Soluble impurities | e. The point on the surface of the Earth above the focus |
| vi. Contraction | f. Deafness |

Q6. Give reasons: (Do any 2)

- i. A ripe apple always falls down from the tree.

- ii. Sun appears bigger than the other stars.

- iii. Alum is added to water .

Q7. Correct the false statements by changing the underlined words:

- i. Bursting loud firecrackers should be encouraged.

- ii. The Richter scale is an instrument that measures earthquakes.

- iii. The first shadow, which is very dark ,is called the penumbra .

- iv. The object that has to be moved around or lifted is called the fulcrum.
-

Q8. Answer the following questions in brief (Do any 4)

- i. Write two causes of water pollution.
- ii. What are the effects of volcanic eruptions?
- iii. Distinguish between First class lever and Second class lever.
- iv. What is the core of the Earth made up of ?
- v. How does air pressure help us?
- vi. Define chemical change with an example.




Q9. Answer the following questions in detail (Do any 4)

- i. What are the different ways of preventing air pollution.
- ii. What are the safety measures to be taken during an earthquake?
- iii. Describe the different layers of the Earth.
- iv. Explain the different parts of the lever.
- v. How are particles arranged in gases?
- vi. Write about the different layers of the atmosphere.

Q 10. Think and answer the questions below:

- i. Why do you think scientists look for possibility of life in Mars more than the possibility of life in Neptune?
- ii. If the force of friction vanished suddenly, how would your life get affected?

Q 11. Look at the pictures given below and name them.



Q12. Draw and label the “Structure of a volcano “or “Layers of the Earth” .

FINAL TERM EXAMINATION
2019-2020
SUBJECT: SOCIAL STUDIES
CLASS: V

NAME: _____ ROLL NO.: _____ SECTION: _____ GRADE:

TIME: 3 hours

1. Tick () the correct option.

- a. The union government is also known as the
 - a. Loksabha ()
 - b. Central government ()
 - c. State government ()
 - d. Rajyasabha ()
- b. Which of these is an important pilgrim centre for Muslims ?
 - a. Riyadh ()
 - b. Jeddah ()
 - c. Mecca ()
 - d. All of these ()
- c. In which part of the prairies are most of the ranches present ?
 - a. North ()
 - b. South ()
 - c. East ()
 - d. West ()
- d. Who said these words 'Freedom is my birthright and I shall have it' ?
 - a. LalaLajpatRai ()
 - b. BalGangadharTilak ()
 - c. Gopal Krishna Gokhle ()
 - d. Bipin Chandra Pal ()

2. Name the following

- a. Law making body of the country _____
- b. Capital of Saudi Arabia _____
- c. Wheat basket of the world _____
- d. Study of earthquakes _____
- e. Activity of buying or selling goods _____
- f. Head of our country _____

3. State True or False.

- a. Nights in Saudi Arabia are hot. ()
- b. Mahatma Gandhi came back to India from south America . ()
- c. The Quit India Movement was launched in 1942 . ()
- d. The Revolt of 1857 was the second war of independence fought by the Indians . ()
- e. Saudi Arabia has a very modern society . ()
- f. Deforestation increases rainfall and reduces the incidence of drought. ()

4. Match the following.

- | | |
|----------------------|--------------------|
| a. Pampas | Dayanand Saraswati |
| b. pilgrim | Kayaks |
| c. Social reformers | Bahadur Shah Zafar |
| d. Natural Disasters | South America |
| e. Mughal emperor | Medina |
| f. Boats | Cyclones |

5. Fill in the blanks

- a. The official religion of Saudi Arabia is _____ .
- b. The main crop grown in the prairies is _____.
- c. Social _____ fought against the evils in Indian society .
- d. The Indian National Army was formed by _____ .
- e. Members of the Loksabha ,Rajyasabha , State Legislative Assemblies elect the _____ .
- f. The intensity of an earthquake is measured on the _____ scale.

6. Define the following.(Any 5)

a. Oasis

b. Reformer

c. Election

d. Committee

e. Prairies

f. Bedouins

7. Give reason.

a. Saudi Arabia is such a rich country because

b. British able to crush the revolt of 1857 because

8. Answer the short questions .

a. How did Bedouins traditionally earn their living ?

b. Name the three levels of government in India.

c. Describe the climate of prairies.

d. What did Gandhiji do as soon as he came back to India ?

e. What was the Swadeshi Movement ?

f. What is the importance of oasis for the people living in the desert regions of Saudi Arabia ?

9. Answer the following questions.

a. Why is Saudi Arabia important for the Muslims of the world ?

b. What was the Civil Disobedience Movement ? How did it start ?

c. Why are the prairies so attractive for farming ?

d. Why did the British impose more taxes on the people after World War I ?

e. List two responsibilities each of (a) the Central Government (b) the State Governments .

f. Why did Gandhiji call off the Non-Cooperation Movement ?

वार्षिक परीक्षा (2019-2019)

कक्षा – पांच (व्याकरण)

निर्धारित समय :2घंटे

ग्रेड -

नाम _____ अनुक्रमांक- _____

वर्ग - _____

सामान्य निर्देश :-

- इस प्रश्न पत्र में चार खंड हैं -क,ख,ओर ग ।
- सभी प्रश्न अनिवार्य हैं ।

खंड - क (पठन)

प्रश्न.1 दिए गए गद्यांश को ध्यानपूर्वक पढ़कर पूछे गए प्रश्नों के उत्तर लिखो –

मनुष्य और प्रकृति का बड़ा गहरा संबंध है। मानव ने प्रकृति की गोद में जन्म लिया। प्रकृति ने मानव की सदा रक्षा की। प्रकृति का बहुत ही महत्वपूर्ण अंग है- 'वृक्ष'। हमारे जीवन में वृक्षों की मुख्य भूमिका है। जैसे-जैसे सभ्यता का विकास होता गया, वृक्षों की उपयोगिता बढ़ती गई। धीरे-धीरे मकान, झोंपड़ियों तथा कारखानों में लकड़ी का प्रयोग होने लगा। ईंधन के रूप में भी इसका प्रयोग किया गया। लकड़ी का उपयोग फर्नीचर बनाने में भी किया जाने लगा। वृक्ष हमारे स्वास्थ्य के रक्षक हैं। ये वातावरण को साफ़ रखते हैं। वृक्षों की हरीयाली हमारे मन को खुश करती है। कई वृक्षों की छाल और जड़े अनेक प्रकार की दवाइयां बनाने के काम आती हैं। आज वृक्षों के बिना मानव जीवन की कल्पना भी नहीं की जा सकती। जब वृक्ष हमें असंख्य लाभ देते हैं तो हमें भी वृक्षों की सेवा करनी चाहिए। प्रतिवर्ष वृक्ष लगाने चाहिए और उनकी देखभाल कर धरती को फिर हरा-भरा बनाने में सहयोग देना चाहिए।

क) मानव का जन्म किसकी गोद में हुआ है?

ख) वृक्षों की लकड़ी का प्रयोग कहाँ-कहाँ होता है?

ग) वृक्षों की छाल और जड़े हमारे किस काम आती हैं?

घ) वृक्ष हमारे स्वास्थ्य की रक्षा कैसे करते हैं?

ड) हमें ऐसा क्या करना चाहिए जिससे हम वृक्षों का पूरा लाभ उठा सकें ?

खंड - ख (व्याकरण)

प्रश्न 2. निर्देशानुसार कीजिए

क) नीचे गए वाक्यों में गलत विराम-चिह्न लग गए हैं। उचित विराम चिह्न लगाकर वाक्यों को दोबारा लिखिए-

क) गोपी-शिवानी-शेलेश और सुनीता घर चले गए?

ख) दहेज; एक सामाजिक बुराई हैं।

ग) डॉ०!ए,पी,जे अब्दुल कलाम भारत के पूर्व प्रधानमंत्री थे।

घ) अब मैं घर जाना चाहता हूँ-

ख) निम्नलिखित शब्दों से विशेषण बनाइए।

1. लालच :- _____ 2. भारत :- _____

3. खेल :- _____ 4. मांस :- _____

ग) दिए गए वाक्यों में से क्रिया (अकर्मक/सकर्मक) छांटकर लिखो:-

क) घोड़ा घास खा रहा है। _____

ख) नल में पानी बह रहा है। _____

ग) जोकर हँस रहा है। _____

घ) घोबी कपड़ा धो रहा है। _____

घ) कोष्ठक में से सही क्रिया विशेषण चुनकर वाक्य पूरा करो-

प्रतिदिन , कभी-कभी, निरंतर , रोज , बहुत अधिक

क) यह कवि _____ सुंदर कविता लिखता है।

ख) अब आप _____ आएंगे।

ग) सूर्य _____ उदित होता है।

घ) सब नदियाँ _____ बहती हैं।

ड) मेरी नानी मेरे घर _____ आती है।

ड) दिए गए मुहावरों का अर्थ लिखकर वाक्यों में प्रयोग कीजिए :-

क) अक्ल का दुश्मन:- _____

ख) अपना उल्लू सीधा करना:-

ग) जले पर नमक छिड़कना:-

घ) फुला न समाना :-

च) निम्नलिखित वाक्यों में सही विस्मयादिबोधक शब्द भरिए –

क) _____ तुम प्रथम आए। (हाँ-हाँ!, छि!, शाबाश!)

ख) _____ बेचारा बीमार है। (वाह!, अहा!, हाय!)

ग) _____ कितनी गंदगी है? (अहा!, छि:!, अरे!)

घ) _____ कितना सुंदर चित्र बनाया। (ओह!, वाह!, हाय!)

छ) दिए गए वाक्यों में उचित समुच्चयबोधक शब्द द्वारा रिक्त स्थान भरिए-

क) नेहा शिमला _____ मनाली किसी एक जगह ही जाएगी। (या, और, मगर)

ख) शीतल _____ भरत दोनों घर लौट आए। (अथवा, परंतु, और)

ग) हमें प्रतिदिन खेलना _____ व्यायाम करना चाहिए। (इसलिए, और, क्योंकि)

घ) मनोज विद्यालय नहीं गया _____ वह बीमार था। (क्योंकि, मगर, और)

ज) निम्नलिखित में से किसी एक विषय पर संवाद लिखिए।

गृहकार्य पूरा न करने पर दो छात्रों के बीच संवाद।

अथवा

अपने जन्मदिन पर आमंत्रित करने के लिए दो बच्चों के बीच संवाद।

झ) नीचे दिए गए चित्र का वर्णन अपने शब्दों में कीजिए।



© Can Stock Photo - csp9634511

वार्षिक परीक्षा (2019-2019)

कक्षा – पांच (साहित्य)

निर्धारित समय :2घंटे

ग्रेड -

नाम _____ अनुक्रमांक- _____ वर्ग - _____

सामान्य निर्देश :-

- इस प्रश्न पत्र में साहित्य भाग हैं।
- सभी प्रश्न अनिवार्य हैं।

खंड - क (साहित्य)

प्रश्न 3.दिए गए गद्यांश को ध्यानपूर्वक पढ़कर पूछे गए प्रश्नों के सही उत्तर लिखो:-

तभी मेरी श्रीमती जी ने कहा 'दिखलाओ जी,भला कुछ तो मन बहले|उस दिन कार्निवाल के सब खिलौने उसके खेल में उसका अभिनय करने लगे| भालू मनाने लगा| बिल्ली रूठने लगी| चिड़िया का ब्याह हुआ | ताश के पत्ते लाल हुए,फिर सब काले हो गए |लट्टू अपने आप नाच रहे थे|श्रीमती जी ने धीरे से उसे एक रुपया दे दिया |वह उछल पड़ा|

क) श्रीमती जी ने क्या दिखलाने को कहा?

उत्तर:-

ख) श्रीमती जी खेल क्यों देखना चाहती थीं?

उत्तर:-

ग) खेल में किनका अभिनय दिखाया गया ?

उत्तर:-

घ) एक रुपया मिलने पर छोटे जादूगर ने क्या किया ?

उत्तर :-

ड) जादूगर की दो विशेषता लिखो ।

उत्तर:-

प्रश्न 4. निम्नलिखित दोहों का आशय स्पष्ट कीजिए:-

बुरा जो देखन मैं चला, बुरा न मिलिया कोय।

जो घर सोधा अपना, मुझसे बुरा न कोय॥

अथवा

बड़ा हुआ तो क्या हुआ, जैसे पेड़ खजूर ।

पंथी को छाया नहीं, फल लागौ अति दूर॥

प्रश्न 5. दिए गए शब्दों का वाक्य में प्रयोग कीजिए :-

क) जीविका -

ख) स्तुति :-

ग) प्राथमिकता :-

प्रश्न 6. सही उत्तर चुनकर () लगाओ:-

क) प्लाज्मा किसे कहते हैं?

i. रक्त के सफ़ेद कणों को

ii. के तरल भाग को

iii. रक्त के लाल कणों को

प्रौहत्वों को

ख) इलाहाबाद में कौन-कौन सी नदियों का संगम होता है?

i. गंगा-गोदावरी

ii. ी-यमुना

iii. गंगा –यमुना-सरस्वती

i कृष्णा-कावेरी –यमुना

ग) खून की कमी से कौन-सा रोग होता है ?

i. मलेरिया

ii. अनीमिया

iii. पी ी

iv. टाइफ़ाइड

प्रश्न 7. निम्नलिखित प्रश्नों के उत्तर लिखो -

क) 'हम सब' कवि ने किसके लिए कहा है?

ख) अनीमिया किसे कहते हैं?

ग) छोटे जादूगर के परिवार में उसके अतिरिक्त और कौन-कौन सदस्य थे?

घ) पेड़ ने वृद्ध से क्षमा क्यों माँगी?

ड) कर्ण ने सूर्य देव से क्या प्रार्थना किन और क्यों?

वार्षिक परीक्षा
2019- 2020
संस्कृत
कक्षा – पाँच

नाम _____ अनुक्रमांक- _____ वर्ग - _____
समय : 1 घं □ □ ग्रेड - _____

प्र. 1) शब्दार्थः (शब्द – अर्थ)

- क) बालिका - _____
ख) फलानि - _____
ग) पठ - _____
घ) कृषकः - _____
ङ) भवनम् - _____
च) वाटिका - _____

प्र. 2) एकपदेन उत्तरत | (एक पद में उत्तर दो |)

- क) कृषकः किं कर्षति ? _____
ख) नारी का पचति ? _____
ग) तत्र कौ खगौ स्तः ? _____
घ) के कूर्दिर्न्ति ? _____

प्र.3) ' क ' खण्डस्य शब्दान ' ख ' खण्डस्य उचितेन अर्थेन सह योजयत | (' क ' खण्ड के शब्दों को ' ख ' खण्ड के उचित अर्थों के साथ जोड़ो |)

' क '

' ख '

क) शोभनम	जननी
ख) पिता	भगिनी
ग) माता	सुन्दरम्
घ) अनुजा	जनकः
ङ) अग्रजः	चटकाः
च) खगाः	अग्रे
छ) पुरतः	भ्राता

प्र.4) चित्रं दृष्ट्वा तस्य अधः उत्तरं लिखत | (चित्र देखकर नीचे उत्तर लिखो |) (क)



एते के ?



ख) एते के ?



ग) तत किम ?



घ) एषा का ?

प्र. 5) निम्नलिखितपदानां प्रयोगेण संस्कृतभाषाया लघुवाक्य रचयत | (निम्नलिखित पदों के लघु वाक्य बनाओ |)

क) पठामि- _____

ख) धावन्ति- _____

ग) लिखसि- _____

प्र. 6) कोष्ठके दत्तेभ्यः पदेभ्यः उचितक्रियापदेन रिक्तस्थानं पूरयत ।

(कोष्ठक में दिए गए पदों में से उचित क्रिया पदों से रिक्त स्थान भरो ।)

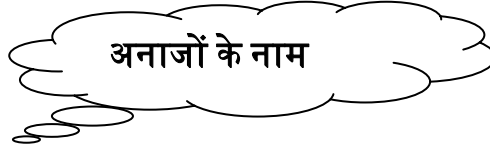
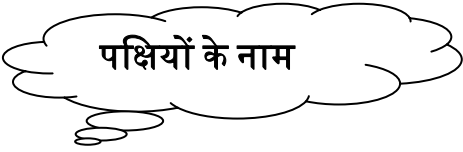
क) माता भोजन _____ | (पचति, पचन्ति, पचसि)

ख) ते कपोताः _____ | (स्तः, असि, सन्ति)

ग) छात्राः विद्यालय _____ | (गच्छतः, गच्छन्ति, गच्छति)

घ) तौ दुग्धम _____ | (पिबतः, पिबन्ति, पिबति)

प्र. 7) शब्द – कोशः



प्र. 8) धातु – रूप लिखो ।

‘पठ’ धातु लटलकारः

पुरुषः	एकवचनम	द्विवचनम	बहुवचनम
प्रथमपुरुषः	_____	_____	_____
मध्यमपुरुषः	_____	_____	_____
उत्तमपुरुषः	_____	_____	_____

प्र. 9) घर का चित्र बनाकर दो वाक्य लिखो ।