

**FINAL TERM EXAMINATION**  
**2019-2020**  
**SUBJECT – COMPUTER**  
**CLASS – FOUR**

Name: \_\_\_\_\_ Section: \_\_\_\_\_ Grade

**Q 1. Answer the following questions.**

a) Why do you use the PRINT command with arithmetic operators?

Ans. \_\_\_\_\_  
\_\_\_\_\_  
\_\_\_\_\_

b) List the different mathematical functions

Ans. \_\_\_\_\_  
\_\_\_\_\_  
\_\_\_\_\_

c) Explain the term procedure.

Ans. \_\_\_\_\_  
\_\_\_\_\_  
\_\_\_\_\_

d) What is a router?

Ans. \_\_\_\_\_  
\_\_\_\_\_  
\_\_\_\_\_

e) State any three uses of the Internet.

Ans. \_\_\_\_\_  
\_\_\_\_\_

**Q 2. Fill in the blanks:**

- a) To make changes in the procedures, the \_\_\_\_\_ command is used.
- b) The PRINT command displays the results in the \_\_\_\_\_.
- c) We enter commands in the \_\_\_\_\_ box.
- d) The Internet network created by a router is known as \_\_\_\_\_.
- e) A \_\_\_\_\_ is a program used to access websites.

**Q 3. Write the full forms of the following.**

- a) ISP \_\_\_\_\_
- b) RT \_\_\_\_\_
- c) PD \_\_\_\_\_
- d) INTERNET \_\_\_\_\_
- e) FD \_\_\_\_\_

**Q 4. Identify the following Icons**

a)  \_\_\_\_\_

b)  \_\_\_\_\_

c)



\_\_\_\_\_

d)



\_\_\_\_\_

e)



\_\_\_\_\_

**Q 5. State True or False**

- a) You cannot pay bills using Internet. \_\_\_\_\_
- b) The END command is necessary to end the procedure. \_\_\_\_\_
- c) Safari is the most popular search engine \_\_\_\_\_
- d) Opera is a website. \_\_\_\_\_
- e) The command PR SUM displays the addition of the numbers. \_\_\_\_\_

**Q 6. Match the following.**

Features	Description
1. Title bar	a. It displays different options under a tab.
2. Slide pane	b. It is used to type notes.
3. Slide	c. It displays the name of the presentation.
4. Notes pane	d. It displays all the slides in a presentation.
5. Ribbon	e. It displays information.

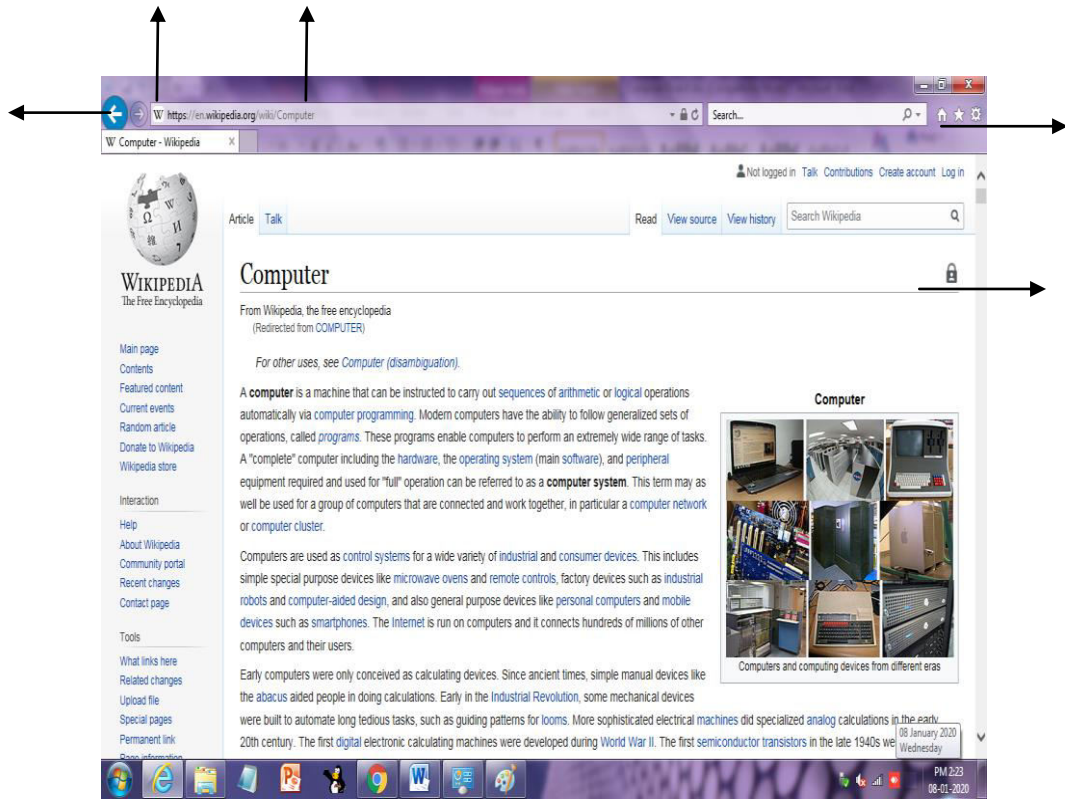
**Q 7. Give one word.**

- a) The command used to name a \_\_\_\_\_  
procedure.
- b) Devices that displays output or results. \_\_\_\_\_
- c) A drawing that has motion. \_\_\_\_\_
- d) The command used to execute a \_\_\_\_\_  
procedure.
- e) A hardware that connects all devices to \_\_\_\_\_  
a single Internet connection.

**Q 8. Multiple Choice Questions. Tick the correct option**

- a) It is used to insert videos or audio files.  
Media clip                      Clip art                      Smart art
- b) It contains a set of primitives to draw a figure.  
Title line                      Body                      End line
- c) The \_\_\_\_\_ can be used to search for any information.  
Display area                      Search bar                      Address bar
- d) This button is used to navigate to the previous page.  
Favorite button                      Refresh button                      Back button
- e) The view displays a slide in the full-screen mode.  
Slide sorter                      Notes page                      Reading view

**Q 9. Name the components of MS – Excel Window**



**FINAL EXAMINATION**  
**SUBJECT – COMPUTERS**  
**CLASS – FOUR**  
**BLUEPRINT**

Q No.	Description	Marks
Q 1	Each question carry 2 marks	$2 \times 5 = 10$
Q 2 to Q 4	Each question carry 5 marks	$5 \times 3 = 15$
Q 5 to Q 8	Each question carry $2 \frac{1}{2}$ marks	$2 \frac{1}{2} \times 4 = 10$
Q 9	Each question carry 5 marks	$5 \times 1 = 5$

**FINAL TERM EXAMINATION**  
**2019-2020**  
**CLASS -FOUR**  
**ENGLISH (LANGUAGE)**

NAME \_\_\_\_\_ SECTION \_\_\_\_\_ GRADE \_\_\_\_\_

**SECTION - A (READING)**

**Q1. Read the following passage and answer the questions:-**

Once upon a time there was a king named Midas. He had everything in his life. He had a strong army, a beautiful palace, a devoted wife and a charming daughter. He was facing no problem in administration.

But the king was suffering from a weakness-greed . He had an uncontrolled greed for gold. He prayed to God to give him more and more wealth, specially gold. One day an angel appeared before him and said, "God has given you everything then why aren't you happy?" The king replied, " I want that whatever I touch should turn into gold." The angel granted his wish.

The king was very happy that when he touched his throne, his bed and pillar, Everything turned into gold. But when he touched his food, it also turned into gold. So he could not eat anything . Neither could he quench his thirst. He was very hungry and thirsty. When his daughter came to him and he touched her, she also turned into gold. Now the king became more unhappy and miserable. Now he cursed himself and his greed but it was too late.

(i) King Midas had \_\_\_\_\_

- (a) strong army
- (b) a devoted wife
- (c) a beautiful palace

(ii) The King was suffering from a weakness- \_\_\_\_\_

- (a) greed
- (b) disease
- (c) loneliness

(iii) What wish of the king was granted by the angel?

---

(iv) What did the angel ask King Midas?

---

(v) Pick out two adjectives used for the king in the passage.

---

(vi) Find word from the passage that has same meaning as:-

(a) 'pretty'- \_\_\_\_\_

(b) 'quench' \_\_\_\_\_

### **SECTION -B (WRITING)**

**Q2. Complete the following story with the help of following outlines**

**Hints- three men-walking here and there---- found a bag--- filled with pleasant surprise – bag was full of money-dispute regarding the ownership- agreed to divide the money among themselves-felt hungry-one man went to bring food-became greedy-put poison in the food- in his absence-two men became greedy-they killed the first person-ate the food-they both also died.**

**OR**

**Woodcutter - ----- cutting wood ----- axe fell down -----became sad  
Water fairy came out---she helped him by----first gave him golden axe—  
woodcutter refused---she gave silver axe- woodcutter refused- the woodcutter  
Wanted his own— fairy was impressed by the honesty--- gave golden and silver  
axe as a reward**

**Q3 Look at the following picture and describe it in your own words.**





## SECTION C-GRAMMAR

### **Q4. Fill in the blanks with suitable conjunctions:-**

- (i) Manav has books \_\_\_\_\_ pens.(but/and)
- (ii) Subodh is tall \_\_\_\_\_ Sharan is short.(or/but)
- (iii) Take this medicine \_\_\_\_\_ take rest.(if/and)
- (iv) She did not sing \_\_\_\_\_ her throat was sour.(while/as)

### **Q5 Use suitable prepositions in the following sentences:-**

- (i) Ravindra kept the bag \_\_\_\_\_ the table.
- (ii) He stood \_\_\_\_\_ me and my brother.
- (iii) She went \_\_\_\_\_ the inner chamber.
- (iv) I met my school friend \_\_\_\_\_ 9 p.m.

### **Q6 Underline the adverbs and write their types:-**

- (i) Rahim finished the work quickly. \_\_\_\_\_
- (ii) There is a little sugar in the tea. \_\_\_\_\_
- (iii) She went inside the temple. \_\_\_\_\_
- (iv) Sarat called me last night. \_\_\_\_\_

### **Q7 Use suitable degree of comparison in the following sentences:-**

- (i) Rohan is \_\_\_\_\_ in studies than Shyam.(weak)
- (ii) Vineet is the \_\_\_\_\_ boy in the class.(active)
- (iii) Gold is \_\_\_\_\_ metal than silver.(costly)
- (iv) This sum is \_\_\_\_\_ than first sum.(simple)

### **Q8 Underline the adjective and write its type**

- (i) His work is excellent in the office. \_\_\_\_\_
- (ii) This pen is broken by mistake. \_\_\_\_\_
- (iii) There is much milk left in the bottle. \_\_\_\_\_
- (iv) We have three toffees with us. \_\_\_\_\_

### **Q9 Use suitable pronouns in the following sentences:-**

- (i) Asha is absent today. \_\_\_\_\_ is ill.
- (ii) The kitchen is dirty. The servant is cleaning \_\_\_\_\_.
- (iii) She made a salad \_\_\_\_\_
- (iv) This house is beautiful. This house is \_\_\_\_\_

**Q10. Add the prefix un- or in- to the following words to make new words:-**

(i) Fold- \_\_\_\_\_

(ii) Active- \_\_\_\_\_

(iii) Afraid- \_\_\_\_\_

(iv) Wrap- \_\_\_\_\_

**Q11 Rewrite the following sentences with correct punctuation:-**

(i) did sakshi reach on time

---

(ii) what a lovely dress

---

**FINAL TERM EXAMINATION**

**2019-2020**

**SUBJECT – MATHEMATICS**

**CLASS – FOUR**

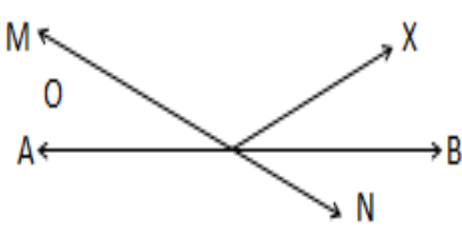
Name- \_\_\_\_\_ Section - \_\_\_\_\_ Grade

**SECTION – A**

Q1. Identify and classify the fraction:

Fraction	Type of Fraction	Name of the fraction
$\frac{1}{8}$		
$\frac{11}{6}$		

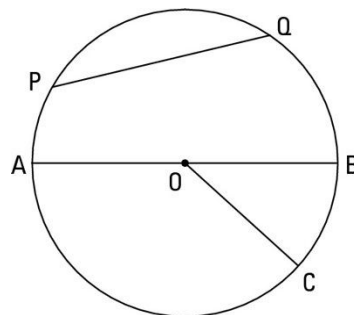
Q2. Complete the given table:

Figure	Name
	Points- _____ Lines - _____ Rays - _____

Q3. Name the following in the given circle:

a) Diameter \_\_\_\_\_

b) Radius \_\_\_\_\_



Q4. Change accordingly:

Mixed Fraction	Improper Fraction	Improper Fraction	Mixed Fraction
$1\frac{3}{4}$		$\frac{21}{4}$	
$5\frac{1}{3}$		$\frac{16}{9}$	

Q5. Match the following:

a)	Successor of smallest 4- digit number	i)	4000
b)	Place value of 3 in 43568	ii)	1
c)	$1500 + 2500$	iii)	1001
d)	HCF of 3 and 4	iv)	3000

### SECTION - B

Q6. Rewrite the following in ascending and descending order

a) 81560, 21578, 31198, 14385

b) 24144, 14394, 48396, 63494

Q7. Complete the table:

Number	Place value of underlined digit	Number Name
4 <u>5</u> 657		
<u>8</u> 9708		

Q8. Arrange in column and add:

i)  $\frac{5}{11} + \frac{3}{11} =$

ii)  $\frac{2}{7} + \frac{3}{14} =$

iii)  $1\frac{2}{5} + 2\frac{3}{10} =$

Q9. Find the difference of the following:

i)  $\frac{13}{19} - \frac{5}{19} =$

ii)  $\frac{4}{6} - \frac{1}{12} =$

iii)  $2\frac{1}{2} + 1\frac{3}{4} =$

Q 10. Find the product:

i)  $7086 \times 564$

ii)  $87305 \times 23$

Q 11. Divide and find the quotient and remainder of the following:

i)  $49603 \div 16$

ii)  $78465 \div 12$

Q 12. Find the HCF of the following:

i) 20 and 35

ii) 12 and 16

Q 13. Find the LCM of the following

i) 6, 8 and 10

ii) 5, 8 and 10

Q 14. Do as directed:

i) 15 kg = \_\_\_\_\_ g

v) 45760 ml = \_\_\_\_\_ L \_\_\_\_\_ mL

ii) 65 km 65 m = \_\_\_\_\_ m

vi) 34004 m = \_\_\_\_\_ km \_\_\_\_\_ m

iii) 87960 g = \_\_\_\_\_ kg \_\_\_\_\_ g

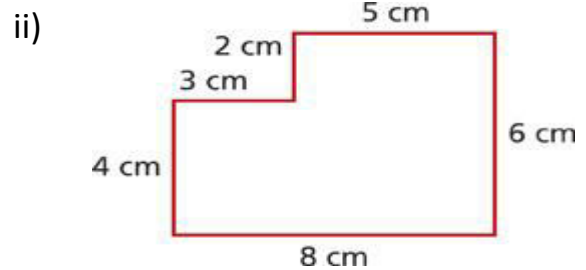
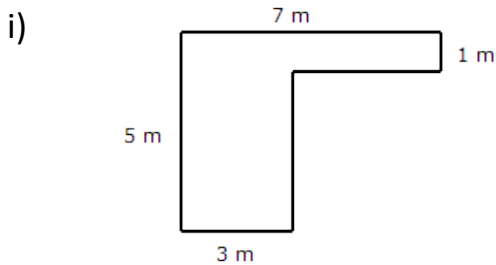
vii) 654 cm = \_\_\_\_\_ m \_\_\_\_\_ cm

iv) 55055 m = \_\_\_\_\_ km \_\_\_\_\_ m

viii) 70007 g = \_\_\_\_\_ kg \_\_\_\_\_ g

### SECTION – C

- Q15. Rinki read  $\frac{1}{3}$  part of a book on Monday and  $\frac{3}{8}$  part on Tuesday. What fraction of the book did she read in 2 days?
- Q16. A farmer had 18 kg 750 g oranges. Out of these, 4 kg 765 g oranges got spoilt. How many good oranges are left?
- Q17. To decorate a hall, a florist needs 35,670 Marigold flowers, 46,300 Roses and 27,350 Tulip flowers. How many flowers does he need in all?
- Q18. A box contains 30457 balls. How many balls are there in 37 such boxes?
- Q19. Find the product of the largest 3-digit number and smallest 3-digit number.
- Q20. Find the perimeter of the following figures:



- Q21. Following pictograph shows the number of Tractors in five villages. Observe the pictograph and answer the following questions.

Animals in a pet shop	Number of animals sold in a month
Cat	
Dog	
Sheep	
Rabbit	
Parrot	

- a) Which pet was sold the most?
- b) How many more cats were sold as compare to sheep?
- c) Which was sold the least?

### MENTAL MATHS:

1. Tally marks for 15 is \_\_\_\_\_
2. \_\_\_\_\_ - 0 = 8767
3. Product of 45 and 100 is \_\_\_\_\_
4. \_\_\_\_\_ fractions have numerator greater than denominator.
5.  $67500 \div 100 =$  \_\_\_\_\_
6. Seventh multiple of 12 is \_\_\_\_\_.
7. Is 23 a Prime number ? \_\_\_\_\_
8. Is 3 a multiple of 151 ? \_\_\_\_\_.
9. Place value of 5 in 45876 is \_\_\_\_\_
10. Predecessor of smallest 5 digit number is \_\_\_\_\_
11.  $10000 -$  \_\_\_\_\_  $= 6500$
12.  $5460 \times 10 \times 0 =$  \_\_\_\_\_
13. Successor of largest 5- digit number is \_\_\_\_\_
14.  $2550 + 60 - 200 =$  \_\_\_\_\_
15. 8 hundreds – 20 tens = \_\_\_\_\_

**FINAL EXAMINATION**  
**SUBJECT – MATHEMATICS**  
**CLASS – FOUR**  
**BLUEPRINT**

Q No.	Description	Marks
	SECTION - A	
Q 1 to Q 5	Each Question carry 1 mark	$1 \times 5 = 5$
	SECTION - B	
Q 6, Q 7	Each Question carry 2 marks	$2 \times 2 = 4$
Q 8 to Q 13	Each Question carry 4 marks	$4 \times 6 = 24$
Q 14, Q 15	Each Question carry 2 marks	$2 \times 2 = 4$
	SECTION - C	
Q 1 to Q 8	Each Question carry 1 and 1/2 marks	$1 \frac{1}{2} \times 8 = 12$
	MENTAL ABILITY	
	Each Question carry 1/2 mark	$1/2 \times 8 = 4$



**FINAL TERM EXAMINATION**

**2019-2020**

**SUBJECT: GENERAL SCIENCE**

**CLASS: FOUR**

**NAME** \_\_\_\_\_ **SECTION** \_\_\_\_\_

**GRADE:**

**Q1. Choose the correct option:**

- i. The young one of a frog :
- a. Tadpole                      b. Pupa                      c. Caterpillar                      d. Spawn
- ii. The plant takes in carbon dioxide for photosynthesis with the help of these:
- a. Chlorophyll                      b. Roots                      c. Stomata                      d. Starch
- iii. Which of these is an effect of deforestation?
- a. Conservation                      b. Afforestation                      c. Soil erosion                      d. Forest fire
- iv. Which of these plants absorbs nutrients from living plants?
- a. Mistletoe                      b. Duckweed                      c. Mangrove                      d. Tape grass
- v. These animals live on or inside a host animal and absorb nutrients from it.
- a. Parasites                      b. Carnivores                      c. Omnivores                      d. Scavengers

**Q2. Fill in the blanks:**

- i. Most \_\_\_\_\_ lay eggs in water in large clusters called spawn.
- ii. Animals that cannot make their own food and are called \_\_\_\_\_.
- iii. We use \_\_\_\_\_ to make bricks and tiles.
- iv. The hemisphere of the Earth that is tilted towards the sun receives \_\_\_\_\_ rays and has summer.
- v. \_\_\_\_\_ animals maintain a constant body temperature at all times.

**Q3. Write one word for the following:**

- i. The natural resources we use to make jewellery \_\_\_\_\_.
- ii. The different stages of development of an animal from an embryo to an adult \_\_\_\_\_.

iii. The form in which glucose is stored in plants \_\_\_\_\_.

iv. The time of the day when the sea breeze blows \_\_\_\_\_.

**Q4. Define: (Do any 2)**

i. Deforestation

---

---

ii. Food chain

---

---

iii. Breeze

---

---

**Q5. Match the column:**

**A**

i. Glucose

ii. Albumen

iii. Hide

iv. Bedrock

v. Buffaloes

vi. Mountain trees

**B**

a. Bear seeds in cones

b. Have horns to defend themselves

c. Mostly made up of rocks

d. Used to make leather

e. Provides the developing chick with proteins

f. Food for the plant

**Q6. Give reasons: (Do any 3)**

i. Water is an important natural resource.

---

---

ii. Loamy soil is ideal for growing plants.

---

---

iii. Insectivorous plants trap insects.

---

---

iv. Water is not pure even if insoluble impurities have been removed from it.

---

---

**Q7. Correct the false statements by changing the underlined words:**

i. Mammals breathe through gills.

---

ii. A food chain always starts with an animal.

---

iii. Air is an essential part of the bodies of most organisms.

---

iv. Parasitic plants absorb nutrients from dead plants and animals.

---

**Q8. Answer the following questions in brief (Do any 4)**

- i. Write any two functions of a leaf.
- ii. Give two differences between oviparous and viviparous animals.
- iii. How is soil useful as a natural resource?
- iv. What are terrestrial plants? Give two examples of terrestrial habitats.
- v. Why can sandy soil not hold water?
- vi. How do deer and zebras escape from predators?

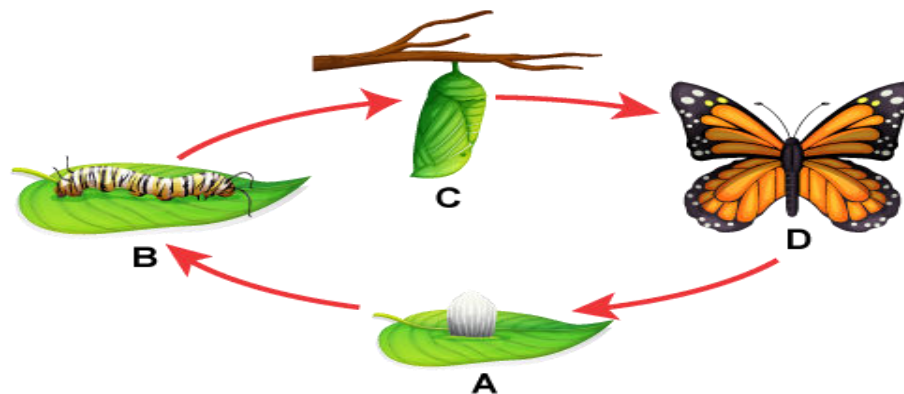
**Q9. Answer the following questions in detail (Do any 4)**

- i. Describe the different parts of a leaf.
- ii. Explain how the young one of a frog undergoes metamorphosis.
- iii. Explain the three Rs of conservation.
- iv. Name the different methods by which water can be purified. Describe any two.
- v. Name the different layers of soil. How does step farming help in conserving soil?
- vi. What are swamps and marshes? Give one adaptation of parasitic plants.

**Q10. Think and answer the questions below:**

- i. What do you think will happen if all the plants stop the process of photosynthesis?
- ii. Bats and birds both fly. However, bats are mammals. Do they reproduce differently from birds?

**Q11. Label the different stages in the life cycle of a butterfly.**



**Q12. Draw and label the “parts of an egg” OR “parts of a leaf”.**

**FINAL TERM EXAMINATION**  
**2019-2020**  
**SUBJECT: SOCIAL STUDIES**  
**CLASS: IV**

NAME: \_\_\_\_\_ ROLL NO.: \_\_\_\_\_ SECTION: \_\_\_\_\_ GRADE:

**TIME: 2:30 hour**

**1. Answer the very short questions. (Any six)**

a. Who was the founder of Mauryan Empire?

---

---

b. What is mining?

---

---

c. Name the important industries in India.

---

---

d. How fire brigade is important for us?

---

---

e. Name two government programmes that promote education for children?

---

---

f. What are the two types of crops that are grown in India?

---

---

g. Who is producer?

---

---

**2. Give two example of each.**

- a. Industries of India \_\_\_\_\_
- b. Kingdoms of Mauryan Empire \_\_\_\_\_
- c. Government Services \_\_\_\_\_
- d. Types of crops \_\_\_\_\_

**3. Match the following.**

- |                     |                           |
|---------------------|---------------------------|
| a. Ashoka the great | Black Soil                |
| b. Cotton           | Mauryan dynasty           |
| c. Basket Weaving   | Maintains Order and Peace |
| d. Police           | Cottage Industry          |
| e. Consumer         | Television                |
| f. Durable good     | Buy and uses goods        |

**4. Fill in the blanks**

- a. After the Kalinga war Ashoka became a follower of \_\_\_\_\_ .
- b. \_\_\_\_\_ is the top layer of the Earth's surface.
- c. The ship building is a \_\_\_\_\_ industry.
- d. The system that helps us to send and receive mail \_\_\_\_\_.
- e. \_\_\_\_\_ is a non – durable good.

**5. Define the following. (Any Four)**

- a. Market  
\_\_\_\_\_  
\_\_\_\_\_  
\_\_\_\_\_
- b. Agriculture  
\_\_\_\_\_  
\_\_\_\_\_  
\_\_\_\_\_
- c. Edicts  
\_\_\_\_\_  
\_\_\_\_\_  
\_\_\_\_\_

d. Metals

---

---

---

e. Cash Crops

---

---

---

**6. Write T for true and F for false.**

- a. Producers only need natural resources to make and grow their goods. ( )
- b. We deposit our money in bank to keep it safe. ( )
- c. Cotton is a finished product. ( )
- d. India is rich in mineral resource. ( )
- e. Babur defeated Ibrahim Lodhi ( )

**7. Unscramble the letters to form a correct word.**

- a. Nine jewels in Akbar's court. (VANARATANS) \_\_\_\_\_
- b. Soil found in Northern Plains (ALLVUALI) \_\_\_\_\_
- c. The health and happiness of people (EWLFAER) \_\_\_\_\_
- d. Objects produced for sale. (DOOGS) \_\_\_\_\_

**8. Give reason.**

a. Agriculture is the main occupation in India because

---

---

b. Government has started Sarva Shiksha Abhiyan because

---

---

**9. Answer the following questions in brief. (any five)**

a. Why is market important for us?

---

---

---

b. What is expenditure?

---

---

---

c. Define food crops? Give example.

---

---

---

d. What causes soil erosion?

---

---

---

e. Define Government Services? Give example.

---

---

---

f. How did Kalinga war effect Ashoka.

---

---

---



**10. Complete the table.**

<b>Cropping Season</b>	<b>Main Crops</b>	<b>States</b>
Rabi		
Kharif		
Zaid		

**11. Answer the following questions. (Any Four)**

a. Explain the functions of Police in our country?

---

---

---

---

---

b. Write in brief about the achievements of Chandragupta Maurya.

---

---

---

---

---

c. Differentiate between metallic and non-metallic minerals..

---

---

---

---

---

d. Explain large scale industries with example.

---

---

---

---

---

e. Name the different types of soil found in India. Explain any one.

---

---

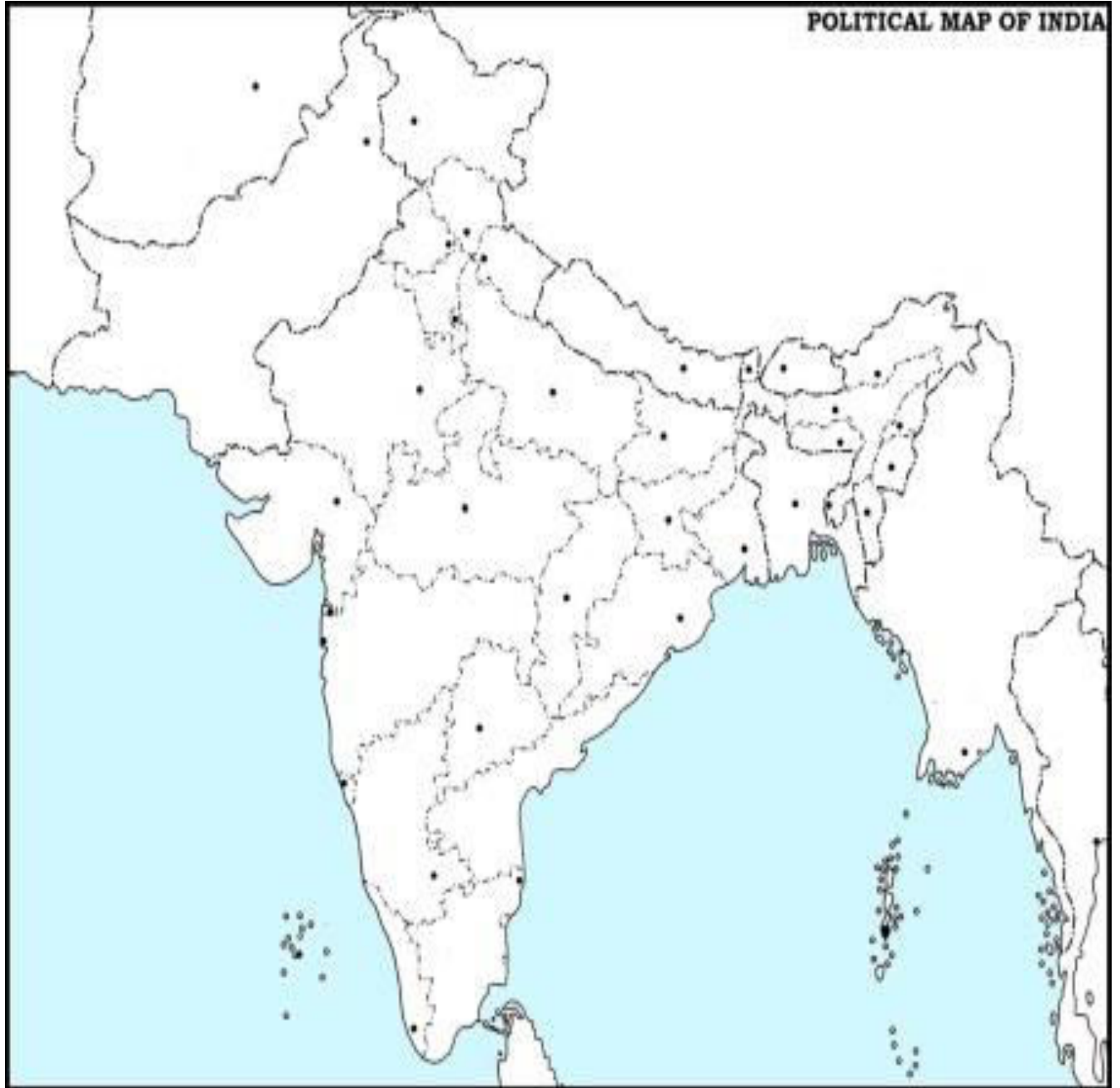
---

---

**12. On the given outline of the map of India, label the following.**

- a. Jim Corbett National Park
- b. Desert soil
- c. Petroleum (2 States)
- d. Iron and steel industry (State)
- e. Rice (2 States)

**POLITICAL MAP OF INDIA**



**FINAL TERM EXAMINATION**  
**2019-2020**  
**SUBJECT: General Knowledge**  
**CLASS: IV**

**NAME:** \_\_\_\_\_ **ROLL NO.:** \_\_\_\_\_ **SECTION:** \_\_\_\_\_

**TIME: 2:30 hour**

**GRADE:**


**General Instructions:**

- Read the questions carefully.
- All questions are compulsory.
- Writing should be neat and clean.


**1.Fill in the blanks**

- a. It is a milky extract collected from the rubber tree. It is used to make natural rubber.  
\_\_\_\_\_
- b. The ringed planet is also known as the 'jewel of the solar system' \_\_\_\_\_
- c. This water sport has strokes such as freestyle, butterfly, backstroke and breaststroke.  
\_\_\_\_\_
- d. \_\_\_\_\_ city is known as the 'Silicon Valley of India'.
- e. \_\_\_\_\_ city in India is known for its Hindi film Industry.

**2. Match the pictures of the following trees with their names.**



**Eucalyptus**



**Neem**



**Banyan**



**Baobab**



Palm



Fir

**3. Name these Countries and cities .**

- a. The Gift of the Nile \_\_\_\_\_
- b. The sugar bowl of the world \_\_\_\_\_
- c. The land of White Elephants \_\_\_\_\_
- d. The Land of thousand Lakes \_\_\_\_\_
- e. The city of joy \_\_\_\_\_
- f. The Land of cakes \_\_\_\_\_

**4. Match the following.**

- |                          |                |
|--------------------------|----------------|
| a. Fear of water         | Pyrophobia     |
| b. Fear of heights       | Astraphobia    |
| c. Fear of fire          | Claustrophobia |
| d. Fear of darkness      | Hydrophobia    |
| e. Fear of closed spaces | Acrophobia     |
| f. Fear of lightning     | Nyctophobia    |

**5. Fill in the missing letters to name these festivals.**

- a) It marks the end of Ramadan, the Muslim holy month of fasting.  
E\_\_D\_\_ \_\_F\_\_ \_\_R
- b) This is the New Year's Day of the Parsis .  
\_\_AV\_\_O\_\_
- c) This harvest festival, celebrated in the state of Kerala in India.  
O\_\_ A\_\_
- d) This Christian festival celebrates the resurrection of Jesus Christ.  
E\_\_ \_\_T\_\_ \_\_

**6. Choose the correct answer.**

- a. In which Indian city was the first metro rail operated ?
  - Mumbai
  - Delhi
  - Kolkata
- b. Which state is famous for its cotton textile industry ?
  - Mizoram
  - Gujrat

- Kerala
- c. In which city is the Indira Gandhi International Airport located ?
- Mumbai
  - Chennai
  - New Delhi
- d. In which state is the Bhabha Atomic Research Centre located ?
- Maharashtra
  - Tamil Nadu
  - West Bengal
- e. Which of these is the longest river bridge in India ?
- Bandra – Worli Sea Link
  - Lakshman Jhula
  - Dhol Sadiya Bridge

**7. Identify and name the following.**



**8. Answer the following questions.**

- a. In which country is the port of Shanghai located ?

\_\_\_\_\_

b. On the banks of which river is the port of London situated ?

\_\_\_\_\_

c. Who invented the telescope ?

\_\_\_\_\_

d. Who invented the telephone ?

\_\_\_\_\_

e. Who was the founder of Reliance Industries Limited ?

\_\_\_\_\_

f. What is the full form of IOC ?

\_\_\_\_\_

g. Which city is known as the city of 7 hills?

\_\_\_\_\_

h) Who designed the modern steam engine ?

\_\_\_\_\_

# वार्षिक परीक्षा

(2019-2019)

कक्षा – चार

निर्धारित समय :2 घंटे

ग्रेड -

नाम \_\_\_\_\_ अनुक्रमांक- \_\_\_\_\_

वर्ग - \_\_\_\_\_

सामान्य निर्देश :-

- इस प्रश्न पत्र में चार खंड हैं -क,ख, ओर ग ।
- सभी प्रश्न अनिवार्य हैं ।

खंड-क (पठन)

प्रश्न.1 दिए गए गद्यांश को ध्यानपूर्वक पढ़कर पूछे गए प्रश्नों के उत्तर लिखो-

विश्वभर में वर्षा ऋतु का स्वागत हर्ष और उल्लास से किया जाता है। जब तेज गरमी से मनुष्य परेशान हो जाते हैं, प्यासे पशु-पक्षी यहाँ-वहाँ भटकते हैं, चारों तरफ सूखी घास दिखाई देती है, ऐसे में आकाश से पानी की बूंदे धरती पर गिरते ही चारों तरफ खुशी छा जाती है। सावन और भादों-ये दो महीने वर्षा के कहलाते हैं जून के अंत में वर्षा आरंभ होती है और दो-दाई महीने तक इसका आनंद लेते हैं। काले-काले बादलों को देखकर मोर नाचने लगते हैं। वर्षा ऋतु में किसानों की खुशी का ठिकाना नहीं रहता। आकाश से बरसता जल फसलों को नया जीवन देता है। हमारा देश कृषि प्रधान देश है। यहाँ के लोग यही इच्छा करते हैं कि हर साल अच्छी वर्षा हो तो हमारा देश में खुशहाली आए।

क) विश्व में वर्षा ऋतु का स्वागत कैसे किया जाता है?

ख) कौन से दो महीने वर्षा के होते हैं?

ग) वर्षा न होने से क्या होता है?

घ) वर्षा ऋतु में किसान खुश क्यों होते हैं?

ड) इस गद्यांश का उचित शीर्षक लिखो।

खंड - ख (व्याकरण)

प्रश्न 2. निर्देशानुसार कीजिए :-

क. उचित मुहावरे छाँटकर खाली स्थान भरिए ।

आसमान सर पर उठा लिया, नाक मे दम, हवा से बातें,, आग बबूला होना

1. गुलदस्ता टूटने पर माँ \_\_\_\_\_ हो उठी ।



2. कुछ ही देर मे हमारी रेलगाडी \_\_\_\_\_
3. चाची जी के बाजार जाते ही बच्चों ने \_\_\_\_\_
4. साहिल बहुत शैतान है। उसने सबकी \_\_\_\_\_

ख) निम्नलिखित अशुद्ध वाक्यों को शुद्ध करके लिखों-

क) बच्चा सो गई।

ख) उसको सर्दी लग रहा है।

ग) वृक्ष से फल गिरा।

घ) मैंने मेरा काम नहीं किया।

ग) दिए गए शब्दों के पर्यायवाची शब्द लिखो-

1. अमृत:- \_\_\_\_\_
2. कमल:- \_\_\_\_\_
3. शिक्षक :- \_\_\_\_\_
4. अश्व :- \_\_\_\_\_

घ) निम्नलिखित वाक्यों में उचित विराम चिह्न लगाओ :-

1. सोम्या रुचिका और सोनाली एक कक्षा में पढ़ती हैं

2. क्या मैं तुम्हारे साथ खेल सकता हूँ

3. गाँधी जी ने कहा था अहिंसा सबसे बड़ा धर्म है

4. हवा से झूला ऊपर नीचे हो रहा था

ड) दिए गए वाक्यों में से विशेष्य का चयन केके लिखो :-

## विशेष्य

1. अंहकारी रावण मारा गया |
2. मेरी चाय में कम चीनी डालना।
3. बस में बारह यात्री बैठे हैं |
4. यह कलम सुधा की है |

---

---

---

---

च) नीचे दिए गए वाक्यों में क्रिया को रेखांकित कीजिए।

1. सुनील पानी लाओ।
2. पंक्षी उड़ रहा है।
3. माँ ने आइसक्रीम खाई।
4. नैना रोज स्कूल जाती है।

छ) संकेत के आधार पर चित्र का वर्णन कीजिए-

संकेत - रेलगाड़ी, यात्री, आस पास का वातावरण, कुली, पेड़-पौधे, रेलवे स्टेशन, व्यक्ति



ज) निम्नलिखित में से किसी एक विषय पर कहानी लिखिए।

“वाचाल कछुआ”

अथवा

“पिंजरे का शेर”

वार्षिक परीक्षा (2019-2019)

कक्षा – चार

निर्धारित समय :2 घंटे

ग्रेड -

नाम \_\_\_\_\_ अनुक्रमांक- \_\_\_\_\_ वर्ग - \_\_\_\_\_

सामान्य निर्देश :-

- इस प्रश्न पत्र में साहित्य भाग हैं।
- सभी प्रश्न अनिवार्य हैं।

खंड-क ( साहित्य )

प्रश्न 3.दिए गए गद्यांश को ध्यानपूर्वक पढ़कर पूछे गए प्रश्नों के सही उत्तर ( ) का निशान लगाओ :-

नाशते के बाद गरम् पानी से नहाकर फिर लिखने बता हूँ।बादल अब बहुत-कुछ छँट गए

हैं ,धूप निकल आई है पेड़ों की डालें हवा से डोल रही हैं और पत्ते झिलमिल-झिलमिल चमक उठे हैं,और न जाने कितनी तरह की चिड़ियाँ गा रही हैं। इन चिड़ियों को मैं पहचान नहीं सका हूँ। आज और कुछ लिखने का समय नहीं रह गया है। इति।

क) लेखक क्या करने बैठे थे?

उत्तर:-

---

---

---

ख) उस समय मौसम कैसा था?

उत्तर:-

ग) पत्ते कैसे दिख रहे थे?

उत्तर:-

घ) पत्र में चिड़ियाँ के बारे में क्या लिखा है?

उत्तर :-

ड) लेखक के पास क्या करने का समय नहीं रह गया था?

उत्तर:-

प्रश्न 4. निम्नलिखित शब्दों के अर्थ लिखो :-

i. चाल :-

ii. प्रवास :-

iii. लगाव :-

iv. अनूठा :-

v. असंभव :-

vi. किस्म :-

प्रश्न 5. दिए गए शब्दों का वाक्य में प्रयोग कीजिए :-

क) अभिवादन -

ख) चित्रकारी :-

ग) अनुभव :-

प्रश्न 6. सही उत्तर चुनकर ( ) लगाओ:-

क) परियाँ बालक को क्या दिखाती हैं?

i. सजे –सजाए बौने      ii.  नारे में नहाती मछलियाँ     

iii. सुंदर और मीठे सपने      i.  हली छड़ी     

ख) केरल का प्रमुख नृत्य कौन-सा है?

i. कथकली       कथक      iii. बि       iv. भरतनाट्य      

ग) किस मौसम में किसान व्यस्त होते हैं ?

i. सिंचाई के समय       ii. गर्मी में     

iii. सर्दी में       बुआई के समय     

प्रश्न 7. निम्नलिखित प्रश्नों के उत्तर लिखो -

क) पानी को 'अमृत' क्यों कहा गया है?

ख) किसान क्यों व्यस्त थे?

ग) दादा जी शांतिनिकेतन में अपना समय कैसे बिताना चाहते हैं?

घ) केरल में कौन-कौन से मसालों का उत्पादन होता है?

ड) बालक अपने सपने में क्या-क्या देखता है ?