

**FINAL TERM EXAMINATION
2019-2020
COMPUTER
CLASS- II**

NAME: _____ **ROLL NO.:** _____ **SECTION:** _____

TIME: 1 Hour

GRADE:

General Instructions:

- Read the questions carefully.
- All questions are compulsory.
- Write in neat & clean handwriting.

Q1. Multiple Choice Questions. Tick the correct option.

- a) A keyboard has _____ keys.
1. 12 2. 104 3. 26
- b) _____ is the area where you can type your text .
1. Document area 2. Word pad 3. Title bar
- c) The keyboard shortcut _____ is used to close a document.
1. ALT+ F2 2. Ctrl + S 3. ALT+ F4
- d) _____ contains tools arranged in different groups .
1. Paint button 2. Tab 3. Ribbon
- e) _____ is the area where you can draw.
1. Ribbon 2. Title bar 3. Drawing Area

Q2. Write T for True and F for False.

- a) The right arrow key is used to move the cursor to the right. _____
- b) The size of selected text cannot be changed. _____
- c) The cut icon is in the clipboard group. _____
- d) Ribbon shows Tabs and Groups. _____
- e) Word pad is a presentation program. _____

Q3. Fill in the blanks:-

- a) The _____ keys have signs of mathematical operations on them.
- b) Word pad provides _____ area to type the text.
- c) New font can be selected from the _____ drop-down list.
- d) A curve tool is used to draw _____ lines.
- e) _____ is the area where you can draw.


Q4. Unscramble the following words.

- a) DROAD EYK _____
- b) DORW DPA _____
- c) EXTT _____
- d) AINTP _____

Q5. Match the following.

COLUMN "A"	COLUMN "B"
1. Spacebar	a. Place a line under the text
2. Italic	b. Moves the cursor to the next line
3. Up arrow key	c. Adds blank space
4. Enter key	d. Make the text slanted
5. Underline	e. moves the cursor up

Q6. Identify the tools below and write its name :-





B

U

Q7. Answer the following:-

a) Where will you find the close button on the word pad window?


b) Which drop-down list contains different fonts?

c) What is Quick Access Toolbar.

d) What is Arrow key?

e) What is word pad?

Q8. Label the types of keys .



FINAL TERM EXAMINATION

GENERAL KNOWLEDGE

CLASS-TWO

Name- _____

Section- _____

Roll no- _____

Q1. Read the following questions and tick the correct option:-

1. This bird is considered the symbol of peace.
a) Turkey b) parrot c) dove
2. Which of the following is not an Olympic sport?
a) Cycling b) swimming c) squash
3. He treats diseases of the teeth and gums.
a) Journalist b) dentist c) surgeon
4. On 22 March, we promise to save water.
a) Children day b)Water day c)Earth day

Q2. Write two examples for each of the following:-

1. Classical dances of India

2. Famous people

3. Planets

4. Rivers

Q3. Unscramble the words to answer the following questions.

1. When a river overflows, it causes DSFLOO _____
2. It is the world's longest river- LENI _____
3. These help fish to breathe. LLGI _____

4. This plant is used to make medicines and also brush our teeth. MEEN

Q4. Match the following:-

1. In the garden

a) manipuri

2. Venus

b) banks

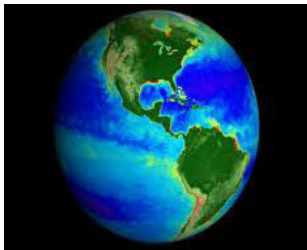
3. Sides of river

c) flowers

4. Manipur

d) Planet

Q5. Identify the following pictures by writing your answers in the blanks.









Q6. Give one word each:-

1. The largest land animal on earth- _____
2. On 14 November, we celebrate Pandit Jawaharlal Nehru birthday.

3. Badminton can be played by two or by _____ people.
4. This is the currency of India. _____
5. This bony cage protects our heart and lungs. _____
6. The longest river in India is the _____

BLUE PRINT

CLASS- Two

General Knowledge

S.NO.	TOPICS	MARKS
1	Tick the correct option	4
2	Give two examples	8
3	Unscramble words	4
4	Match the following	4
5	Identify the pictures	4
6	Give one word	6
	Total	30

Final Examination 2019-20

Class – Two

Mathematics

Name :- _____ Roll No. _____ Sec _____ Grade _____

General instructions:-

- Read all questions carefully.
- All questions are compulsory.
- Write in neat and clean hand writing

1. Arrange in ascending order.

a. 450m, 250m, 540m, 320m

.....

b. 200cm, 110cm, 500cm, 300cm

.....

c. 20mL, 52mL, 89mL, 45 mL

.....

2. Arrange in descending order.

a. 480m, 820m, 640m, 720m

.....

b. 260cm, 510cm, 550cm, 360cm

.....

c. 280mL, 542mL, 489mL, 645 mL

.....

3. Arrange vertically and add

a. 32m18 cm and 24m20 cm
110mL

m	cm

b. 15kg 61g and 45kg21g

Kg	g

c. 70L 210 mL and 24L

L	mL

d. ₹75.40 and ₹20.19

₹	p

e. ₹51.25 and ₹28.30

₹	p

4. Arrange vertically and subtract:

a. 32m15 cm from 84m59 cm
102mL

m	cm

b. 56kg 61g from 85kg95g

Kg	g

c. 70L 210 mL from 25L

L	mL

d. ₹75.40 from ₹85.95

₹	p

e. ₹25.30 from ₹75.85

₹	p

5. Find the product of the following:

H	T	O
1	2	1
X		5

H	T	O
1	2	2
X		4

H	T	O
1	1	2
X		7

H	T	O
1	3	2
X		3

H	T	O
1	1	3
X		6

6. Write the multiplication and division facts by filling the box:

Multiplication Fact	Division Facts
$7 \times 4 = \underline{\hspace{2cm}}$	$\underline{\hspace{1cm}} \div \underline{\hspace{1cm}} = \underline{\hspace{1cm}}$ $\underline{\hspace{1cm}} \div \underline{\hspace{1cm}} = \underline{\hspace{1cm}}$
$9 \times 8 = \underline{\hspace{2cm}}$	$\underline{\hspace{1cm}} \div \underline{\hspace{1cm}} = \underline{\hspace{1cm}}$ $\underline{\hspace{1cm}} \div \underline{\hspace{1cm}} = \underline{\hspace{1cm}}$
$5 \times 6 = \underline{\hspace{2cm}}$	$\underline{\hspace{1cm}} \div \underline{\hspace{1cm}} = \underline{\hspace{1cm}}$ $\underline{\hspace{1cm}} \div \underline{\hspace{1cm}} = \underline{\hspace{1cm}}$

7. Divide the following:

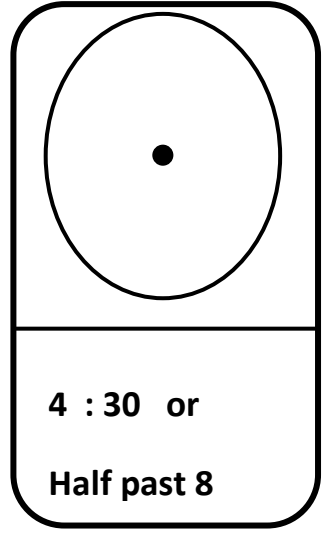
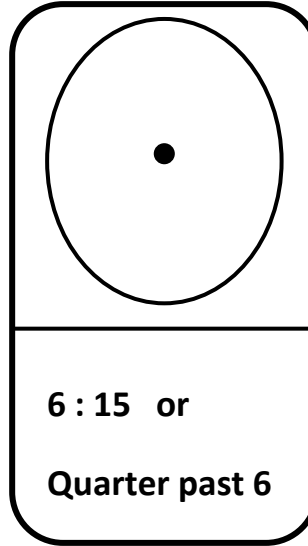
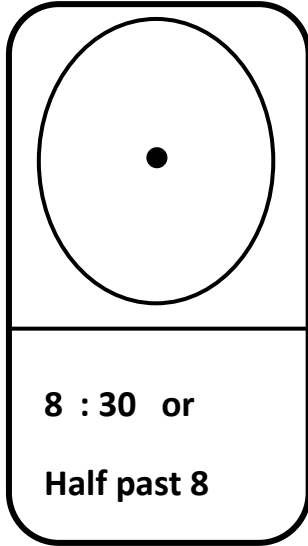
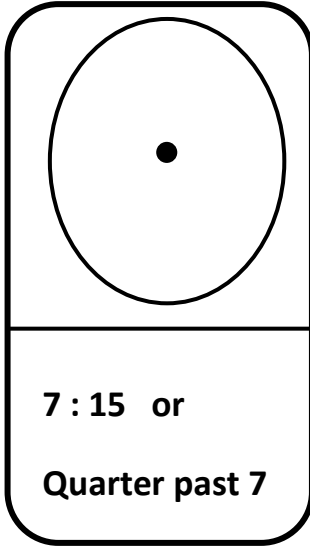
<p>a. $6 \overline{) 36}$</p> <p>$6 \times \square = 36$</p>	<p>b. $8 \overline{) 48}$</p> <p>$8 \times \square = 48$</p>
<p>c. $4 \overline{) 28}$</p> <p>$4 \times \square = 28$</p>	<p>d. $8 \overline{) 32}$</p> <p>$8 \times \square = 32$</p>

8. Word problems:


a. Tina bought a book for ₹ 162, and a notebook for ₹ 30. How much money did she spend in all?

b. Mona had ₹ 440. She purchased fruits for ₹196. How much money was left with her?

9. Draw the hour hand and the minute to show the given time.



10. Write the time shown by the clocks.









11. Write in figures.

a. Nine rupees and sixty paise

₹ _____

b. Six rupees and eighty paise

₹ _____

c. Thirty-nine rupees and twenty paise

₹ _____

d. Twenty-four rupees and fifty paise

₹ _____

e. Eighty-five rupees and forty paise

₹ _____


f. forty-eight rupees and fifty paise

₹ _____

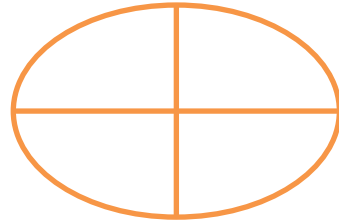
12. Shade the following.



$\frac{1}{2}$



$\frac{1}{3}$



$\frac{1}{4}$

13. Name the shape of each object.



14. Mental Sums:

a. 7 hundreds + 3 tens + 2 ones = _____

b. 100 more than 520 is _____

c. 1 more than 599 is _____

d. Place value of 5 in 859 is _____

e. $65 + 100 =$ _____

f. $1\text{kg} =$ _____ g

g. $2\text{ m} =$ _____ cm

h. $\text{₹}50 +$ _____ = Rs. 100

i. _____ Rs. 5  coins will make ₹25

j. 1 litre = _____ millilitres

Final Term Examination 2019-20

Science

Class – Two

Name _____ Roll No. _____ Section _____ Grade _____

General instructions:-

- All questions are compulsory.
- Read all the questions carefully.
- Write in neat and clean hand writing.

Q1. Answer the following questions in short:(any five)

Q1. What are domestic animals? Give examples.

Ans _____

Q2. Why are hyenas important in the jungle?

Ans _____

Q3. What help us run and play?

Ans _____

Q4. Why does the Sun look small to us?

Ans _____

Q5. Why there is no life on the moon?

Ans _____

Q6. How are stones formed?

Ans _____

Q7. What are minerals?

Ans _____

Q2. Answer the following in details:(any four)

Q1. Name any three rocks and state one use of each.

Ans _____

Q2. What is a shadow? When is the shadow longest?

Ans _____

Q3. What is a posture? Why is good posture important?

Ans _____

Q4. How are animals useful to us?

Ans _____

Q5. Where do elephants and deer rest? How do animals become homeless?

Ans _____

Q6. Name three soft minerals and state its use.

Ans _____

Q3. Fill in the blanks:

1. _____ is the hardest known mineral.
2. The Sun is a big ball of _____.
3. The moon shines brightly in the _____ sky.
4. _____ are attached to the bones.
5. _____ eat plant parts insects and worms.

Q4. Match the column:

A	B
1. Dogs	I. Live in jungle.
2. Wild animals	II. Skeleton.
3. Frame work	III. Soft minerals.
4. Graphite	IV. First Indian to travel to space.
5. Rakesh Sharma	V. Guards our houses.

Q5. Unscramble the following:

1. Stronaaut : _____
2. Dowsha : _____
3. Onbes : _____
4. Eralsmin : _____

Q6. Answer the following in one word:

1. A type of rock that can float on water _____
2. The whole of the universe outside the Earth's surface _____

3. Time taken by light to reach the Earth from the Sun _____

4. Muscles in human body _____

5. A structure that birds make to keep their eggs _____

Q7. Name these:

1. Two animals that carry loads.

2. Two things made of leather

3. Two women astronauts who travelled to space.

4. Natural source of light.

5. Things made of china clay.

Q8. Draw and label any one

a. Two artificial source of light.

b. Two thing made of milk

वार्षिक परीक्षा (2019 – 20)

कक्षा – दूसरी

अंक योजना

विषय – हिंदी

क्र.सं	प्रश्नों के प्रकार	अंक
1	भाग (क) व्याकरण अपठित गद्यांश	5
2	अनुच्छेद लेखन	5
3	चित्र वर्णन	5
4	समानार्थी शब्द	4
5	लिंग	2
6	वचन	2
7	विलोम	2.5
8	दिन / महीने	2
9	साहित्य - पठित गद्यांश	3
10	शब्दार्थ	2
11	प्रश्न / उत्तर	7.5
12	वाक्य बनाओ	4
13	पंक्तियाँ पूरी करो	3
14	किसने किससे कहा	3

वार्षिक परीक्षा

(2019-2020)

विषय - हिन्दी

कक्षा – दूसरी

समय : 2घंटे

नाम _____ अनुक्रमांक- _____ वर्ग - _____ ग्रेड - _____

सभी प्रश्न अनिवार्य हैं।

- प्रश्न पत्र को तीन भागों में विभाजित किया गया है – भाग क (पठन) , भाग ख (लेखन) , भाग ग (व्याकरण),

भाग क (पठन)

प्र. 1 दिए गए गद्यांश को ध्यानपूर्वक पढ़कर पूछे गए प्रश्नों के सही उत्तर () का निशान लगाओ –

- सही उत्तर पर () का निशान लगाओ।

रोहन दादा जी की उँगली पकड़े पार्क की ओर जा रहा था। दोनों रोज सुबह सैर करने जाते थे। पार्क में रोहन को एक नन्हा पौधा दिखाई दिया। उसे लगा जैसे पौधा अपने पत्ते हिला – हिलाकर उसका स्वागत कर रहा हो।

“कुछ दिन पहले तो तुम यहाँ पर नहीं थे!” रोहन ने पौधे से कहा।

अरे, यह क्या? पौधा बोल पड़ा, “हाँ, पहले मैं बीज के अंदर था। माली काका ने मेरे बीज को धरती के अंदर गाड़ दिया। इस धरती की गोद में मेरा जन्म हुआ।”

क) रोहन किसके साथ पार्क गया था?

पिता जी के साथ

की के साथ

नाना जी के

ख) माली काका ने बीज का क्या किया?

बीज को फेंक दिया

ता डाल दिया

धरती में ग

या

ग) पार्क में रोहन को क्या दिखाई दिया?

नन्हा पौधा

– सा पेड़

बड़ा –

लाब

घ) ‘सुबह’ के उलटे अर्थ वाला शब्द है?

शाम

सवेरा

प्र.2 अनुच्छेद लिखों –

वसंत ऋतु

या

मेरे दादा जी

प्र.3 चित्र देखकर कुछ वाक्य लिखों



प्र०4 रेखांकित शब्दों के लिंग बदलकर वाक्य पूरा कीजिए –

क) माली और _____ फूलों की माला बना रहे हैं।

ख) बिल्ली को देखकर चूहा और _____ भाग गए।

ग) किसान के पास बैल और _____ की जोड़ी है।

घ) कबूतर और _____ पेड़ पर बैठे हैं।

प्र०5 विलोम शब्दों का सही मिलान कीजिए -

सस्ता जीत

हार महुँगा

अमीर झूठ

भारी गरीब

सच हल्का

प्र०6 चित्र देखकर दो – दो समानार्थी शब्द लिखो :









प्र०7 वचन बदलकर लिखो ।

चूहा - _____

माला - _____

बकरी - _____

आँख - _____

प्र०8 दिए गए वाक्यों में सही (✓) अथवा गलत (x) का निशान लगाइए -

क) बुधवार के बाद सोमवार आता है ।

ख) अप्रैल से पहले मार्च आता है ।

ग) एक वर्ष में दस महीने होते हैं ।

घ) साल का आखरी महीना दिसंबर है ।

वार्षिक परीक्षा

(2019-2020)

विषय - हिन्दी

कक्षा – दूसरी

समय : 2घंटे

नाम _____ अनुक्रमांक- _____ वर्ग - _____ ग्रेड - _____

सभी प्रश्न अनिवार्य हैं।

भाग (घ) साहित्य

प्र.1 दिए गए गद्यांश को ध्यानपूर्वक पढ़कर पूछे गए प्रश्नों के सही उत्तर दीजिए।

शेरुदा बहुत बड़ा शेर था। वह जंगल का राजा था। वह बहुत आलसी हो गया था। मेहनत नहीं करना चाहता था।

इसी कारण भोजन के लिए शिकार भी नहीं करता था। जंगल के सभी पशु – पक्षी उसके लिए भोजन लेकर आते थे

। एक छोटा खरगोश कूदता हुआ आया। “शेरुदा, एक लाल गाजर खाओगे? खेत से अभी निकालकर लाया हूँ,” उसने

पूछा।

क) शेरुदा कौन था ?

उ० _____

ख) शेरुदा के लिए भोजन कौन लाते थे ?

उ० _____

ग) शेरुदा के लिए गाजर कौन लाया ?

उ० _____

प्र०2 शब्दों के अर्थ लिखो –

नीड - _____

भोजन - _____

ऋतु - _____

काया - _____

प्र०3 निम्न प्रश्नों के उत्तर दीजिए -

क) मिनी को किसने कहानी सुनाई ?

उ० _____

ख) बुलबुल ने घोंसला कहाँ बनाया ?

उ० _____

ग) अपना थैला साथ में लेकर जाना क्यों ज़रूरी है ?

उ० _____

घ) शेरुदा शिकार क्यों नहीं करता था ?

उ० _____

ङ) बसंत ऋतु में धरती पर क्या - क्या दिखाई देता है ?

उ० _____

प्र०4 वाक्य बनाओ -

शिकार - _____

आलसी - _____

चिड़िया - _____

मनपसंद -

प्र०13 कविता की पंक्तियाँ पूरी करो -

_____ के उगते ही चिड़िया

मीठा _____ सुनाती है

चूँ - चूँ _____ बोल-बोलकर

सबको _____ कर जाती है।

प्र०14 किसने किससे कहा ?

वाक्य	किसने कहा	किससे कहा
“ क्या यह आम खाओगे ? बड़ा मीठा और रसीला है ”		
ये लो थैला और सामान की सूची		
तुम मांसाहारी तो हो , लेकिन आज फल - सब्जियाँ भी खाकर देखो		

**FINAL TERM EXAMINATION
(2019-2020)
ENGLISH (LANGUAGE)
CLASS – TWO**

Name - _____ Section - _____ Grade - _____

Section – A (Reading)

1. Read the given passage carefully.

We can see a rainbow in the sky after the rain. When it becomes sunny again, a band of colours appears across the sky in the shape of a semicircle (half a circle) . A rainbow has seven colours----- violet, indigo, blue, green, yellow, orange and red. A rainbow can be seen in the sky for a short time. It is formed when rays of the sun fall on the tiny droplets of water in the air, immediately after the rain. A rainbow looks beautiful and colourful.

A. Tick () the correct answers.

a. A rainbow is a band of colours that appears

i) Across the sky ii) across the ocean

b. A rainbow is in the shape of a

i) Square ii) semicircle

B. Match the words in the two columns to form complete sentences.


Column A	Column B
a. We can see a rainbow	i) Has seven colours.
b. A rainbow	ii) Fall on tiny droplets of water in the air.
c. A rainbow is formed when sunrays	iii) In the sky after the rain.

C. Answer the following questions:

(i) What are the different colours in the rainbow?

(ii) Use one describing word for the rainbow.

D. Draw the picture of a rainbow.



Section – B (Writing)

2. Look at the picture and complete the sentences:



a. The children are carrying _____

b. It is a _____

c. The children look _____

d. The sky is _____

e. I like rainy day because _____

3. Write a short composition about 'Importance of a Tree' or 'The Best Friend' .

Section – C (Grammar)

4. Do as directed:

- a. This house four bedrooms. (has/have)
- b. I had (a/an) dosa in the morning.
- c. are sketch pens. (These/Those)
- d. I absent yesterday. (was/were)
- e. Church (write the plural form)

5. Reorder the words in each group form a sentence.

- a. very/hungry./I/am

- b. shining/is/brightly./moon/The

- c. went/Agra/Seema/to/ her family./with

- d. dancing./I/love

6. Fill in the blanks with 'what', 'when' and 'where'.

- a..... do you have breakfast?

- b..... do you get up in the morning?

c..... are you going?

d..... Is the capital of India?

e..... will you go to the market?

7. Circle the position words in these sentences .

a. Look! Your socks are lying under the bed.

b. My aunt rushed onto the moon.

c. The dustbin is placed between the trees.

d. Keep the clothes in your cupboard.

e. The boy is hiding under the bed.

8. Tick the correct joining word in brackets to complete each sentence.

a. The jeep is old, (or/but) it runs well.

b. I had a bread (and/or) jam sandwich an hour ago.

c. We saw elephant (but/and) camel on the farm.

d. We can eat chocolate (or/but) cake .

Final Term Examination(2019-20)

English (Literature)

Class – Two

Name - _____ Section - _____ Grade - _____

Instructions:

- *Read the question paper carefully.**
- *Write neat and clean handwriting.**
- *All questions are compulsory.**

Section – D (Literature)

9. Who said to whom?

The Sentence	Who said?	To Whom?
'My Dear Lamp'! why are you not talking today'?		
'I want to go and buy crackers'.		
'I will put fairy lights all over the house'		

10. Write the meaning of the words:(any three)

Delicious -

pledge -

Pause -

Spicy -

11. Make sentence:

a. rich - _____

b. season - _____

c. festival - _____

d. butterfly - _____

12. Answer the following questions:

1. What happens in autumn?

2. Why does the caterpillar look like a bus?

3. How did the neighbours come to know that the old woman was in trouble?

4. Why has the poet named his dog, spot?

5. Where did an old woman live?

6. What did the seasons finally decide?

BLUE PRINT OF ENGLISH (2019-20)(Total – 50)

Class - Two

CONTENT	MARKS
Section – A (Reading) *unseen passage	10
Section – B (Writing) *Picture composition	6 3
*Short composition	3
Section – C (Grammar) *Do as directed	14 2.5
*preposition	2.5
*conjunction	2.5
*The Sentence	4
*Question words	2.5
Section – D (Literature) *Who said to whom?	20 1.5
*Word/Meaning	1.5
*Make sentence	5
*Q/Ans	12

