

# GREENWAY NURSERY SCHOOL

## MATHS WORKSHEET

Name: \_\_\_\_\_ Class: Pre - Primary Sec: \_\_\_\_\_ Date: \_\_\_\_\_

### Q1. Number line subtraction.

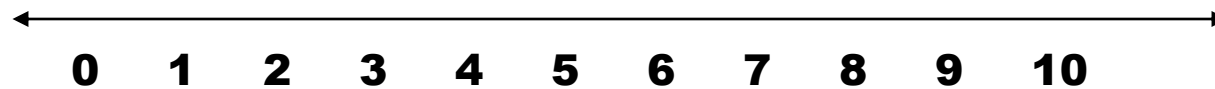
(a)  $9 - 5 =$



(b)  $3 - 3 =$



(c)  $7 - 2 =$



### Q2. 2 digit addition

T	O
6	4
+ 1	5

T	O
4	7
+ 2	0

T	O
4	3
+ 4	5

T	O
8	3
+ 0	1

**Q3. Dodging Table**

**a) 4 X 8 = \_\_\_\_\_**

**(b) 4 X 10 = \_\_\_\_\_**

**c) 4 X 7 = \_\_\_\_\_**

**(d) 4 X 2 = \_\_\_\_\_**

**(e) 4 X 4 = \_\_\_\_\_**

**(f) 4 X 9 = \_\_\_\_\_**

**Q4. Write number names**

<b>15 -</b>	<b>11 -</b>
<b>20 -</b>	<b>18 -</b>
<b>9 -</b>	<b>12 -</b>
<b>17 -</b>	<b>13 -</b>

**Q5. What comes:-**

<b>AFTER</b>	<b>BEFORE</b>	<b>IN BETWEEN</b>
<b>99</b> _____	_____ <b>92</b>	<b>81</b> _____ <b>83</b>
<b>14</b> _____	_____ <b>45</b>	<b>94</b> _____ <b>96</b>
<b>77</b> _____	_____ <b>60</b>	<b>37</b> _____ <b>39</b>
<b>59</b> _____	_____ <b>86</b>	<b>69</b> _____ <b>71</b>

**Q6.Subtraction:-**

<b>(a)</b>	<b>7</b>		<b>(b)</b>	<b>6</b>		<b>(c)</b>	<b>4</b>		<b>(d)</b>	<b>5</b>
<b>-</b>	<b>2</b>		<b>-</b>	<b>2</b>		<b>-</b>	<b>1</b>		<b>-</b>	<b>5</b>

**Q7. Write table of 4.****Q8. Write Forward counting 201 – 240.****Q9. Write backward counting 100 – 61.**

# **GREENWAY NURSERY SCHOOL**

## **ENGLISH WORKSHEET**

**Name:** \_\_\_\_\_ **Class:** Pre - Primary **Sec:** \_\_\_\_\_ **Date:** \_\_\_\_\_

**Q1. Join the pair of words using 'And' .**

**a. A boy    A girl**

\_\_\_\_\_

**b. A bag    A book**

\_\_\_\_\_

**c. A cat    A rat**

\_\_\_\_\_

**d. A lock    A Key**

\_\_\_\_\_

**Q2 Write the names of any 5 colours.**

**a)** \_\_\_\_\_ **(b)** \_\_\_\_\_

**c)** \_\_\_\_\_ **(d)** \_\_\_\_\_

**e)** \_\_\_\_\_

**Q3. Fill in the blanks with (He / She)**

**1)** \_\_\_\_\_ **is Sachit.**

**2)** \_\_\_\_\_ **is a boy.**

**3)** \_\_\_\_\_ **is my brother.**



**1.** \_\_\_\_\_ **is Kavya.**

**2.** \_\_\_\_\_ **is a girl.**

**3.** \_\_\_\_\_ **is a student.**



**Q4. Answer the following questions.**


**a. What is this?**



**b. What is that?**



**c. What is this?**



**Q5. Fill in the blanks.**

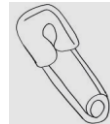
**1. This is a \_\_\_\_\_.**



**2. That is a \_\_\_\_\_.**



**3. This is a \_\_\_\_\_.**



**4. That is a \_\_\_\_\_.**




**5. This is a \_\_\_\_\_.**



**Q6. Fill in the blanks with (IN / OUT)**

**a. The fish is \_\_\_\_\_ of the water.**



**b. A puppy is \_\_\_\_\_ the car.**



**c. Some clothes are \_\_\_\_\_ the almirah.**



**Q7. Fill in the blanks with (ON / UNDER)**

a.  The book is \_\_\_\_\_ the table.

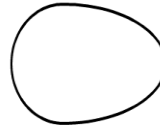
b.  The bucket is \_\_\_\_\_ the tap.

c.  A cat is \_\_\_\_\_ the mat.

d.  The shoes are \_\_\_\_\_ the bed.

**Q8. Answer the following questions using (YES / NO)**

a. Is this an egg?  
\_\_\_\_\_.



b. Is that an orange?  
\_\_\_\_\_.



**Q9. Fill in the blanks**

a. Is this a peacock?  
\_\_\_\_\_, this is not.



This is a \_\_\_\_\_.

b. Is that a plate?  
\_\_\_\_\_, that is.







That is a \_\_\_\_\_.

# GREENWAY NURSERY SCHOOL









## HINDI WORKSHEET

Name: \_\_\_\_\_ Class: Pre - Primary Sec: \_\_\_\_\_ Date: \_\_\_\_\_

**Q1.** मिलान करो ।

	गुडिया
	चूजा
	दूध
	साबुन

**Q2.** चित्र देखकर नाम लिखर:-

**Q3. .खाली स्थान भरो:-**

1. \_\_\_\_\_ उड़ गई।
2. \_\_\_\_\_ की गाड़ी आ गई।
3. अनिल \_\_\_\_\_ लिख ।
4. नीलम \_\_\_\_\_ व \_\_\_\_\_ खा।
5. \_\_\_\_\_ बजा कर दिखा ।
6. \_\_\_\_\_ चमक रही थी।
7. सचिन \_\_\_\_\_ व \_\_\_\_\_ ला ।
8. सीता \_\_\_\_\_ पकड़ रही थी।

**Q4.5 – 5 नाम लिखो -**

	सब्जी	फल	रंग	यातायात
1				
2				
3				
4				
5				

**Q5. 5 - 5 शब्द लिखो:-**

आ	इ	ई	उ	ऊ

## MATHS WORKSHEET

Name: \_\_\_\_\_ Class: Pre – Primary Sec: \_\_\_\_\_ Date: \_\_\_\_\_

***Table of 4 (skip counting) Colour the 4's with green colour.***

<b>1</b>	<b>2</b>	<b>3</b>	<b>4</b>	<b>5</b>	<b>6</b>
<b>7</b>	<b>8</b>	<b>9</b>	<b>10</b>	<b>11</b>	<b>12</b>
<b>13</b>	<b>14</b>	<b>15</b>	<b>16</b>	<b>17</b>	<b>18</b>
<b>19</b>	<b>20</b>	<b>21</b>	<b>22</b>	<b>23</b>	<b>24</b>
<b>25</b>	<b>26</b>	<b>27</b>	<b>28</b>	<b>29</b>	<b>30</b>
<b>31</b>	<b>32</b>	<b>33</b>	<b>34</b>	<b>35</b>	<b>36</b>
<b>37</b>	<b>38</b>	<b>39</b>	<b>40</b>	<b>41</b>	<b>42</b>

<b>4 X 1 =</b> _____	<b>4 X 6 =</b> _____
<b>4 X 2 =</b> _____	<b>4 X 7 =</b> _____
<b>4 X 3 =</b> _____	<b>4 X 8 =</b> _____
<b>4 X 4 =</b> _____	<b>4 X 9 =</b> _____
<b>4 X 5 =</b> _____	<b>4 X 10 =</b> _____

## MATHS WORKSHEET

Name: \_\_\_\_\_ Class: Pre – Primary Sec: \_\_\_\_\_ Date: \_\_\_\_\_

***Table of 4 (skip counting) Colour the 4's with green colour.***

<b>1</b>	<b>2</b>	<b>3</b>	<b>4</b>	<b>5</b>	<b>6</b>
<b>7</b>	<b>8</b>	<b>9</b>	<b>10</b>	<b>11</b>	<b>12</b>
<b>13</b>	<b>14</b>	<b>15</b>	<b>16</b>	<b>17</b>	<b>18</b>
<b>19</b>	<b>20</b>	<b>21</b>	<b>22</b>	<b>23</b>	<b>24</b>
<b>25</b>	<b>26</b>	<b>27</b>	<b>28</b>	<b>29</b>	<b>30</b>
<b>31</b>	<b>32</b>	<b>33</b>	<b>34</b>	<b>35</b>	<b>36</b>
<b>37</b>	<b>38</b>	<b>39</b>	<b>40</b>	<b>41</b>	<b>42</b>

<b>4 X 1 =</b> _____	<b>4 X 6 =</b> _____
<b>4 X 2 =</b> _____	<b>4 X 7 =</b> _____
<b>4 X 3 =</b> _____	<b>4 X 8 =</b> _____
<b>4 X 4 =</b> _____	<b>4 X 9 =</b> _____
<b>4 X 5 =</b> _____	<b>4 X 10 =</b> _____