

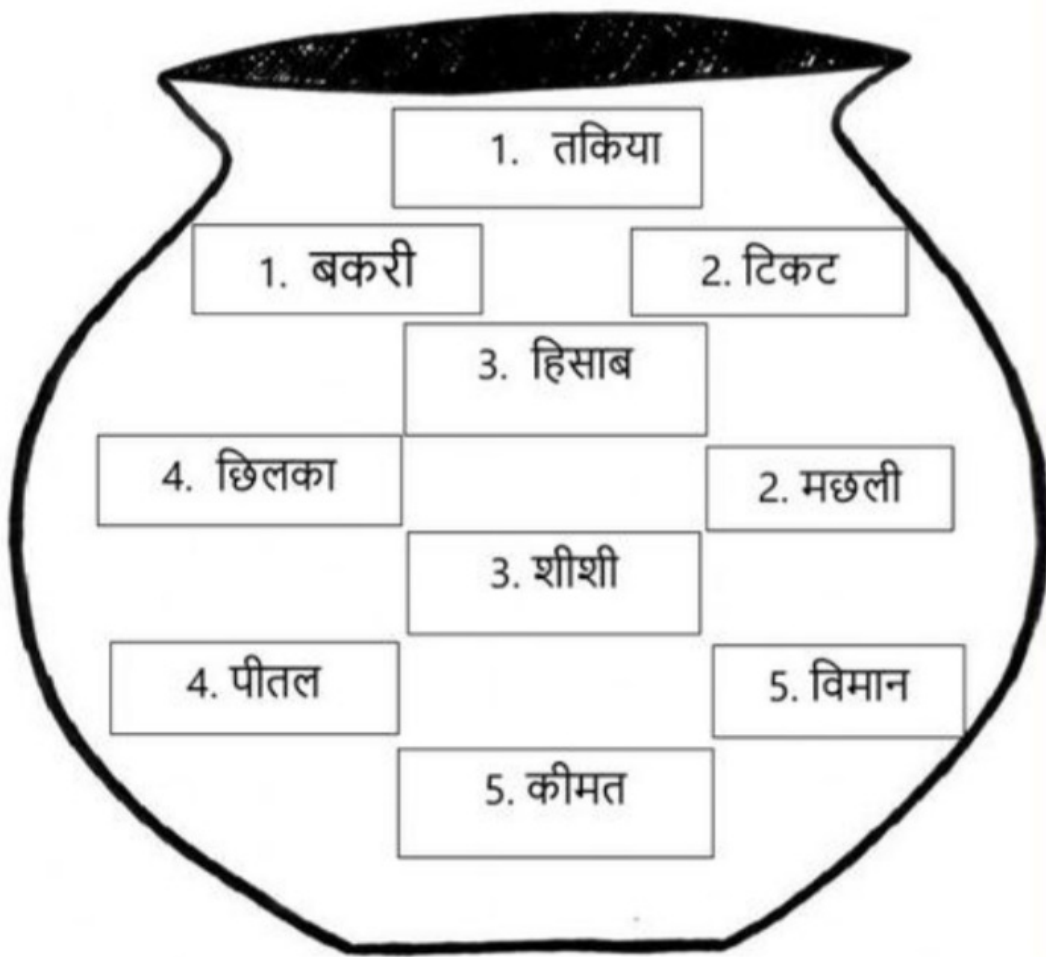
What are they doing???

Some crazy things are going on in this picture!!! Match up the sentence parts.

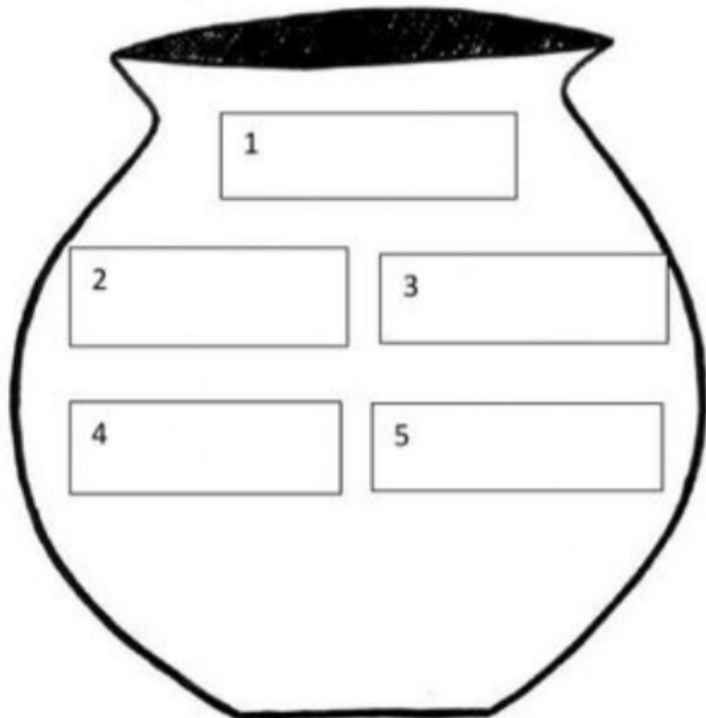
उचित संज्ञा से खाली स्थान भरिए -

तितली	पतंग	घर	दिल्ली	कोयल
शेर	आसमान	बच्चे	फल	मछली

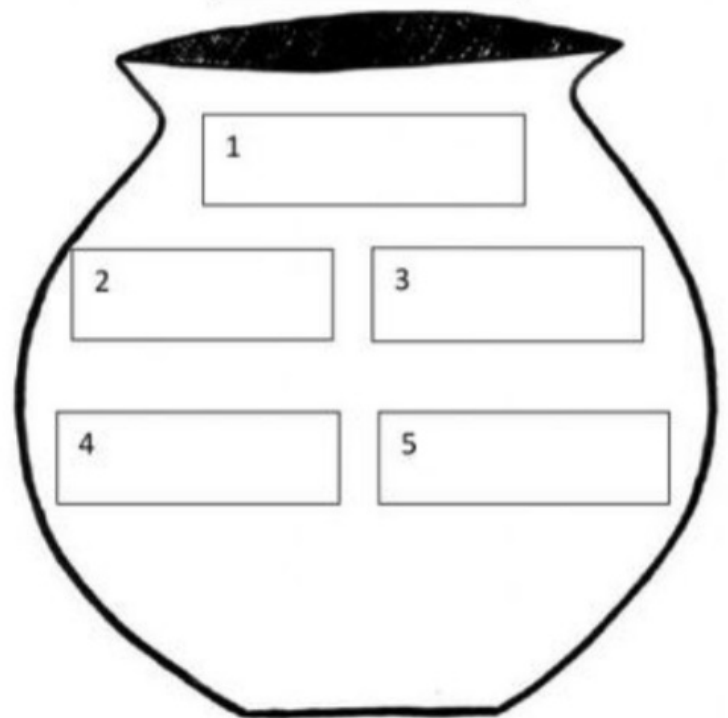
1. जंगल का राजा _____ है।
2. फूल पर _____ बैठी है।
3. मोहन का _____ है।
4. पिताजी बाज़ार से _____ लाए हैं।
5. बगीचे में _____ खेल रहे हैं।
6. रमेश _____ उड़ा रहा है।
7. _____ नीला है।
8. तालाब में _____ तैर रही है।
9. _____ गाना गा रही है।
10. लालकिला _____ में है।



ि इ



ी ई



चित्र और शब्दों को देखकर वाक्य पूरे कीजिए:



क) यह चित्र _____ का है।

ख) आसमान में _____ चमक रहा है।

ग) _____ घास चर रही है।

घ) आकाश में _____ उड़ रहे हैं।

ङ) चारों तरफ _____ उगी है।

च) पेड़ पर _____ लगे हुए हैं।

Count the number of dots on each domino, add and write the answer.

1)



$$\underline{\quad} + \underline{\quad} = \underline{\quad}$$

2)



$$\underline{\quad} + \underline{\quad} = \underline{\quad}$$

3)




$$\underline{\quad} + \underline{\quad} = \underline{\quad}$$

4)




$$\underline{\quad} + \underline{\quad} = \underline{\quad}$$

5)




$$\underline{\quad} + \underline{\quad} = \underline{\quad}$$

6)



$$\underline{\quad} + \underline{\quad} = \underline{\quad}$$

7)




$$\underline{\quad} + \underline{\quad} = \underline{\quad}$$

8)



$$\underline{\quad} + \underline{\quad} = \underline{\quad}$$

9)



$$\underline{\quad} + \underline{\quad} = \underline{\quad}$$

10)



$$\underline{\quad} + \underline{\quad} = \underline{\quad}$$

Apple Subtraction

Directions, Solve the subtraction problems by crossing out the numbers to be subtracted. Write the answers on the line



$5-2=$ _____



$4-3=$ _____



$5-4=$ _____



$3-2=$ _____



$4-2=$ _____



$3-3=$ _____



$$2+6=$$

$$3+6=$$

$$6+1=$$

$$3+4=$$

$$3+5=$$

5

$$4+5=$$

$$7+2=$$

$$2+5=$$

$$4+4=$$

$$3+3=$$

$$4+2=$$

COLOR CODE

9 - yellow

8 - red

7 - purple

6 - green

5 - orange



Multiply by 5 quiz

Circle the right answer.

$5 \times 1 =$

9

4

5

$5 \times 6 =$

24

18

30

$5 \times 3 =$

10

15

21

$5 \times 7 =$

25

35

42

$5 \times 2 =$

10

20

8

$5 \times 10 =$

50

45

40

$5 \times 12 =$

64

72

60

$5 \times 9 =$

45

40

35

$5 \times 5 =$

15

25

20

$5 \times 8 =$

35

40

45

$5 \times 11 =$

63

54

55

$5 \times 4 =$


20

15

24

Exercise.

1. Choose the correct answer.



Girl / Boy




Girl / Boy

2. Fill in the blanks.

- a. My name is
- b. I study in Grade
- c. I am Years old.
- d. The name of my school is
- e. I am a (boy/girl).

3. Colour the pictures.



Boy

Girl

Label the different parts of body by using the words given below through drag and drop activity

Head

Mouth

Chest

Fingers

Arm

Foot

Nose

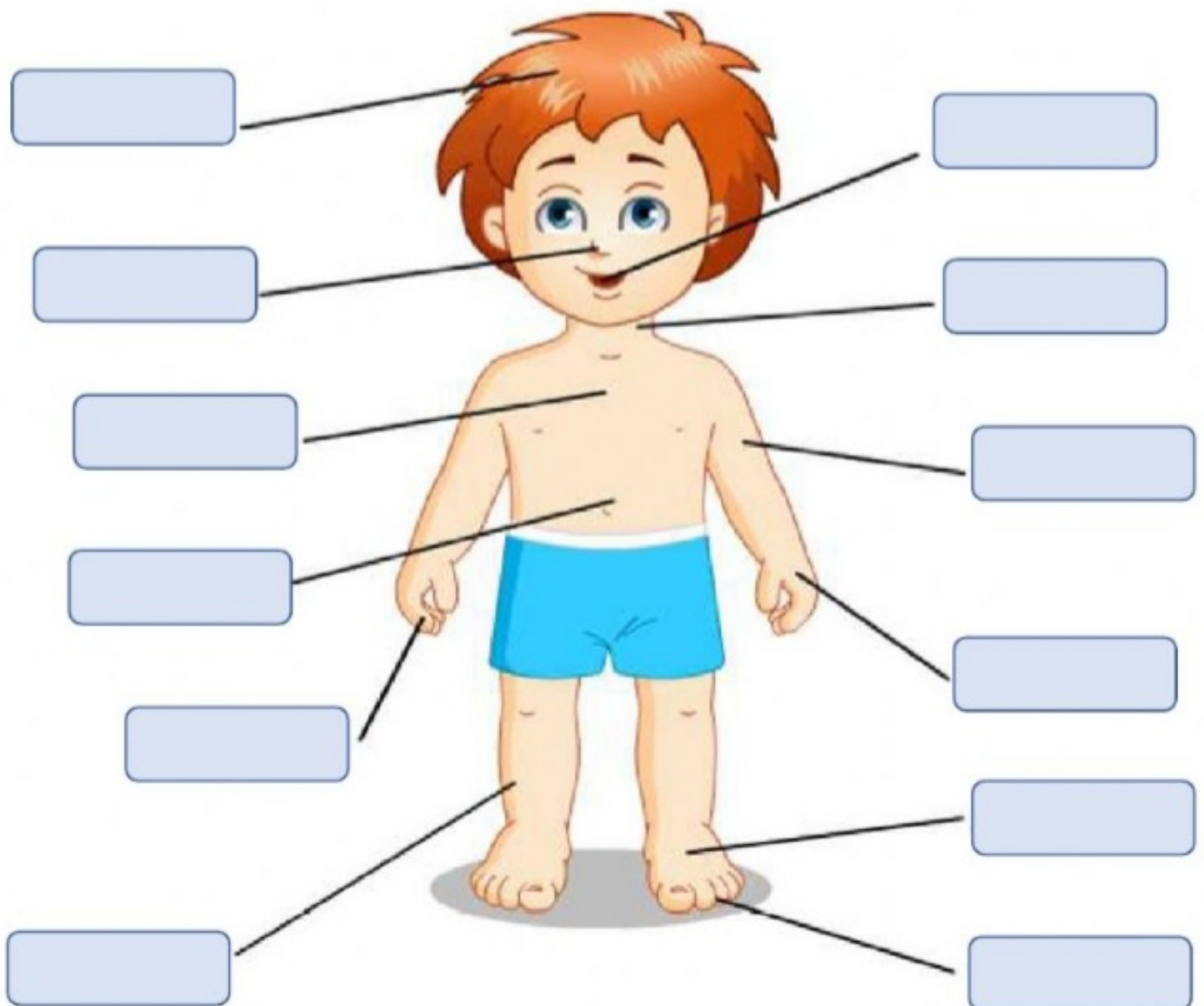
Neck

Stomach

Leg

Hand

Toes





BODY PARTS

Tick the correct option.



This is my
eye
ear
nose



This is my
foot
arm
leg



This is my
ear
head
nose



This is my
toe
finger
knee



This is my
hair
mouth
hand



This is my
shoulder
toe
finger



This is my
ear
hand
eye



Q1

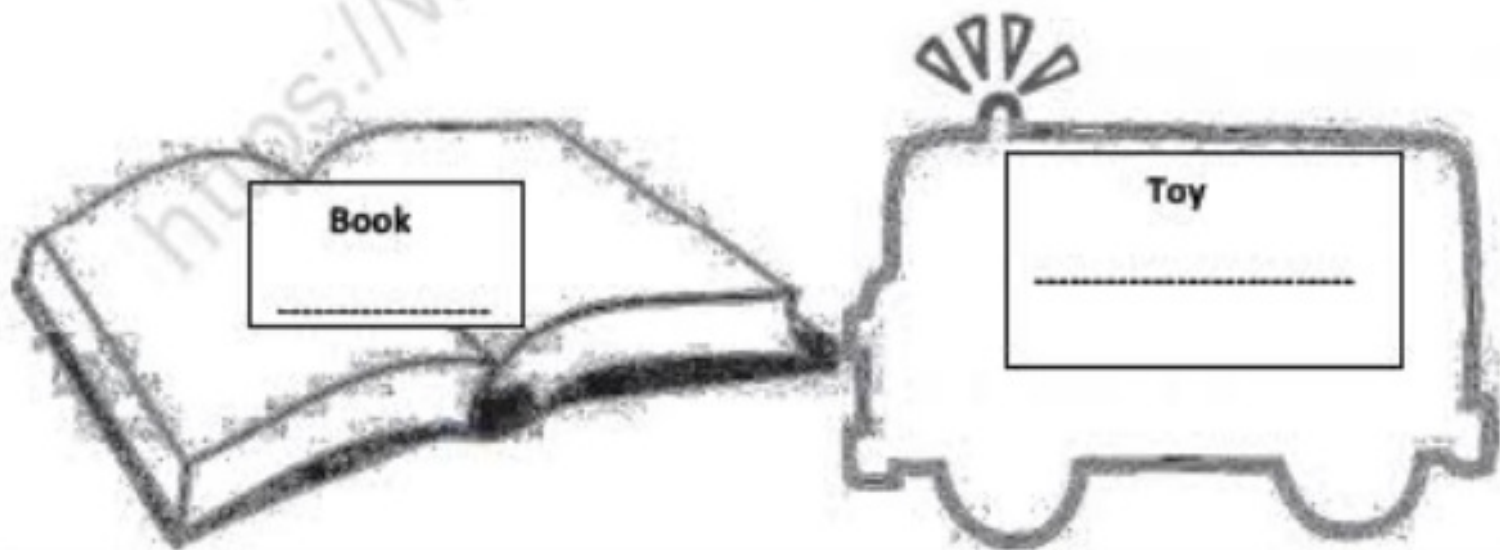
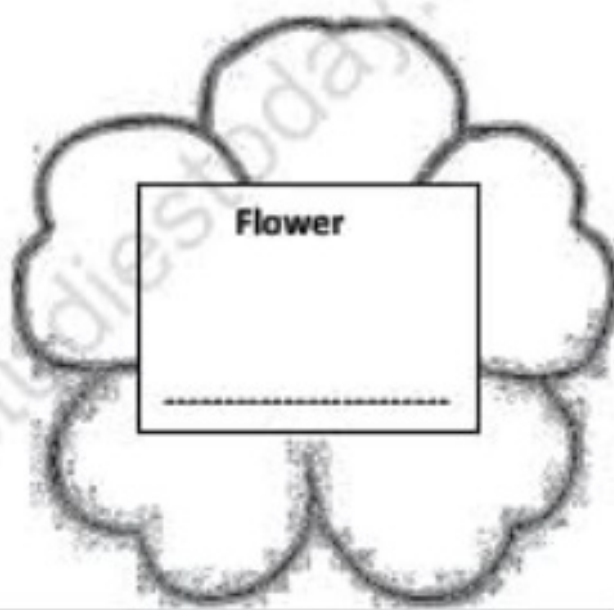

Fill in the blanks :-

1. My name is _____ .
2. I am _____ years old.
3. I am in class _____ .
4. The name of my teacher is _____ .
5. The name of my school is _____ .

Draw as
many
candles on
this cake as
your age.



My Favourite



Q. 2- Write down your FAVOURITE things -

1. Favourite CARTOON _____

2. Favourite COLOUR _____

3. Favourite GAME _____

4. Favourite TOY _____

Animals Help us

Animals help us in many ways. Some animals provide us with food and clothes. Some animals help to carry heavy loads and some are used as transport to get from one place to another.

Match the animals with their use.

1



Honeybee

2



Silkworm

3



Sheep

4



Cow

5



Donkey

6



Bullock

7



Hen

8



Snake

a



Milk

b



Eggs

c



Load

d



Wool

e



Leather

f



Honey

g



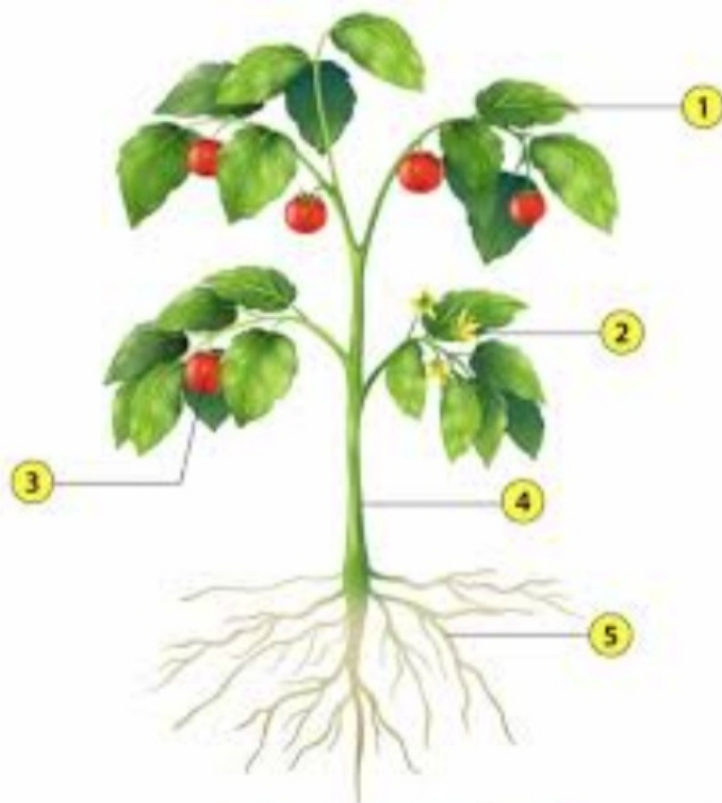
Silk

h



Cart

Observe the picture given below and identify the parts labelled.



Q1) I am 1, who am I?

- a) Root
- b) Stem
- c) Leaf
- d) Fruit

Q2) I am 2, find me?

- a) Flower
- b) Stem
- c) Leaf
- d) Fruit

Q3) I am 3, tell my name?

- a) Root
- b) Flower
- c) Leaf