

St. Mary's School, Dwarka
Practice Worksheet (April-May)

Class: III
Subject: English

Topic: L-1, A Day with Panda
L-2, A Carpet of Crackers

Name: _____ Sec: _____ Date: _____ Roll No: _____

1. Read the passage and answer the following questions.

Once upon a time, there lived a giant in a huge castle. He never shared his things with others. There was a huge garden in his castle. It was a lovely garden with soft green grass and beautiful flowers. There were trees that bore rich fruits. The birds sat on the trees and sang sweetly.

The giant had a friend who invited him to his house. The giant accepted the invitation and went to stay with him for few months. Since the giant was away, many children used to go and play in the giant's garden.

One day, when the giant came back, he saw the children playing in his garden and he was annoyed.

a) Where did the giant live?

- i) in a castle ii) in a house iii) in a hut iv) in a hostel

b) Who invited the giant?

- i) his neighbour ii) his aunt iii) his father iv) his friend

c) Who were playing in the giant's garden when he came back?

- i) birds ii) children iii) elves iv) animals

d) Write the opposite of the given word.

i) hard- _____

e) Make a sentence with the given word.

i) garden- _____

2. Answer the following questions.

a) What is the weight and height of a male giant panda?

b) Where did Rachit live?

c) "There is so much noise in your city, uncle." Who said this and why?

3. Fill in the blanks with the correct words given in the brackets.

a) The _____ of wolves was hungry. (bunch/ pack)

b) The _____ of soldiers marched over the hill. (crowd/ army)

- c) He bought a _____ of flowers for his mother. (flock/ bouquet)
d) Our _____ of basketball players went to the stadium. (team/ class)

4. Choose the correct sentence.

- a) An example of a request.
i) She is a singer. ii) Please close the door.
iii) Children, sit down. iv) Oh! This is a beautiful painting.
- b) An example of a question.
i) What is your name? ii) My name is Varun.
iii) Bring a glass of water for me. iv) Wow! This is an amazing book.

5. Underline the common nouns and circle the proper nouns.

- a) Alex is an intelligent boy.
b) It is the month of May.


6. Rearrange the words to form meaningful sentences and end the sentences with full stop or question mark.

- a) high / jump / very / he / can

- b) cake / my /baked / a / yesterday / mother

7. Write a paragraph to describe the given picture.

mat beach swimming sand-castle sea-shells



St. Mary's School, Dwarka
Practice Worksheet (April-May)
Class: III
Subject: EVS

Topic: L-1, My Wonderful family

L-2, Our Body

Name: _____ **Sec:** _____ **Date:** _____ **Roll No:** _____

1. Choose the correct option out of the following options.

- a) _____ changes the picture into a message that the brain can read.
i) heart ii) retina iii) tongue iv) eye
- b) The part of the eye through which light enters the eye is called _____.
i) pupil ii) nerve iii) lens iv) retina
- c) We call our mother's sister as our _____.
i) sister ii) mother iii) aunt iv) grandmother
- d) A family where _____, mother and their children live together is called a nuclear family.
i) father ii) cousin iii) uncle iv) aunt
- e) We should always _____ our eyes early in the morning.
i) wash ii) rub iii) scratch iv) touch

2. Fill in the blanks with the words given in the help box.

holidays - swallow - picnics - family - check-up

- a) We learn to help each other in a _____
- b) We must go for an eye _____ regularly.
- c) Tongue helps us to _____.
- d) Family _____ and _____ help us to spend time with our family members.

3. Define the following.

- a) Paternal relatives – _____

- b) Taste buds – _____

4. Read the given case study and answer the questions that follow.

Chandni and her younger brother goes to Mumbai to visit the house of their father's brother during the holidays. He lives there with his parents, his wife Kamla, and two children.

- a) Which type of family is it?

- b) How do different members in a family help at home?

c) What do the children learn from a family?

5. Answer the following questions.

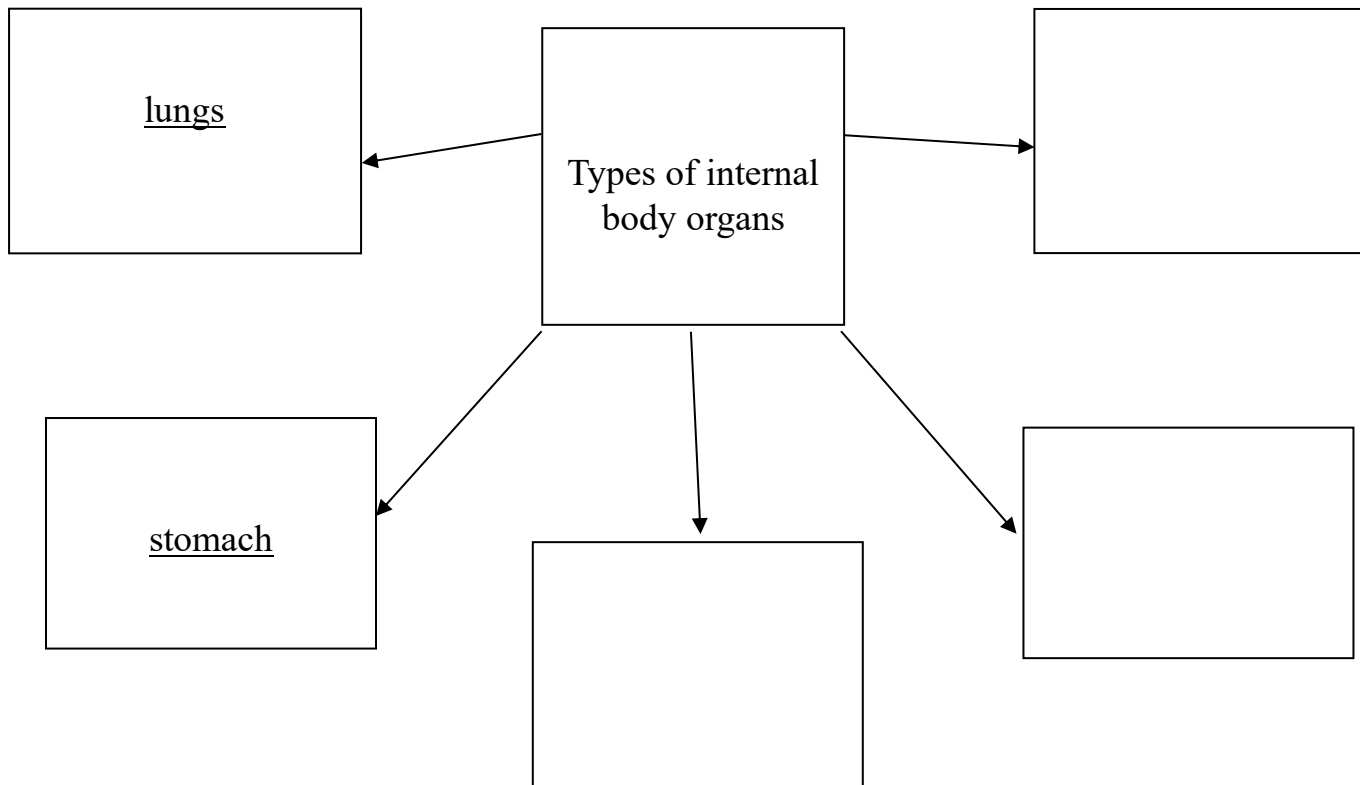
a) What are identical twins?

b) What are olfactory nerve cells?

6. Give reason for the following statement.

We breathe even when we are sleeping.

7. Complete the given G.O.



St. Mary's School, Dwarka
Practice Worksheet (April-May)
Class: III
Subject: Mathematics

Topic: L-1, Numbers Up to 10,000

L-2, Addition and Subtraction

Name: _____ **Sec:** _____ **Date:** _____ **Roll No.** _____

1. Choose the correct option.

a) The smallest 4-digit number is _____.

i) 1001

ii) 9999

iii) 1000

iv) 8888

b) The sum of two numbers is 24. If one number is 13, the other number must be _____.

i) 14

ii) 11

iii) 10

iv) 15

c) In 9879, the digit 8 stands for _____

i) 80

ii) 800

iii) 8000

iv) 8

d) What number is 100 less than 2540?

i) 2440

ii) 2530

iii) 2430

iv) 1540

e) In 4367, the digit 7 is in the _____ place.

i) thousands

ii) hundreds

iii) ones

iv) tens

2. Solve the following.

a)

	Th	H	T	O
	4	3	2	0
+	3	8	4	1
	<hr/>			
	<hr/>			

b)

	Th	H	T	O
	8	5	4	5
-	4	7	2	1
	<hr/>			
	<hr/>			

3. Arrange the numbers in order. Begin with the greatest.

a) 7432, 7543, 7754,

b) 1087, 2010, 1999

4. Fill in the blanks.

a) The sum of 11 and 7 is _____.

b) The difference between 31 and 10 is _____.

c) The number 9874 is _____ than 9784.

d) 10 less than 3429 is _____.

5. Write the number names for the following.

a) 5678 – _____

b) 3049- _____

c) 9908- _____

6. Complete the number patterns.

a) 7875, _____, 7877, _____, 7879

b) 5420, 5520, _____, _____, 5820

c) 3674, _____, 5674, 6674, _____

d) 1025, 1035, _____, 1055, 1065

7. Lina, Ram and Riya took part in the art competition. They scored 1430, 1532 and 1449 points respectively.

i) Who scored the highest points?

ii) Find the difference between highest and the lowest scores.

--

iii) How much did they score together?

--

St. Mary's School, Dwarka
Practice Worksheet (April-May)
Class: III
Subject: Hindi

विषय : पाठ-2, मैं क्या बनूँ

पाठ-3, सबसे लंबा जानवर

Name: _____ Sec: _____ Date: _____ Roll No.: _____

1. दिए गए गद्यांश को पढ़कर प्रश्नों के सही उत्तर चुनिए—

अपना भारत देश एक कृषिप्रधान देश है। जहाँ किसान अपने देश के लिए एक महत्वपूर्ण भूमिका निभाता है। इसलिए किसान को देश का एक सैनिक माना गया है। वह खेती करके खेत में अनाज पैदा करता है। कुछ किसान सब्जी भी उगाते हैं। उनके बच्चे गाँव की पाठशाला में पढ़ते हैं। वे गाय, बैल, भैंस और बकरी पालते हैं। किसान सुबह जल्दी उठता है। वह अपने पालतू जानवरों को चारा देता है। फिर हल-बैल लेकर अपने खेत में पहुँच जाता है। कुछ किसान ट्रैक्टर का भी इस्तेमाल करते हैं। वह सुबह से लेकर शाम तक खेत में काम करता है। किसान बहुत मेहनती होता है। उसके कारण हमें अन्न मिलता है। कोई भी बिना अन्न के जीवित नहीं रह सकता है। इस प्रकार किसान हमारा अन्नदाता है। वह कठिन परिश्रम, सादगी और सत्यता का उदाहरण है।

क) हम सब के लिए अनाज कौन पैदा करता है?

- | | |
|-------------|-----------|
| i) दुकानदार | ii) किसान |
| iii) सरकार | iv) सैनिक |

ख) किसान हमारा कौन है?

- | | |
|---------------|-----------|
| i) रक्षक | ii) सहायक |
| iii) अन्नदाता | iv) आलसी |

ग) किसान कब उठता है?

- | | |
|----------------|----------------|
| i) देर से | ii) शाम को |
| iii) दोपहर में | iv) सुबह जल्दी |

घ) भारत एक कैसा देश है?

- | | |
|-----------------|-----------|
| i) महान | ii) बड़ा |
| iii) कृषिप्रधान | iv) अनपढ़ |

ङ) मेहनती का विलोम शब्द है—

- | | |
|---------------|-----------|
| i) अमेहनती | ii) आलसी |
| iii) परिश्रमी | iv) कर्मठ |

2. नीचे दिए गए प्रश्नों के उत्तर लिखिए—

क) स्कूल की छुट्टी के समय पलक को क्या मिला?

ख) पलक क्यों परेशान हो गई?

ग) “जिराफ लगभग बीस साल तक जीवित रह सकता है। इसके सिर पर दो अनोखे सींग होते हैं।”

i) जिराफ कितने साल तक जीवित रह सकता है?

ii) इसके सिर पर कितने सींग होते हैं?

3. नीचे दिए गए वाक्यों में संज्ञा शब्दों को रेखांकित कीजिए—

क) आकाश में तारे चमक रहे हैं।

ख) बच्चे लालकिला देखने गए।

ग) पक्षी आकाश में उड़ रहे हैं।

4. वर्णों को जोड़कर शब्द बनाइए—

क) त् + आ + र् + आ = _____

ख) म् + इ + त् + आ + ई = _____

ग) म् + ऐ + त् + आ + न् + अ = _____

5. नीचे दिए वर्णों को सही क्रम में रखकर शब्द बनाइए—

क) लयको - _____ ख) ड़िकम - _____ ग) जूरख - _____

6. रिक्त स्थानों को पूरा कीजिए—

- क) _____ केवल मनुष्य ही बोलते हैं। (लिपि/भाषा)
- ख) _____ के बिना भाषा का शुद्ध ज्ञान नहीं हो सकता है। (व्याकरण/शब्दों)
- ग) _____ बोलकर अपने विचार प्रकट करते हैं। (जानवर/मनुष्य)

7. नीचे दिए गए शब्दों की सहायता से चित्र का वर्णन कीजिए—



गाँव, औरत, चूल्हा, लकड़ियाँ, खेल

St. Mary's School Dwarka
Practice Worksheet (April-May)
Class: III
Subject: Computer Science

Topic: Lesson-1: Computer and its components

Lesson-3: Paint 3D window (till page 30)

Name:_____ **Section:** _____ **Roll No:** _____ **Date:**_____

1) Tick the correct answers.

a) The computer accepts data in the form of _____.

i) output

ii) storage

iii) input

b) Physical devices attached to the computer are called _____.

i) hardware

ii) software

iii) system unit

c) The updated version of the Paint program _____.

i) Paint 2D

ii) Paint 3D

iii) Paint 1D

d) The _____ area shows all the tools of selected options.

i) canvas

ii) panel

iii) effects

e) Computers can do a lot of work again and again at the same speed without getting bored or tired. This is called as _____.

i) versatility

ii) diligence

iii) accuracy.

f) _____ option is used to add 3D objects

i) Brushes

ii) Effects

iii) 3D library.

2) Write T for true statements and F for false statements.

a) Windows is an open source software. []

b) A computer never make mistakes. []

c) The CPU is the heart of a computer. []

d) Rotation tools are used to see the 3D effect. []


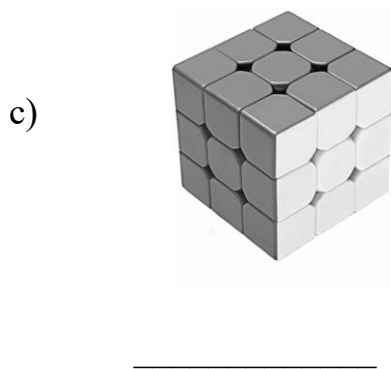
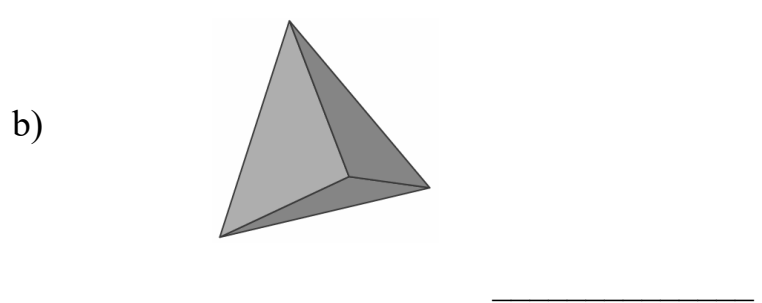

e) 3D shapes had two dimensions, length and height. []

f) 2D shapes are also known as flat shapes. []

g) Paint 3D was introduced in Windows 10 . []

h) In 2D and 3D shapes, D specifies 'Dimensions'. []

3) Identify the shapes as 2D and 3D shapes and write in the space given below.



4) Fill in the blanks with the correct words from the brackets.

a) _____ is a collection of raw, unorganized facts. (Data/ Information)

b) Computer works on the _____ cycle. (IPO/IOP)

c) _____ is a plastic or metal case that contains the main components of a computer. (System Box/System Unit)

d) Microsoft _____ helps you to create text documents with ease. (Excel/ Word)

e) _____ option is used for selecting a Filter color or lightning source position. (Canvas/ Effects)

f) Paint 3D is a drawing program developed by _____. (Microsoft/ Google)

g) _____ allows us to save our work for future use. (hardware/software)

h) _____ acts as a bridge between the user and the computer system.
(Application Software/ Operating System)

5) Write the name of any two.

a) Input Devices: _____, _____

b) Output Devices: _____, _____

c) Storage Devices: _____, _____

6) Write the full forms of the following:

a) IPO : _____

b) CPU: _____

c) OS: _____

7) Write the name of the following Operating System.

a)  _____

b)  _____

c)  _____

8) Identify and write the name of the following icons of paint 3D.


a)



b)



c)



d)



Project

9) Practical Work

Follow the instructions given below:

- a) Create a Greeting Card using all the tools of Paint 3D.
- b) Save the file with your name_classwithsection. (For eg:- **rohan_3a**)
- c) Upload the file in your respective class teams.

Given below are the steps to upload files on Microsoft Teams:-

Step 1: Open web browser .

Step 2: Type office.teams address in the address bar.

Step 3: Sign in with your Microsoft Id and password.

Step 4: Choose your respective class team.

Step 5: Go to assignment option.

Step 6: Attach your files in the relative assignment folder.

Step 7: Click on Hand In/ Turn In optio

