

St. Mary's School, Dwarka
Practice Worksheet (April - May)
Class: IV
Subject: English

Topic: L-1, The Raindrops
L-2, Elephant Feast

Name: _____ **Section:** _____ **Date:** _____ **Roll no.:** _____

Section - A

1. Read the following passage and answer the questions that follow.

Birds fly with the help of their wings. There are more than 18,000 species of birds on the planet but many birds extinct due to hunting, poaching and disturbed ecological balance. They belong to a group of vertebrates with wings and toothless wings. **(Para 1)**

Birds migrate from one place to other in search of food and shelter. These birds are known as migratory birds. Certain species of birds such as hens and chickens are domesticated by human beings for eggs, meat and feathers. The average lifespan of a bird is between 2 to 5 years but certain species of birds such as Albatross have been known to survive for more than 42 years. Birds can be omnivorous, carnivorous or herbivorous depending on their species and the geographical conditions that they are present in.

(Para 2)

Birds are not just confined to air space but are also found in water which are known as sea birds and water birds. Birds have been friends to human civilization for centuries and have helped us in many ways. Just like the human beings pass their knowledge from one generation to another, birds also exhibit the same tendency of passing knowledge from one generation to another. Ravens are one of the most intelligent birds on the planet and are found to mimic human speech and sound. Eagles are called the king of birds probably because of their predatory behaviour. Due to air and land pollution, some species of birds are getting extinct at an alarming rate. Climate change and global warming also has made it difficult for birds to inhabit themselves to just one place, thereby affecting the ecosystem and the food chain.

(Para 3)

a) Choose the correct reason for bird extinction.

- i) hunting ii) agriculture iii) rain iv) floods

b) Why do birds migrate?

- i) in search of wild animals ii) in search of domesticated animals iii) in search of food and shelter
iv) in search of clean air

c) What is the average life span of a bird?

- i) 1 to 6 years ii) 2 to 5 years iii) 10 to 12 years iv) 7 to 8 years

d) Why are eagles called the king of birds?

- i) because of their predatory behaviour ii) because of their wings iii) because of their talons
iv) because of their beak

Section - B

2. a) Write the correct synonyms of the word given in the bracket and complete the sentences.

Rihanna is a _____ girl (wealthy) and she _____ (replied) very softly when asked

about her goal in life. The teacher was _____ (joyful) to know that she wanted to become a doctor. The teacher told her that whatever she does, she needs to be disciplined and _____ (fulfil) every task with zeal and enthusiasm.

b) Make a sentence using the given word.

extinct – _____

Section - C

3. Read the given line and answer the questions that follow.

a) 'Well, if you are really going, I'll come too!'

i) Who said this line to whom?

ii) Who followed them after this?

b) Why did Farmer Seth feel sad looking at his field?

c) What were the wild elephants doing in the rice field?

4. Read the following sentences and state its type.

a) Wow! That looks amazing. _____

b) Please take out your books. _____

c) The moon looks beautiful at night. _____

d) Can we watch a movie tonight? _____

5. Read the paragraph and write the nouns in the correct column.

Dev is a young shepherd who lives in Darjeeling. He works for Mr. Singh. Every morning, he goes with a bunch of keys to open the gates of the shed where the sheep are locked. Then he drives the flock into the mountains. He is accompanied by his dog named Bunny. The dog helps him to control the sheep. Bunny also guards Dev and the sheep with honesty.

Common Noun	Proper Noun	Collective Noun

6. Look at the given picture and write a paragraph in about 50 words using the hints given in the box.

God's gift	-	happy life	-	physical and mental state	-	cleanliness
exercise	-	food	-	calmly	-	confident
						energetic

This image shows a blank sheet of white paper with horizontal ruling lines. The lines are evenly spaced and run across the width of the page. There are no margins, text, or other markings on the paper.

St. Mary's School, Dwarka
Practice Worksheet (April-May)
Class: IV
Subject: Hindi

विषय: पाठ-2, सबसे मीठी सबसे कड़वी

पाठ-3, ऐसे थे वे

Name: _____ Sec: _____ Roll No. _____ Date: _____

1. नीचे दिए गए अपठित गद्यांश के आधार पर पूछे गए बहुवैकल्पिक प्रश्न के सही

उत्तर चुनिए-

गांधीजी हमारे भारत देश के राष्ट्रपिता कहलाते हैं। एक बार गांधीजी से मिलने चीन से एक आदमी आया। उसने उन्हें चीनी मिट्टी का एक खिलौना भेंट में दिया। गांधीजी को खिलौना बहुत पसंद आया। वो हमेशा उसे अपने साथ रखते और उसकी देखभाल करते।

जहाँ भी जाते, उस खिलौने को साथ ले जाते। काम करते समय भी उस खिलौने को अपने सामने रखते। खिलौना देखने में बहुत ही साधारण था। वह वास्तव में तीन बंदर थे।

एक बंदर ने अपना मुँह, दूसरे ने अपनी आँखें तथा तीसरे ने अपने कान हाथ से बंद कर रखे थे। आदमी ने बापू से बोला आप इस साधारण से खिलौने को अपने साथ क्यों रखते हैं? बापू ने समझाया कि जिस बंदर ने अपना मुँह बंद कर रखा है वह मुझे सिखाता है कि झूठ मत बोलो, किसी को बुरा मत कहो। दूसरा बंदर मुझे सिखाता है कि बुरी चीज़

या किसी की बुराई मत देखो। तीसरा बंदर जिसके कान बंद हैं वह मुझे सिखाता है कि बुराई मत सुनो, सदा अच्छी बातें सुनो।

क) एक बार गांधीजी से मिलने _____ से एक आदमी आया।

i) जापान ii) चीन iii) दुबाई iv) कश्मीर

ख) उसने उन्हें _____ का एक खिलौना भेंट में दिया।

i) मिट्टी ii) चीनी iii) चीनी मिट्टी iv) कच्ची मिट्टी

ग) दूसरा बंदर क्या सिखाता है?

i) झूठ मत बोलो, किसी को बुरा मत कहो।

ii) बुरी चीज़ या किसी की बुराई मत देखो।

iii) बुराई मत सुनो, सदा अच्छी बातें सुनो।

iv) झूठ मत देखो, किसी को दिखाओ मत।

घ) गांधीजी हमारे भारत देश के _____ कहलाते हैं।

i) प्रधानमंत्री ii) राष्ट्रीयपति iii) राष्ट्रपिता iv) माननीय वित्त मंत्री

2. दिए गए वर्णों को मिलाकर बने सही शब्द को चुनिए तथा रिक्त स्थान में

भरिए-

क) स + ऐ + न् + इ + क् + अ = _____

i) सानिक ii) सेनीक iii) सानिक iv) सैनिक

ख) द् + उ + न् + इ + य् + आ = _____

i) दूनिया ii) दुनिया iii) दोनिया iv) दौनिया

ग) 'ज्ञ' संयुक्त व्यंजन में ये दो व्यंजन मिले हैं—

i) ग् + य ii) ग + य iii) ज् + य iv) ज् + ञ

घ) जातिवाचक संज्ञा शब्द पर सही का निशान लगाएँ—

i) माली ii) खुशी iii) भलाई iv) नम्रता

3. रेखांकित किए गए संज्ञा शब्दों के सही भेद को चुनिए—

क) साक्षी एक मिलनसार लड़की है।

i) जातिवाचक संज्ञा ii) व्यक्तिवाचक संज्ञा iii) भाववाचक संज्ञा

ख) भारत में गरीबी बढ़ रही है।

i) जातिवाचक संज्ञा ii) व्यक्तिवाचक संज्ञा iii) भाववाचक संज्ञा

4. रेखांकित किए गए शब्दों के लिंग बदलिए और वाक्य दोबारा लिखिए—

क) आज शिक्षक ने हिंदी का पाठ पढ़ाया।

ख) गाय हरी घास खाती है।

5. कोष्ठक में दिए गए शब्दों के विलोम शब्द से खाली स्थान भरिए—

क) हमें खाना _____ समय पर खाना चाहिए। (अनुचित)

ख) भगत सिंह ने देश की _____ के लिए लड़ाई करी। (गुलामी)

ग) रमन मेरा _____ है। (शत्रु)

6. नीचे दिए गए प्रश्नों के उत्तर लिखिए—

क) राजा कृष्णदेव राय के दरबार में कौन आया?

ख) महाराज किसकी बात सुनकर गुस्से में आ गए?

ग) निम्नलिखित वाक्य किसने, किससे कहा?

i) “मैं अपना जवाब जल्दी ही दूँगा।”

7. प्रश्नों के उत्तर विस्तार से दीजिए-

क) राजा को घग्घरनाथ की किस बात पर क्रोध आया और क्यों?

ख) बाल गंगाधर तिलक की सच्चाई का उल्लेख कीजिए-

6. नीचे दिए गए शब्दों की सहायता से दिए गए चित्र का वर्णन कीजिए-



चिड़िया घर दृश्य हरे-भरे पेड़ जंगली जानवर पिंजड़े अध्यापिका शेर जिराफ़
भालू मोर जानकारी और सुरक्षा के नियम खाना देना मना राष्ट्रीय पक्षी
बच्चे खुश

St. Mary's School, Dwarka
Practice Worksheet (April- May)

Class: IV

Subject: Mathematics

Topic: Chapter-1, Whole Numbers

Chapter-2, Multiplication and Division of Whole Numbers

Name: _____ Sec: _____ Date: _____ Roll No. _____

1. Choose the correct option:

a) What is 1000 less than 20,056?

- i) 10,056 ii) 18,056 iii) 19,056 iv) 20,056

b) What is the round number for 7806 to the nearest ten?

- i) 7805 ii) 7807 iii) 7800 iv) 7810

c) 85 is divisible by which of the following number?

- i) 2 ii) 3 iii) 5 iv) 10

d) What will be the greatest possible number after rearranging the digits in the number 62, 804? (using each number only once)

- i) 86, 420 ii) 86, 240 iii) 84, 620 iv) 84, 260

2. Read the table and fill in the blanks.

T Th	Th	H	T	O
9	8	2	6	5

In 98,265,

- i) the digit 8 is in the _____ place and its value is _____.
- ii) the digit 2 is in the _____ place and its value is _____.
- iii) the digit _____ is in the tens place and digit 5 is in the _____ place.

3. Arrange the numbers in order. Begin with the smallest.

86, 972, 86, 792, 86, 296, 86,564

4. Write the following numbers in expanded form.

a) 25, 321 = _____

b) 69, 804 = _____

5. Round off each number to the nearest hundred to estimate the value of the following.

a) 41, 287 + 324 ~ _____ + _____ = _____

b) 75, 604 – 278 ~ _____ – _____ = _____

6. Solve the following.

a)

	T	Th	Th	H	T	O
	4	6	8	0	9	
+	4	7	3	7	4	
<hr/>						
<hr/>						

b)

	T	Th	Th	H	T	O
	9	8	7	0	5	
-	8	0	7	2	8	
<hr/>						
<hr/>						


c)

	5	0	8	3
x				7
<hr/>				
<hr/>				

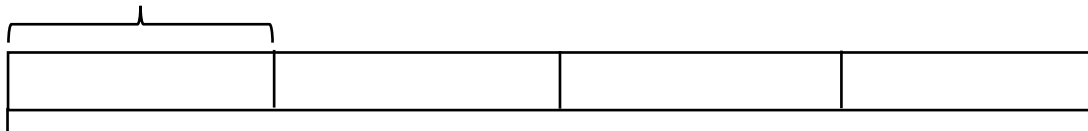
d)

$6\sqrt{8640}$

7. Factory A has 64, 625 workers. After the shutdown of Factory B, 24, 985 workers of Factory B joined Factory A. How many workers are there in Factory A now?



8. A bookseller sold 1359 books last month. He sold 4 times as many books this month as last month. How many books did he sell this month?



?

No. of books sold in last month = _____

No. of books sold this month = _____

St. Mary's School, Dwarka
Practice Worksheet (April–May)
Class: IV
Subject: EVS

Topic: L-5, Our Animal Friends
L-6, Physical Features of Animals

Name: _____ Sec: _____ Date: _____ Roll No: _____

1. Tick the correct option.

a) What is a group of termites called?

- i) colony ii) school iii) pride iv) shoal

b) Which of these animals have internal ears?

- i) horse ii) elephant iii) lizards iv) lions

c) Which animal rolls itself into a prickly ball if humans try to touch it?

- i) snail ii) porcupine iii) squirrel iv) tortoise

d) What is the name of the government organization that works for the protection of wildlife?

- i) SPCA ii) ISSA iii) POSCO iv) ISRO

e) Which of these animals is an invertebrate?

- i) frogs ii) lizards iii) snakes iv) jellyfish

2. Read the given case study and answer the questions that follow.

Dinosaurs first appeared on Earth about 215 million years ago. They were the most important land animals for more than 150 million years. By 65 million years ago, however, the dinosaurs had died out. Many scientists believe that a large asteroid, or rock from space, caused this mass extinction. When the asteroid hit Earth, the impact caused drastic changes. Thick dust and other materials blocked the sun. Temperatures dropped, and plants could not grow. The dinosaurs could not survive the cold temperatures and lack of food. But early species of birds and mammals did survive.

a) When did the dinosaurs first appear on Earth?

b) What is the cause of the extinction of the dinosaurs?

c) Describe in your own words how did the dinosaurs get extinct?

3. Answer the following questions in one sentence.

a) Which bird feeds on ticks that infest the skin of rhinos?

b) What are vertebrates? Give examples.

4. Answer the following questions in 15 - 20 words.

a) Why the government has made special organizations like PETA.

b) Why the ear holes of the birds are covered with tiny feathers?

5. Answer the following questions briefly.

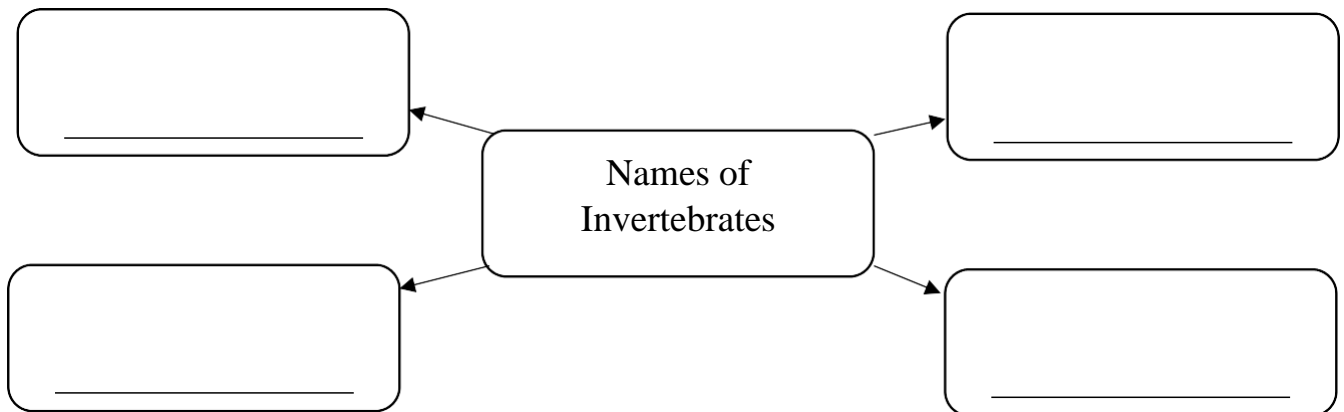
a) Why do animals live in groups?

b) How do the large ears of an elephant help him?

6. Give a reason for the following statement.

- a) Polar Bears have thick fur on their bodies whereas camels have very less hair on their bodies.

- b) Complete the G.O.



St. Mary's School, Dwarka
Practice Worksheet (April-May)
Class: IV
Subject: Computer Science

L-1, Computer - Inside the System Unit

L-3, Word- Editing and formatting (till finding and replacing text)

Name:_____Sec:_____Date:_____Roll No:_____

1. Name the following.

- a) This port connects the monitor to the computer using the cable. _____
- b) It is also known as System board or Main board. _____
- c) It is a new type of storage device that performs the same basic functions as a hard drive but in a very fast speed. _____
- d) These are holes or slots into which we plug in computer devices. _____
- e) This command is used to search for a particular word. _____

2. Write 'T' for True and 'F' for False for the following statement.

- a) Delete key is used to remove the text that is no longer needed. _____
- b) A group of 4 bits is known as nibble. _____
- c) We cannot reverse the action while working in a document. _____
- d) The hard disk is a large circuit board inside the system unit. _____
- e) The speed of CPU is measured in megahertz or gigahertz. _____
- f) RAM stores the data permanently. _____

3. Write the full form of the following abbreviations.

- a) CPU – _____
- b) RAM – _____
- c) ROM – _____

d) SMPS – _____

e) SSD – _____

f) ALU – _____

4. Write the shortcut keys for the following operations.

a) To cut the text – _____

b) To copy the text – _____

c) To undo an action – _____


d) Spelling and Grammar check – _____

e) To use thesaurus option – _____

5. Complete the table given below.

a) 1 Byte	
b)	1024 Bytes
c) 1 Megabyte	
d)	1024 Megabytes

5. Write the name of the following devices.

a)  _____

b)  _____

c)



6. Define the following terms.

i) Thesaurus -

i) Motherboard -

7. Answer the following questions.

a) How are spelling and grammar mistakes identified in MS Word?

b) What is the use of SMPS?
