

**St. Mary's School, Dwarka**  
**Practice Worksheet**  
**Class: I**  
**Subject: Mathematics**

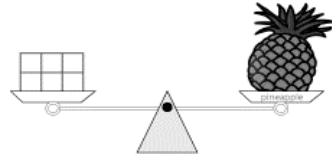
**Topic: Ch-10, Weight**

**Ch- 11, Comparing Numbers**

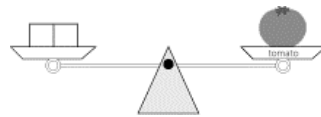
**Name: \_\_\_\_\_ Sec: \_\_\_\_\_ Date: \_\_\_\_\_ Roll No: \_\_\_\_\_**

**1. Fill in the blanks with the weight of each item in units.**

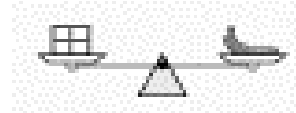
a) The weight of the pineapple is \_\_\_\_\_ units.



b) The weight of the tomato is \_\_\_\_\_ units.

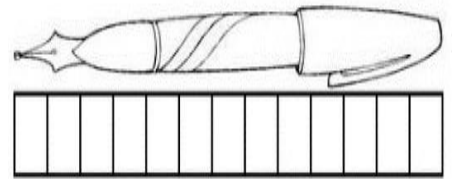


c) The weight of the banana is \_\_\_\_\_ units.

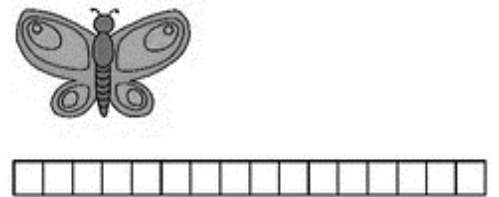


**2. Fill in the blanks by measuring the length.**

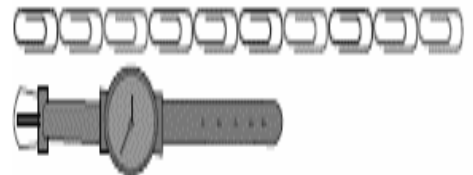
a) The length of the pen is about \_\_\_\_\_  
blocks.



b) The length of the butterfly is about  
\_\_\_\_\_ blocks.



c) The length of the watch is about \_\_\_\_\_  
paper clips.


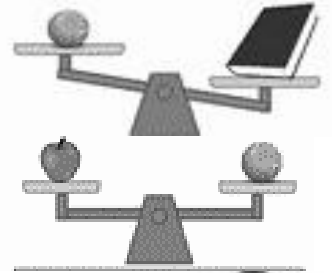


### 3. Fill in the blanks –

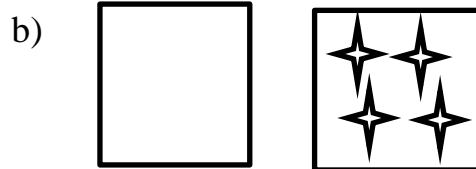

- a) What number is 1 less than 10? \_\_\_\_\_
- b) What number is 1 more than 5? \_\_\_\_\_
- c) What number is 1 less than 6? \_\_\_\_\_
- d) What number will you get if you add 2 and 10? \_\_\_\_\_

### 4. Fill in the blanks with as heavy as, lighter than, heavier than.

- a) The tennis ball is \_\_\_\_\_ the book.
- b) The apple is \_\_\_\_\_ the tennis ball.
- c) The boy is \_\_\_\_\_ the girl.
- d) The cherry is \_\_\_\_\_ the apple.



### 5. Colour the box which has less number of pictures.



### 6. Draw and colour.

- a) 4 more flowers



\_\_\_\_\_

- b) 3 more pencils



\_\_\_\_\_

