



**GREENWAY MODERN SCHOOL**  
**DILSHAD GARDEN**  
**HOLIDAY HOMEWORK (2023 – 24)**  
**CLASS III**

A summer calendar of endless holiday fun- a calendar of ideas to do each day during summer break.

Summer holidays are here again to give us respite from the scorching heat. We hope that our children will enjoy their vacation time as well as hone their skills. There are many ways in which you can support them in gaining knowledge and understanding as well as strengthen the parent child bond.

## ENGLISH


- \* Read your English Course book daily to develop reading competency .
- \* Write 15 pages of neat and tidy handwriting in a separate new notebook.
- \* Do the activity 'My Packing List'(mentioned on pg 19 of Course-book) on A-4 size sheet.  
Paste/draw relevant pictures to make it present able
- \* Revise all the work done in Course and Grammar, to prepare for Periodic Test

## हिंदी

1. गाँव और शहर का चित्र बनाकर उनके अच्छे और बुरे प्रभाव के बारे में दो-दो वाक्य लिखो । (A4 Sheet)



- 2 फूलों के कन्हीं पाँच उपयोगों की सूची चित्र सहित बनाइए । (A4 sheet)
- 3 संपूर्ण आवधिक परीक्षा (Periodic test - 1) का पाठ्यक्रम याद करो ।



- 4 'तेनालीराम' की कहानी पढ़िए और बताइए कि आपने उनसे क्या सीखा ?

पेड़ पर दिए गए शब्दों के नीचे उनके सही पर्यायवाची शब्दों को लगाएँ -



मेघ, जलधर

भू, धरती

वर्षा, बारिश

संसार, जगत

सुबह, प्रभात

चन्द्रमा, राकेश

सूर्य, रवि

माता, मैया

पेड़, तरु

सदन, आलय

चाह, इच्छा



## MATHS

\* Make a creative and innovative ABACUS with any waste material available at home.

\* Note down the numbers of any 5 Vehicles you can see around and mention their --

a) Number name

b) Expanded form

c) Ascending order








d) Descending order

e) Biggest Number

f) Smallest Number

(Do it in A4 sheet)

\* Learn Tables 2 To 9

Rounding to the Nearest Ten			
Round each number to the nearest ten.			
34 - _____	91 - _____		
86 - _____	25 - _____		
72 - _____	53 - _____		
<b>Star Numbers</b>			
 36	 46	 31	Which two star numbers round to 40? _____ and _____
 23	 27	 44	
			Which two star numbers round to 30? _____ and _____
		Write <b>True</b> or <b>False</b> for each statement.	
		27 rounds to 20. _____	
		8 rounds to 10. _____	
		94 rounds to 90. _____	

## EVS

# Compose a Poem or a Song on the topic :


‘ Against single use plastic’

# Make your own first aid box.

# Make a mask wore by tribal people using different shapes.








# Practice chapter 1,2,3,4 along with diagrams.



### BODY PARTS PICTURE DICTIONARY

Body Parts Write The Meanings Of The Given Pictures To The List. Then Find And Circle Them In The Puzzle Wordsearch.

D	Q	B	T	L	C	U	L	T	M	Z	D	Z	Z	Z	T	O	E			
B	K	W	H	R	K	N	E	F	T	O	N	G	U	E	P	K	K			
I	O	B	R	H	C	E	F	W	S	P	O	I	A	X	G	D	M	L		
U	Z	U	O	A	T	R	G	G	M	X	K	J	E	T	F	W	Q	G	F	
U	O	P	A	T	R	O	L	O	Q	E	O	L	T	A	W	N	H	S		
D	R	I	T	C	O	R	Y	B	G	B	P	T	I	M	N	E	P	O	P	
F	A	C	H	E	E	Y	H	E	J	T	F	I	N	G	E	R	A	G	P	
B	Q	H	V	C	M	A	Z	T	T	F	P	C	F	K	Y	C	G	M		
K	O	E	B	L	N	H	P	B	A	A	G	Y	M	U	X	I	S	H		
D	J	S	H	O	Z	K	N	F	F	R	I	O	F	L	X	J	P	R		
K	O	T	C	I	N	I	O	E	K	O	M	P	I	R	P	I	T	P	Q	
D	V	E	Q	N	L	S	E	K	Y	P	U	P	I	L	E	B	P	S		
G	L	F	D	C	E	N	L	P	Q	X	P	W	M	G	Y	H	Z	V		
E	Z	R	S	H	E	N	E	A	R	L	O	B	E	R	Y	S	E	E	O	H
V	R	S	H	O	U	L	D	E	R	Z	T	I	L	B	L	E	S	K		
A	C	B	Y	F	H	Z	N	B	H	I	T	S	N	H	A	L	F	Q		
E	S	Y	F	P	U	I	H	A	N	D	U	T	A	M	S	F	O	V		
N	E	C	K	H	E	A	Z	A	C	X	M	K	P	M	H	H	O	O		
F	O	R	E	H	E	A	D	C	R	L	Z	B	E	A	F	J	T	V		

1. \_\_\_\_\_

2. \_\_\_\_\_

3. \_\_\_\_\_

4. \_\_\_\_\_

5. \_\_\_\_\_

6. \_\_\_\_\_

7. \_\_\_\_\_

8. \_\_\_\_\_

9. \_\_\_\_\_

10. \_\_\_\_\_

11. \_\_\_\_\_

12. \_\_\_\_\_

13. \_\_\_\_\_

14. \_\_\_\_\_

15. \_\_\_\_\_






16. \_\_\_\_\_

17. \_\_\_\_\_

18. \_\_\_\_\_

19. \_\_\_\_\_

20. \_\_\_\_\_

1. \_\_\_\_\_

2. \_\_\_\_\_

3. \_\_\_\_\_

4. \_\_\_\_\_

5. \_\_\_\_\_

6. \_\_\_\_\_

7. \_\_\_\_\_

8. \_\_\_\_\_

9. \_\_\_\_\_

10. \_\_\_\_\_

11. \_\_\_\_\_

12. \_\_\_\_\_

13. \_\_\_\_\_

14. \_\_\_\_\_

15. \_\_\_\_\_






16. \_\_\_\_\_

17. \_\_\_\_\_

18. \_\_\_\_\_

19. \_\_\_\_\_

20. \_\_\_\_\_

1. \_\_\_\_\_

2. \_\_\_\_\_

3. \_\_\_\_\_

4. \_\_\_\_\_

5. \_\_\_\_\_

6. \_\_\_\_\_

7. \_\_\_\_\_

8. \_\_\_\_\_

9. \_\_\_\_\_

10. \_\_\_\_\_

11. \_\_\_\_\_

12. \_\_\_\_\_

13. \_\_\_\_\_

14. \_\_\_\_\_

15. \_\_\_\_\_






16. \_\_\_\_\_

17. \_\_\_\_\_

18. \_\_\_\_\_

19. \_\_\_\_\_

20. \_\_\_\_\_

1. \_\_\_\_\_

2. \_\_\_\_\_

3. \_\_\_\_\_

4. \_\_\_\_\_

5. \_\_\_\_\_

6. \_\_\_\_\_

7. \_\_\_\_\_

8. \_\_\_\_\_

9. \_\_\_\_\_

10. \_\_\_\_\_

11. \_\_\_\_\_

12. \_\_\_\_\_

13. \_\_\_\_\_

14. \_\_\_\_\_

15. \_\_\_\_\_

16. \_\_\_\_\_

17. \_\_\_\_\_

18. \_\_\_\_\_

19. \_\_\_\_\_

20. \_\_\_\_\_

Copyright © 2019 engworksheets.com All right reserved.

## **GK**

- # Write Do's and Don'ts of coronavirus on an A-4 size sheet. (Make drawings also)
- # Collect any 10 highlights of year 2023 and Paste it on A4 size sheet.
- # Practice chapter 1 to 10

## **COMPUTER**

- # Collect the pictures of places where computers are used and paste in your notebook.
- # Make any two beautiful drawings Tux Paint, take the screenshot and paste the printout in notebook.

## **ART**

- # Make a Teddy bear using newspaper roll .  
OR
- # Make a wall hanging using waste material.

